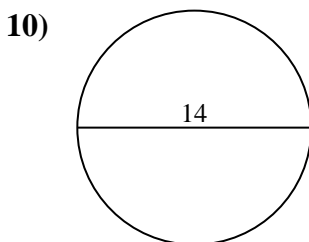
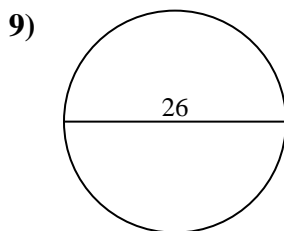
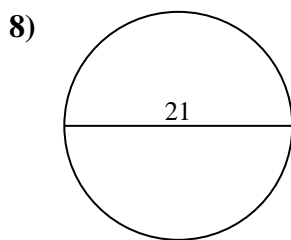
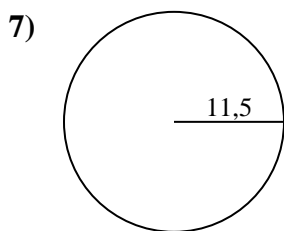
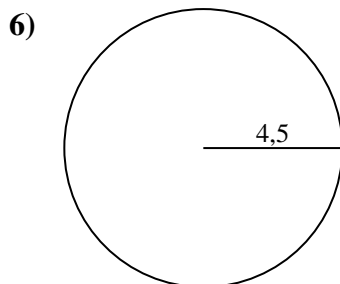
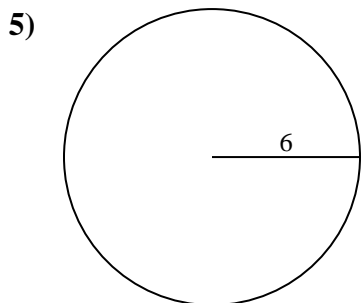
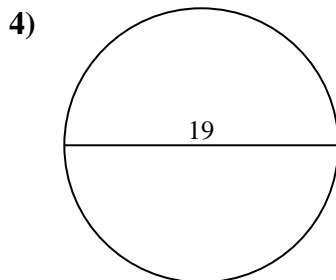
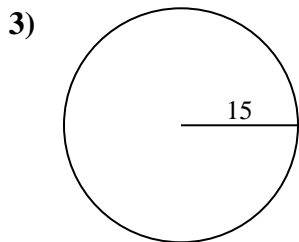
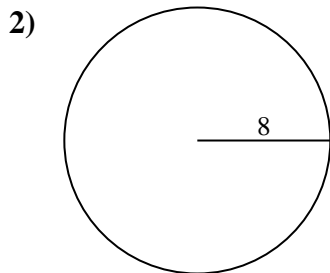
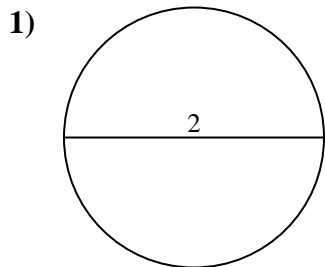




Berechne die Kreisfläche und den Kreisumfang jedes Kreises. Die Kreise sind nicht maßstäblich.

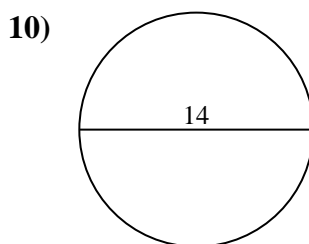
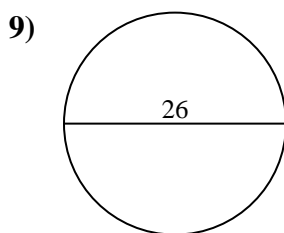
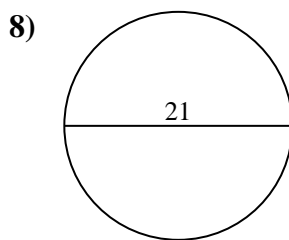
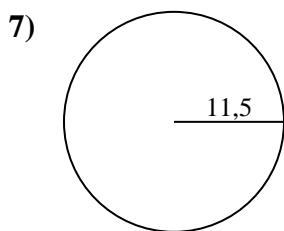
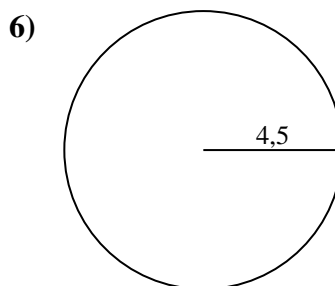
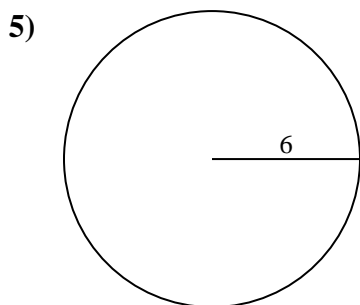
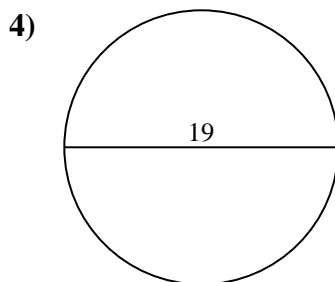
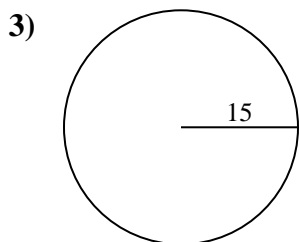
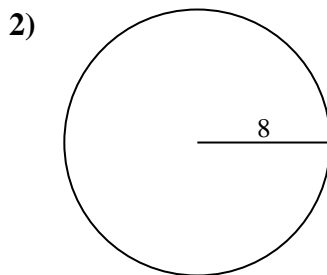
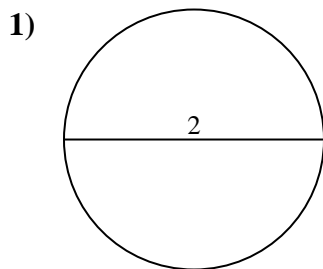


**Antworten**

- 1. \_\_\_\_\_
- 2. \_\_\_\_\_
- 3. \_\_\_\_\_
- 4. \_\_\_\_\_
- 5. \_\_\_\_\_
- 6. \_\_\_\_\_
- 7. \_\_\_\_\_
- 8. \_\_\_\_\_
- 9. \_\_\_\_\_
- 10. \_\_\_\_\_



Berechne die Kreisfläche und den Kreisumfang jedes Kreises. Die Kreise sind nicht maßstäblich.

**Antworten**

1.	<u>3,1</u>	<u>6,3</u>
2.	<u>201,1</u>	<u>50,3</u>
3.	<u>706,9</u>	<u>94,2</u>
4.	<u>283,5</u>	<u>59,7</u>
5.	<u>113,1</u>	<u>37,7</u>
6.	<u>63,6</u>	<u>28,3</u>
7.	<u>415,5</u>	<u>72,3</u>
8.	<u>346,4</u>	<u>66</u>
9.	<u>530,9</u>	<u>81,7</u>
10.	<u>153,9</u>	<u>44</u>

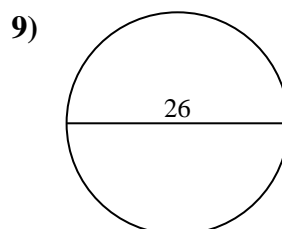
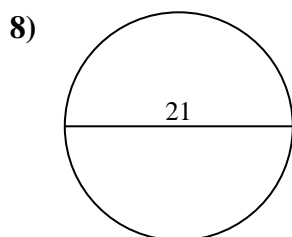
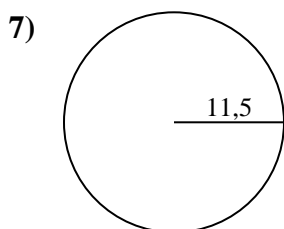
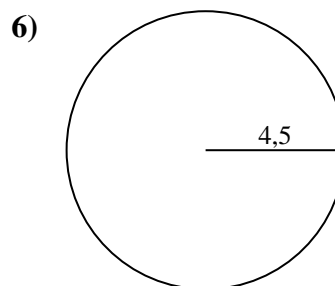
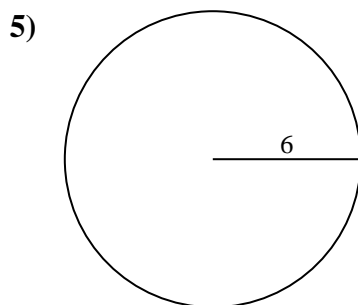
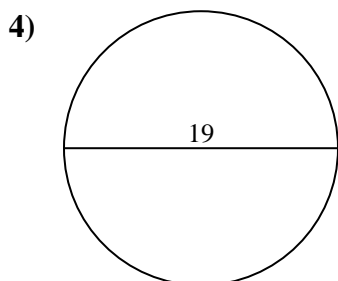
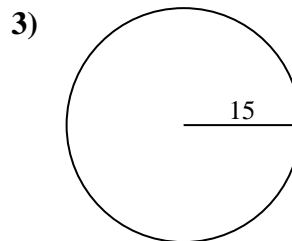
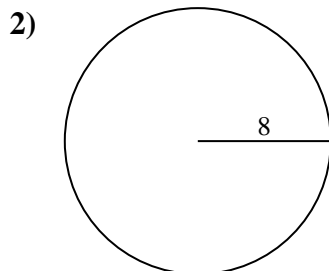
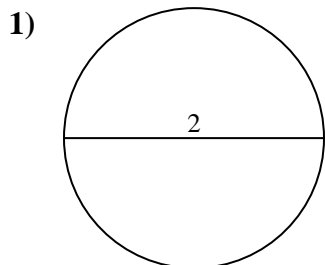


Berechne die Kreisfläche und den Kreisumfang jedes Kreises. Die Kreise sind nicht maßstäblich.

81,7	72,3	706,9	346,4	94,2
6,3	530,9	415,5	37,7	66
3,1	28,3	63,6	50,3	201,1
113,1	59,7	283,5		

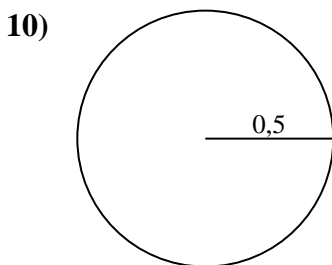
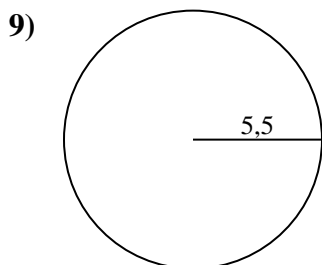
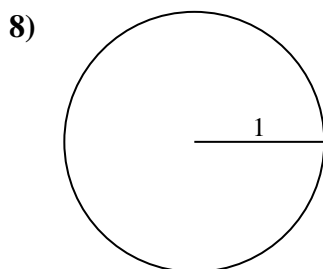
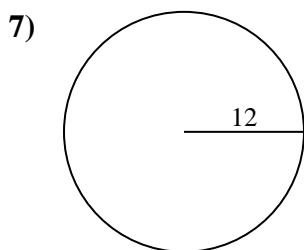
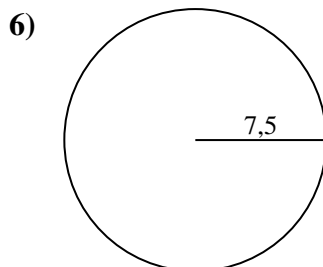
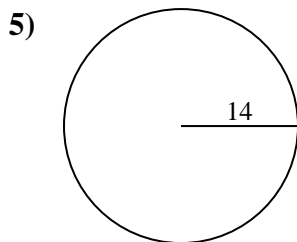
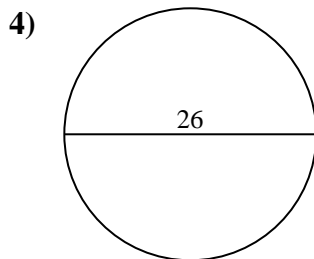
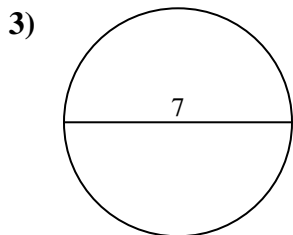
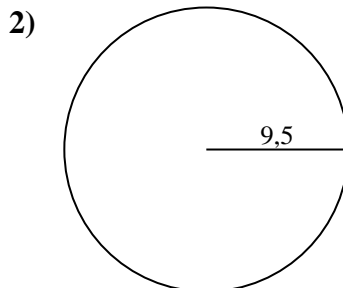
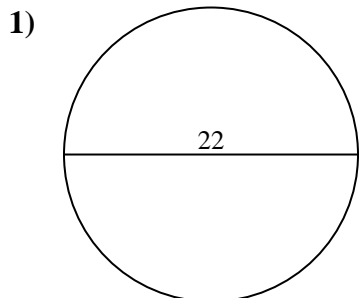
**Antworten**

1. \_\_\_\_\_
2. \_\_\_\_\_
3. \_\_\_\_\_
4. \_\_\_\_\_
5. \_\_\_\_\_
6. \_\_\_\_\_
7. \_\_\_\_\_
8. \_\_\_\_\_
9. \_\_\_\_\_





Berechne die Kreisfläche und den Kreisumfang jedes Kreises. Die Kreise sind nicht maßstäblich.

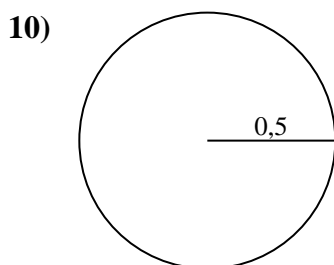
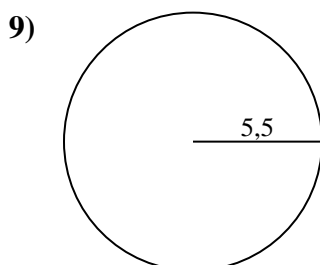
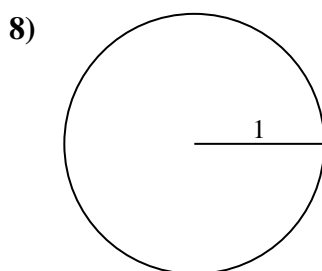
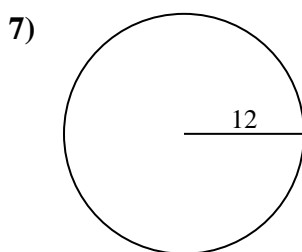
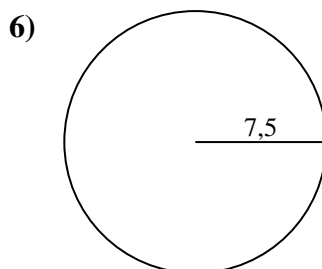
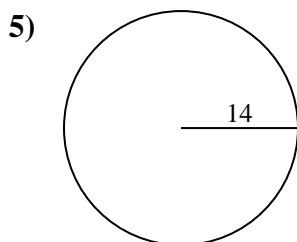
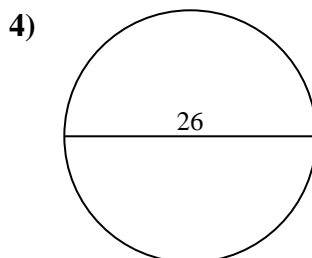
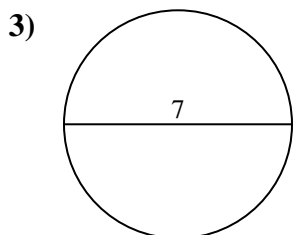
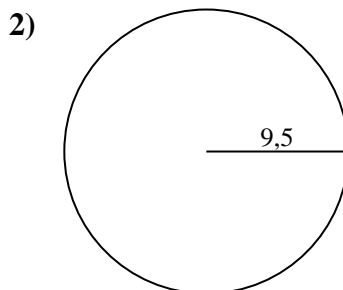
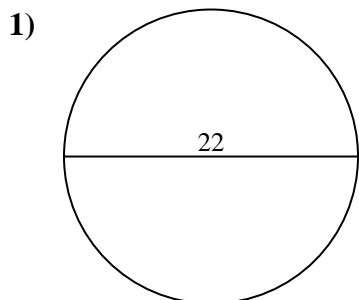


Antworten

- 1. \_\_\_\_\_
- 2. \_\_\_\_\_
- 3. \_\_\_\_\_
- 4. \_\_\_\_\_
- 5. \_\_\_\_\_
- 6. \_\_\_\_\_
- 7. \_\_\_\_\_
- 8. \_\_\_\_\_
- 9. \_\_\_\_\_
- 10. \_\_\_\_\_



Berechne die Kreisfläche und den Kreisumfang jedes Kreises. Die Kreise sind nicht maßstäblich.

**Antworten**

1.	<u>380,1</u>	<u>69,1</u>
2.	<u>283,5</u>	<u>59,7</u>
3.	<u>38,5</u>	<u>22</u>
4.	<u>530,9</u>	<u>81,7</u>
5.	<u>615,8</u>	<u>88</u>
6.	<u>176,7</u>	<u>47,1</u>
7.	<u>452,4</u>	<u>75,4</u>
8.	<u>3,1</u>	<u>6,3</u>
9.	<u>95</u>	<u>34,6</u>
10.	<u>0,8</u>	<u>3,1</u>

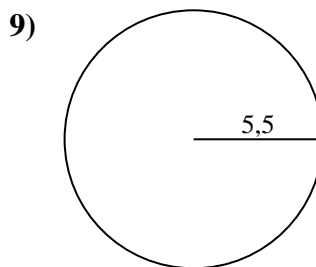
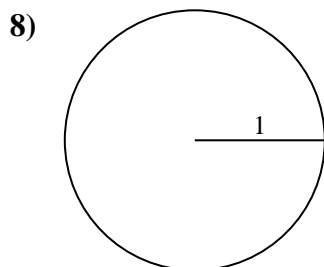
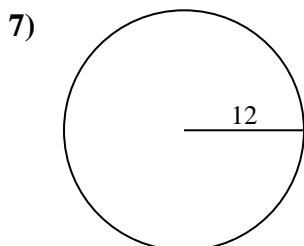
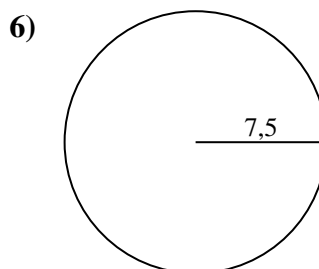
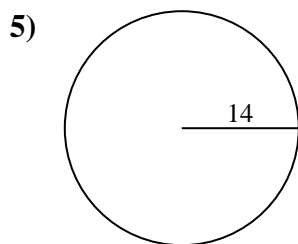
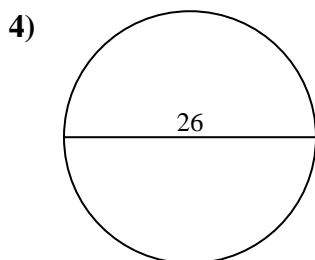
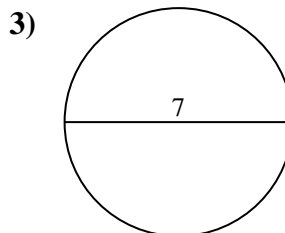
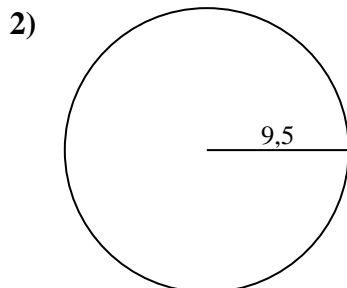
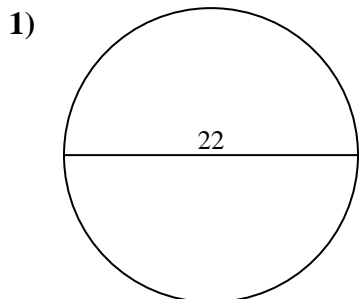


Berechne die Kreisfläche und den Kreisumfang jedes Kreises. Die Kreise sind nicht maßstäblich.

95	34,6	283,5	380,1	530,9
75,4	59,7	615,8	452,4	6,3
81,7	3,1	47,1	22	176,7
69,1	38,5	88		

**Antworten**

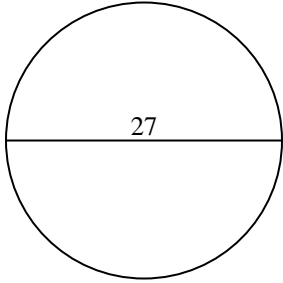
1. \_\_\_\_\_
2. \_\_\_\_\_
3. \_\_\_\_\_
4. \_\_\_\_\_
5. \_\_\_\_\_
6. \_\_\_\_\_
7. \_\_\_\_\_
8. \_\_\_\_\_
9. \_\_\_\_\_



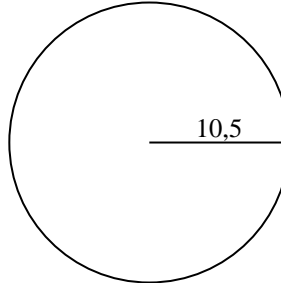


Berechne die Kreisfläche und den Kreisumfang jedes Kreises. Die Kreise sind nicht maßstäblich.

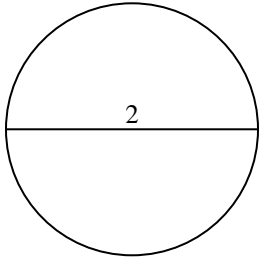
1)



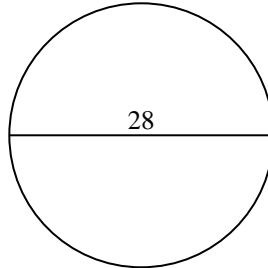
2)



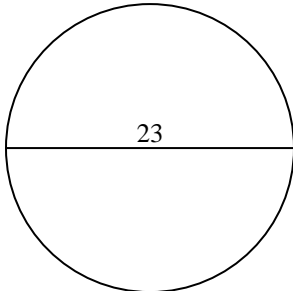
3)



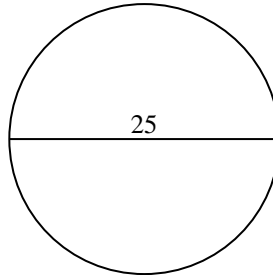
4)



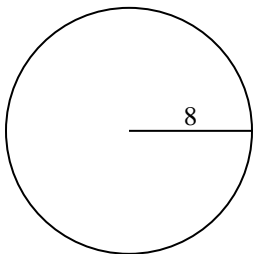
5)



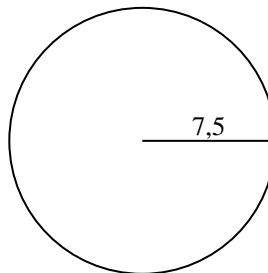
6)



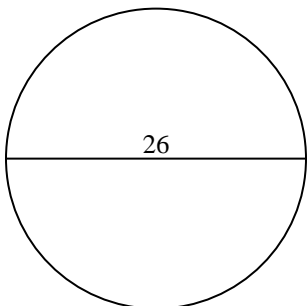
7)



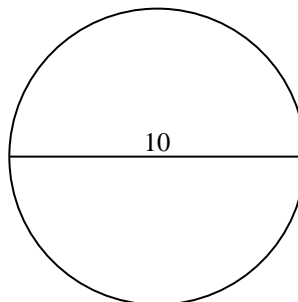
8)



9)



10)

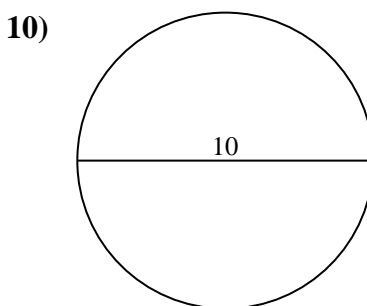
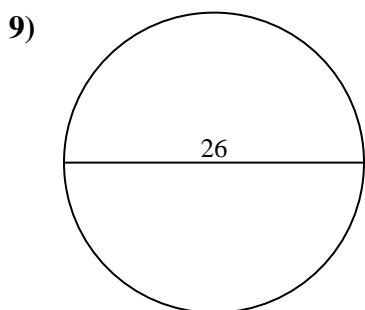
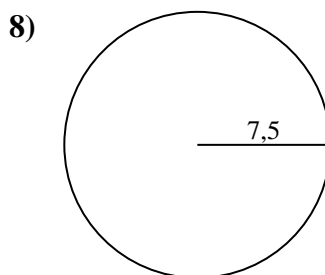
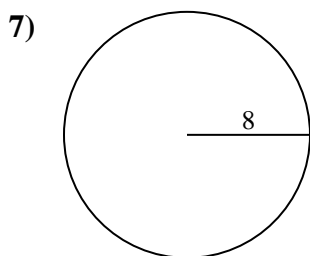
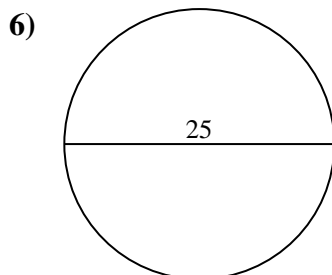
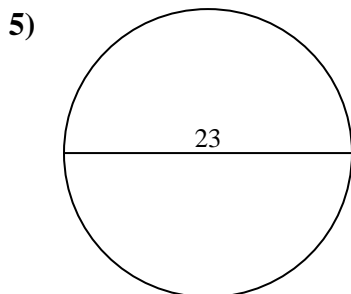
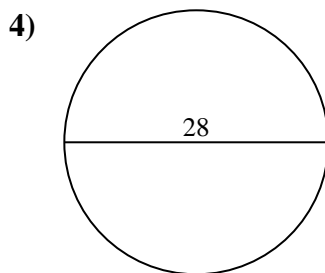
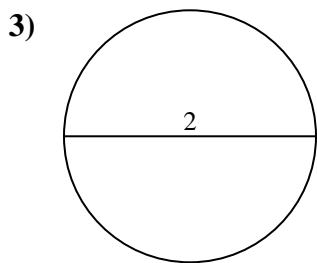
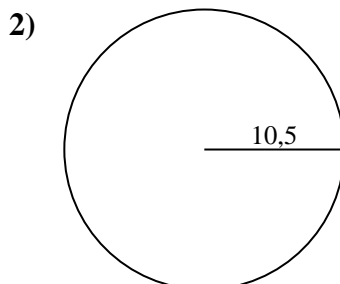
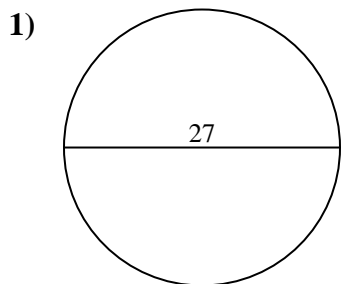


**Antworten**

- 1. \_\_\_\_\_
- 2. \_\_\_\_\_
- 3. \_\_\_\_\_
- 4. \_\_\_\_\_
- 5. \_\_\_\_\_
- 6. \_\_\_\_\_
- 7. \_\_\_\_\_
- 8. \_\_\_\_\_
- 9. \_\_\_\_\_
- 10. \_\_\_\_\_



Berechne die Kreisfläche und den Kreisumfang jedes Kreises. Die Kreise sind nicht maßstäblich.



**Antworten**

1.	<u>572,6</u>	<u>84,8</u>
2.	<u>346,4</u>	<u>66</u>
3.	<u>3,1</u>	<u>6,3</u>
4.	<u>615,8</u>	<u>88</u>
5.	<u>415,5</u>	<u>72,3</u>
6.	<u>490,9</u>	<u>78,5</u>
7.	<u>201,1</u>	<u>50,3</u>
8.	<u>176,7</u>	<u>47,1</u>
9.	<u>530,9</u>	<u>81,7</u>
10.	<u>78,5</u>	<u>31,4</u>



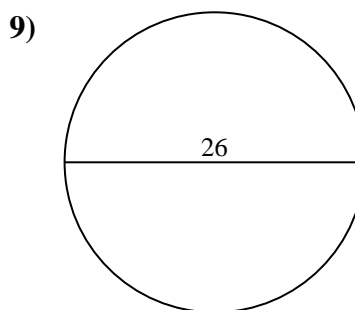
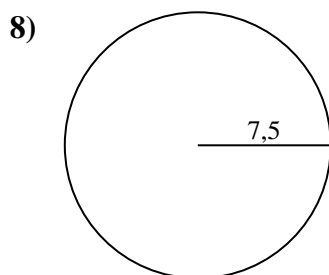
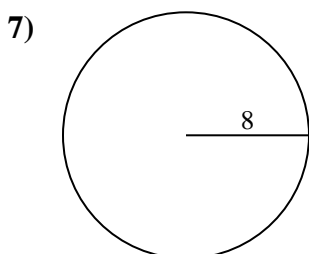
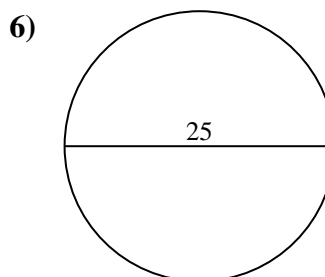
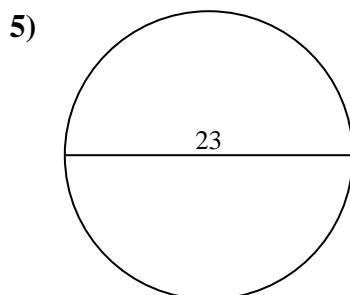
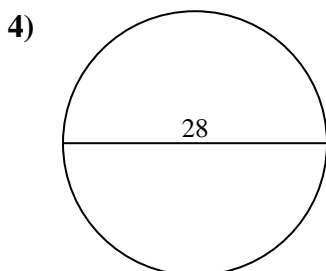
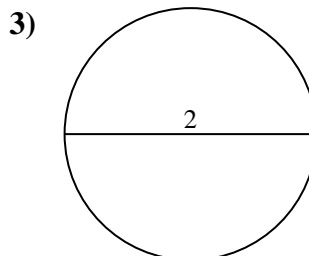
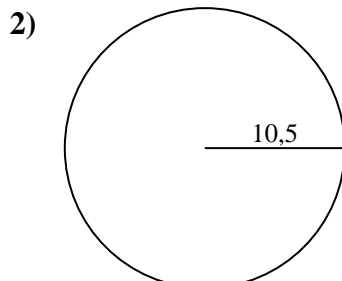
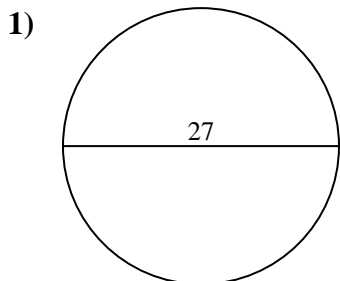


Berechne die Kreisfläche und den Kreisumfang jedes Kreises. Die Kreise sind nicht maßstäblich.

3,1	346,4	530,9	6,3	572,6
66	490,9	201,1	415,5	176,7
47,1	615,8	88	78,5	72,3
81,7	50,3	84,8		

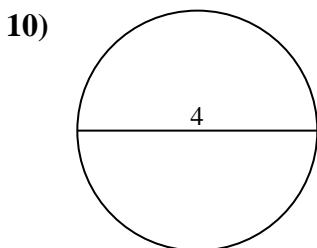
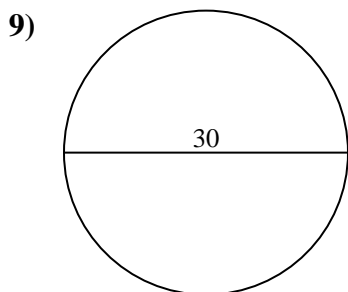
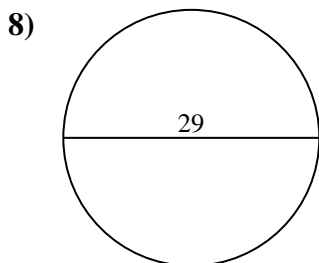
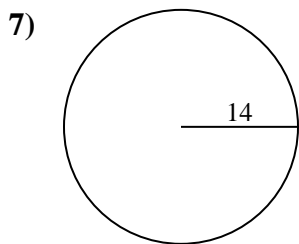
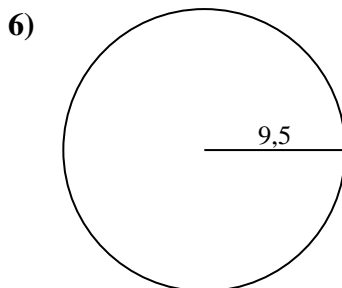
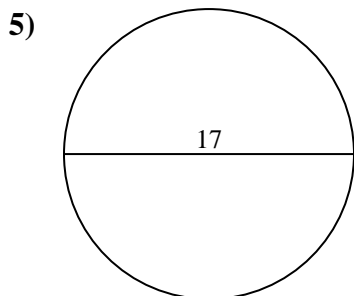
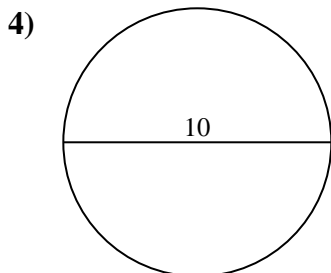
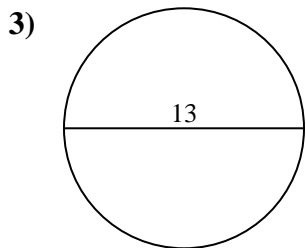
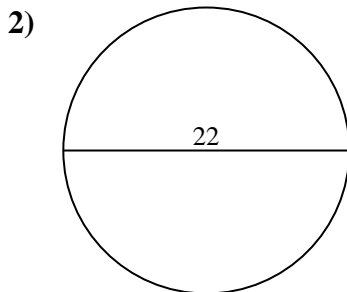
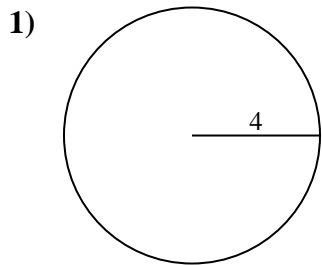
**Antworten**

1. \_\_\_\_\_
2. \_\_\_\_\_
3. \_\_\_\_\_
4. \_\_\_\_\_
5. \_\_\_\_\_
6. \_\_\_\_\_
7. \_\_\_\_\_
8. \_\_\_\_\_
9. \_\_\_\_\_





Berechne die Kreisfläche und den Kreisumfang jedes Kreises. Die Kreise sind nicht maßstäblich.

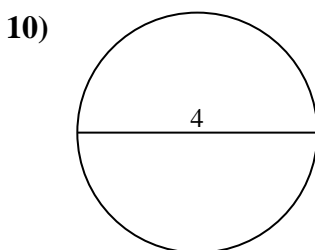
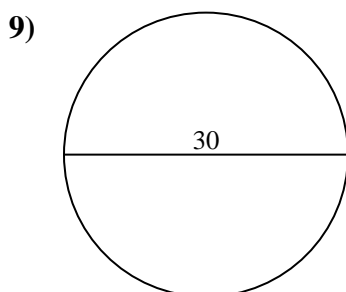
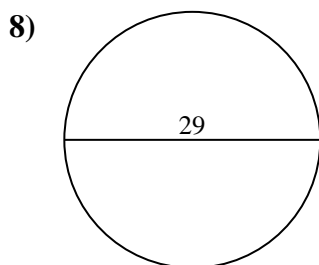
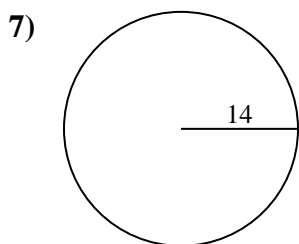
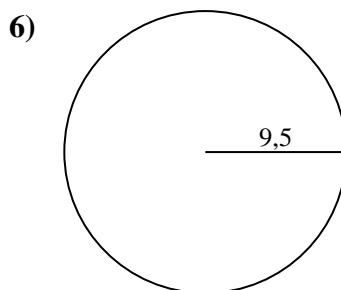
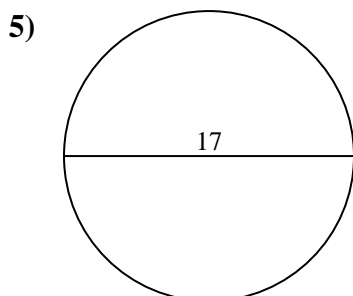
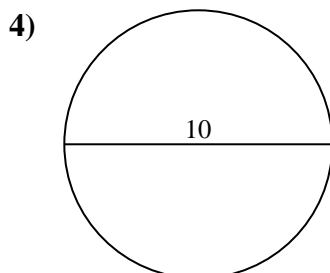
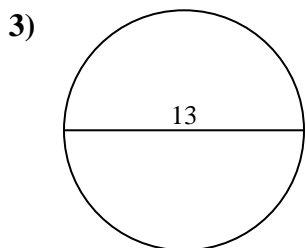
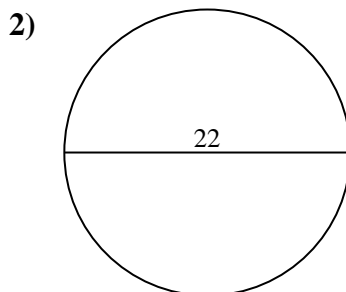
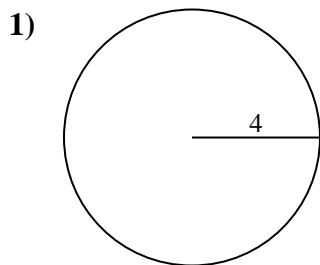


**Antworten**

- 1. \_\_\_\_\_
- 2. \_\_\_\_\_
- 3. \_\_\_\_\_
- 4. \_\_\_\_\_
- 5. \_\_\_\_\_
- 6. \_\_\_\_\_
- 7. \_\_\_\_\_
- 8. \_\_\_\_\_
- 9. \_\_\_\_\_
- 10. \_\_\_\_\_



Berechne die Kreisfläche und den Kreisumfang jedes Kreises. Die Kreise sind nicht maßstäblich.

**Antworten**

1.	<u>50,3</u>	<u>25,1</u>
2.	<u>380,1</u>	<u>69,1</u>
3.	<u>132,7</u>	<u>40,8</u>
4.	<u>78,5</u>	<u>31,4</u>
5.	<u>227</u>	<u>53,4</u>
6.	<u>283,5</u>	<u>59,7</u>
7.	<u>615,8</u>	<u>88</u>
8.	<u>660,5</u>	<u>91,1</u>
9.	<u>706,9</u>	<u>94,2</u>
10.	<u>12,6</u>	<u>12,6</u>

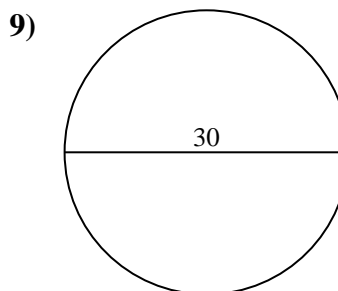
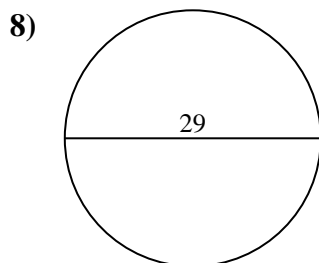
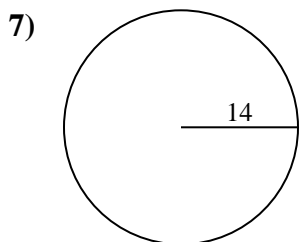
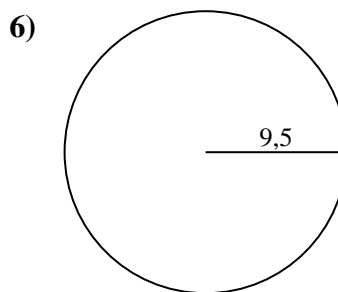
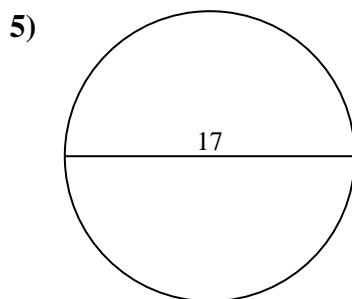
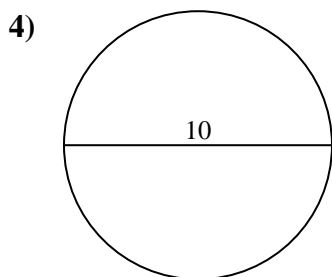
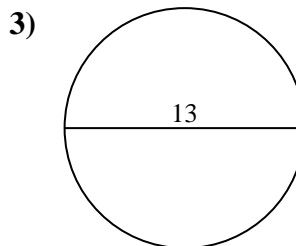
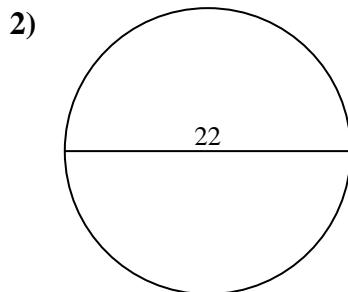
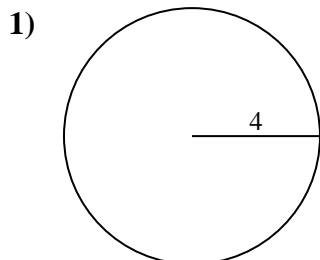


Berechne die Kreisfläche und den Kreisumfang jedes Kreises. Die Kreise sind nicht maßstäblich.

25,1	227	78,5	615,8	91,1
380,1	31,4	132,7	706,9	59,7
50,3	69,1	88	53,4	660,5
283,5	40,8	94,2		

**Antworten**

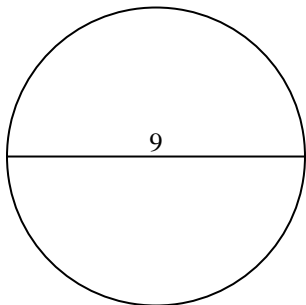
1. \_\_\_\_\_
2. \_\_\_\_\_
3. \_\_\_\_\_
4. \_\_\_\_\_
5. \_\_\_\_\_
6. \_\_\_\_\_
7. \_\_\_\_\_
8. \_\_\_\_\_
9. \_\_\_\_\_



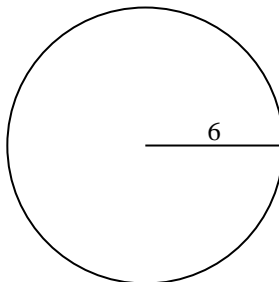


Berechne die Kreisfläche und den Kreisumfang jedes Kreises. Die Kreise sind nicht maßstäblich.

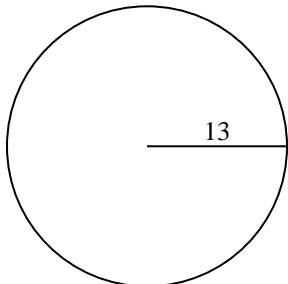
1)



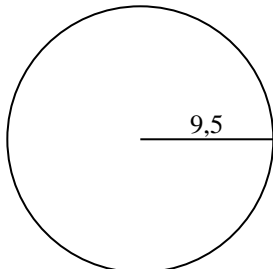
2)



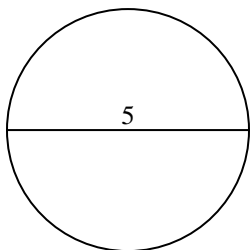
3)



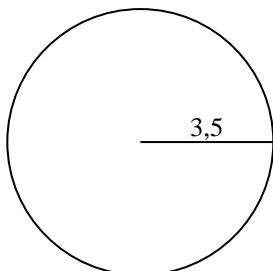
4)



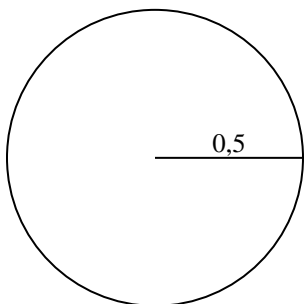
5)



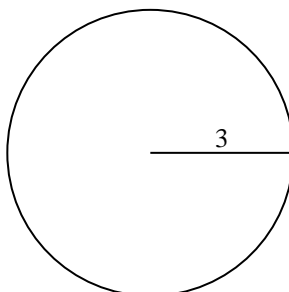
6)



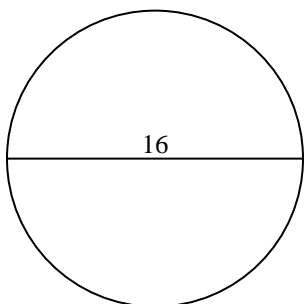
7)



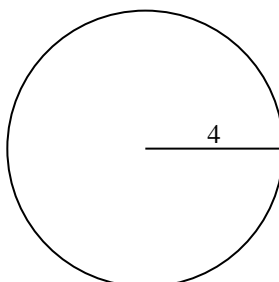
8)



9)



10)

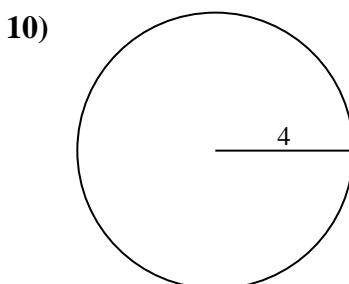
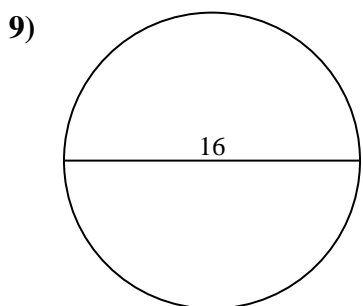
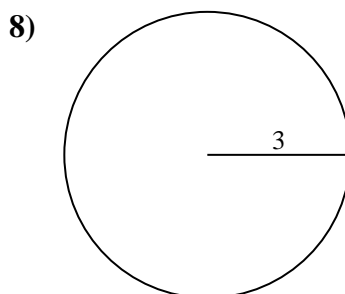
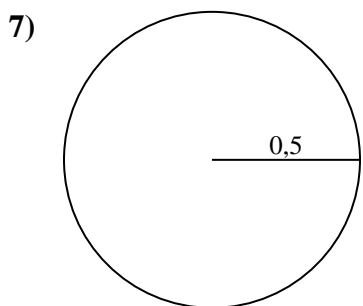
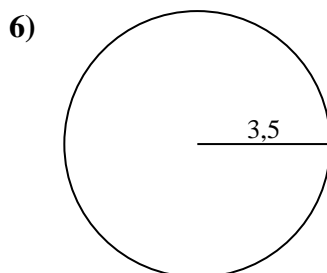
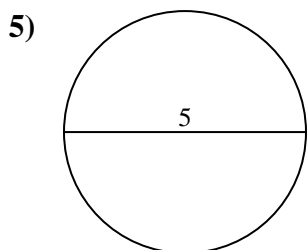
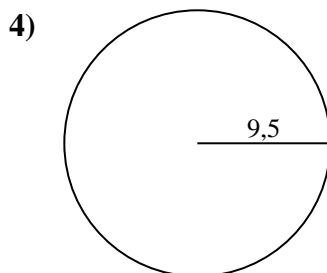
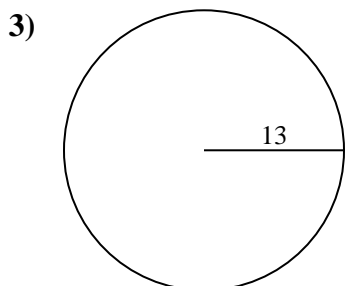
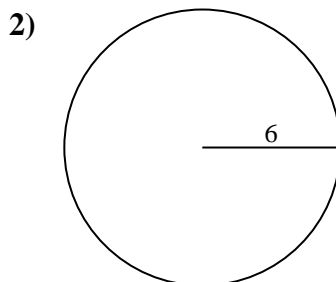
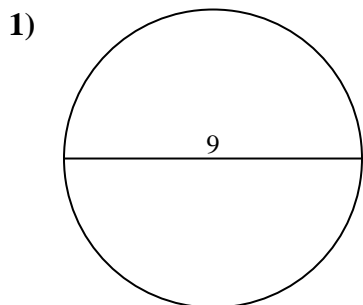


Antworten

- 1. \_\_\_\_\_
- 2. \_\_\_\_\_
- 3. \_\_\_\_\_
- 4. \_\_\_\_\_
- 5. \_\_\_\_\_
- 6. \_\_\_\_\_
- 7. \_\_\_\_\_
- 8. \_\_\_\_\_
- 9. \_\_\_\_\_
- 10. \_\_\_\_\_



Berechne die Kreisfläche und den Kreisumfang jedes Kreises. Die Kreise sind nicht maßstäblich.

**Antworten**

1.	<u>63,6</u>	<u>28,3</u>
2.	<u>113,1</u>	<u>37,7</u>
3.	<u>530,9</u>	<u>81,7</u>
4.	<u>283,5</u>	<u>59,7</u>
5.	<u>19,6</u>	<u>15,7</u>
6.	<u>38,5</u>	<u>22</u>
7.	<u>0,8</u>	<u>3,1</u>
8.	<u>28,3</u>	<u>18,8</u>
9.	<u>201,1</u>	<u>50,3</u>
10.	<u>50,3</u>	<u>25,1</u>

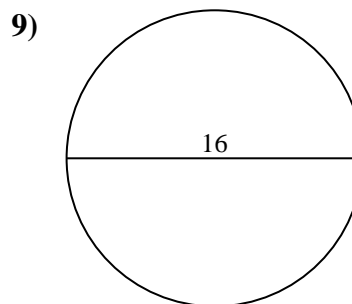
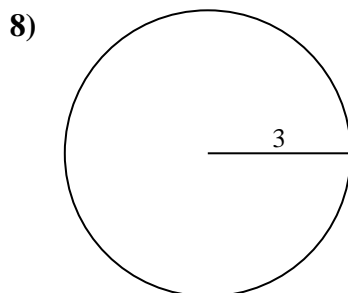
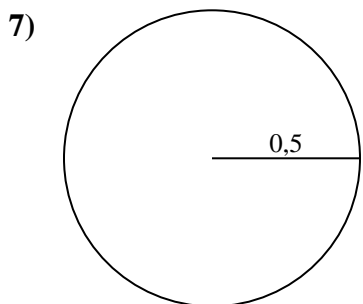
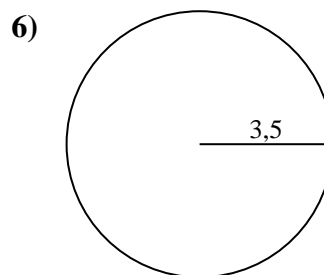
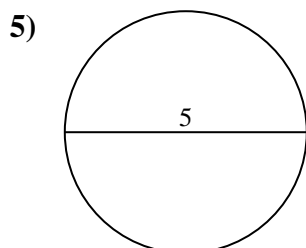
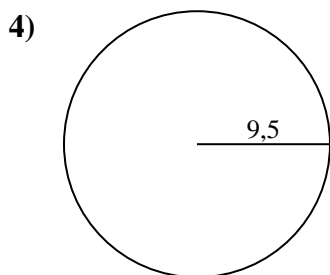
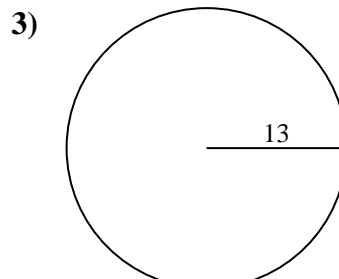
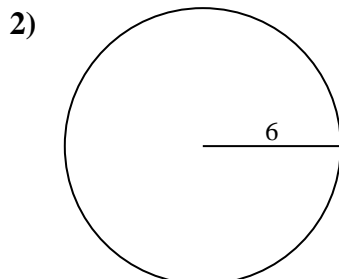
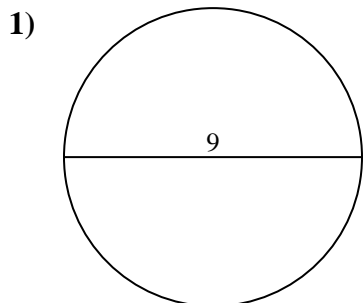


Berechne die Kreisfläche und den Kreisumfang jedes Kreises. Die Kreise sind nicht maßstäblich.

18,8	0,8	59,7	28,3	201,1
38,5	37,7	63,6	15,7	19,6
28,3	50,3	81,7	283,5	530,9
22	3,1	113,1		

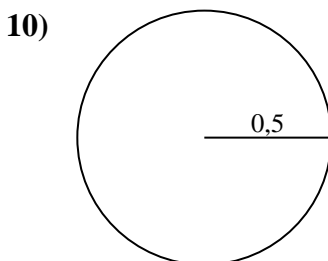
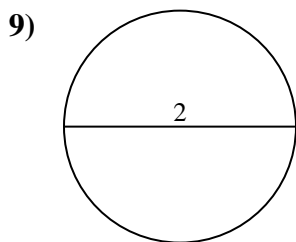
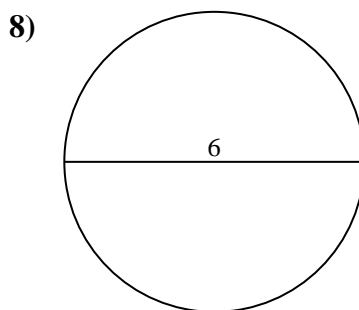
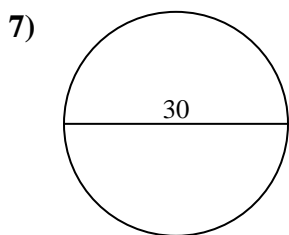
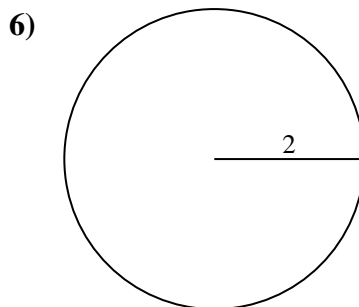
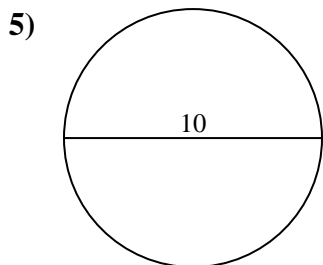
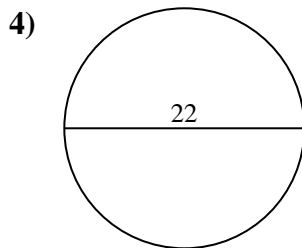
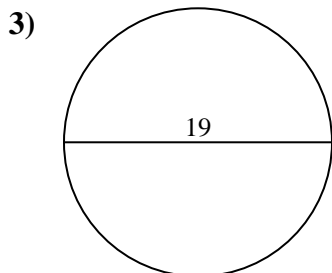
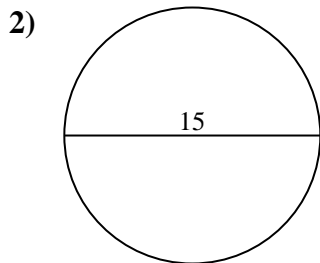
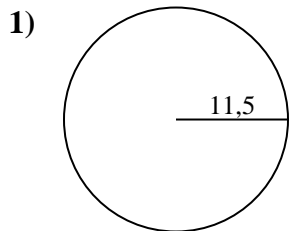
**Antworten**

1. \_\_\_\_\_
2. \_\_\_\_\_
3. \_\_\_\_\_
4. \_\_\_\_\_
5. \_\_\_\_\_
6. \_\_\_\_\_
7. \_\_\_\_\_
8. \_\_\_\_\_
9. \_\_\_\_\_





Berechne die Kreisfläche und den Kreisumfang jedes Kreises. Die Kreise sind nicht maßstäblich.



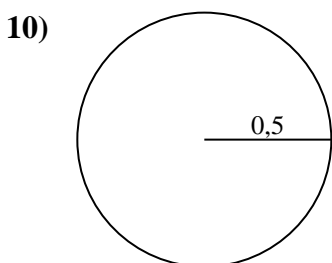
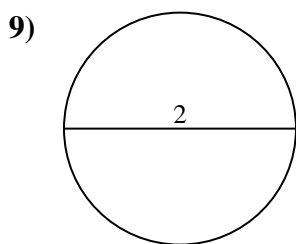
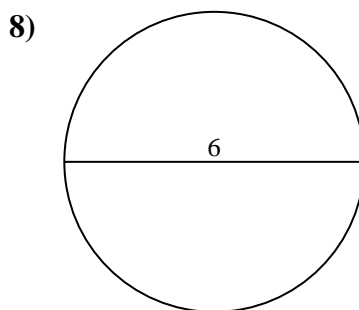
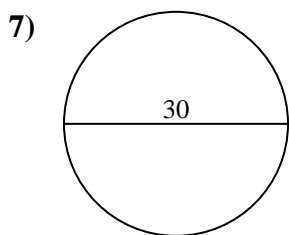
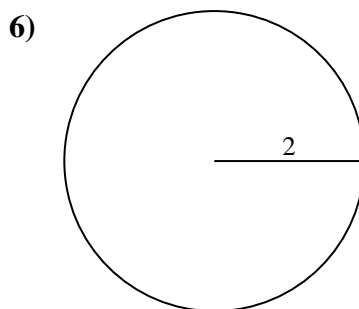
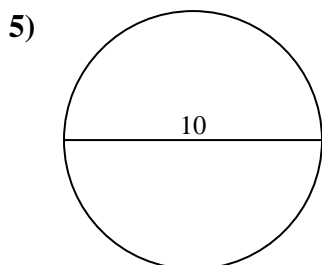
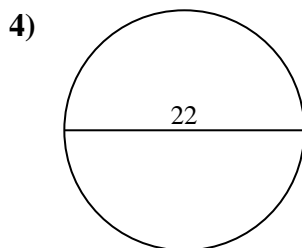
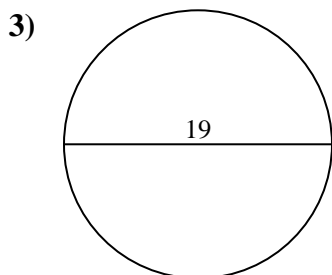
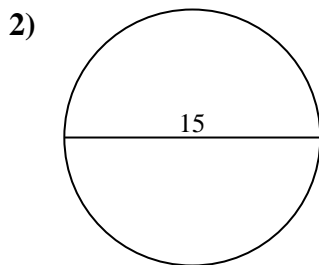
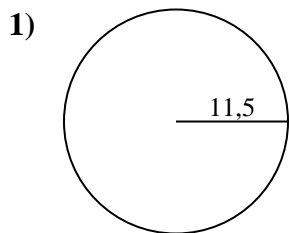
**Antworten**

- 1. \_\_\_\_\_
- 2. \_\_\_\_\_
- 3. \_\_\_\_\_
- 4. \_\_\_\_\_
- 5. \_\_\_\_\_
- 6. \_\_\_\_\_
- 7. \_\_\_\_\_
- 8. \_\_\_\_\_
- 9. \_\_\_\_\_
- 10. \_\_\_\_\_





Berechne die Kreisfläche und den Kreisumfang jedes Kreises. Die Kreise sind nicht maßstäblich.

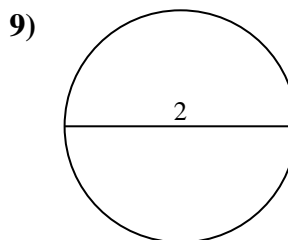
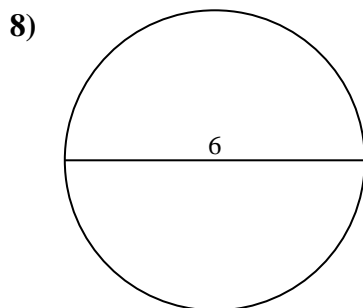
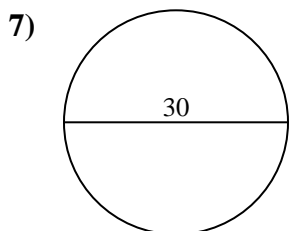
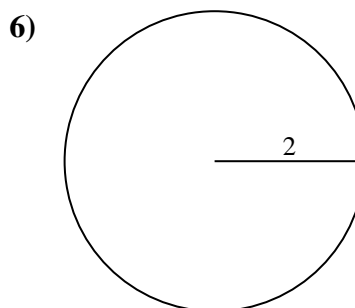
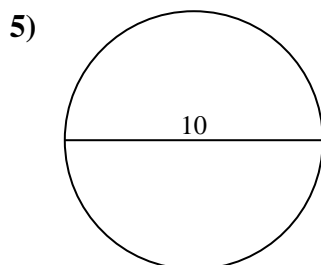
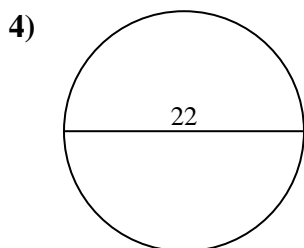
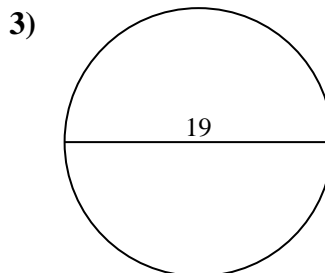
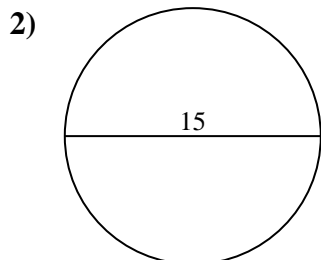
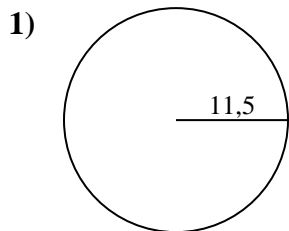
**Antworten**

1.	<u>415,5</u>	<u>72,3</u>
2.	<u>176,7</u>	<u>47,1</u>
3.	<u>283,5</u>	<u>59,7</u>
4.	<u>380,1</u>	<u>69,1</u>
5.	<u>78,5</u>	<u>31,4</u>
6.	<u>12,6</u>	<u>12,6</u>
7.	<u>706,9</u>	<u>94,2</u>
8.	<u>28,3</u>	<u>18,8</u>
9.	<u>3,1</u>	<u>6,3</u>
10.	<u>0,8</u>	<u>3,1</u>



Berechne die Kreisfläche und den Kreisumfang jedes Kreises. Die Kreise sind nicht maßstäblich.

72,3	18,8	78,5	6,3	380,1
706,9	12,6	12,6	69,1	415,5
176,7	28,3	94,2	47,1	31,4
283,5	3,1	59,7		



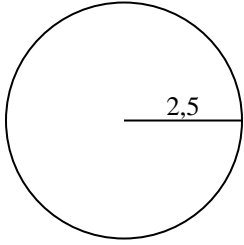
**Antworten**

1. \_\_\_\_\_
2. \_\_\_\_\_
3. \_\_\_\_\_
4. \_\_\_\_\_
5. \_\_\_\_\_
6. \_\_\_\_\_
7. \_\_\_\_\_
8. \_\_\_\_\_
9. \_\_\_\_\_

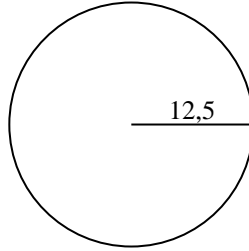


Berechne die Kreisfläche und den Kreisumfang jedes Kreises. Die Kreise sind nicht maßstäblich.

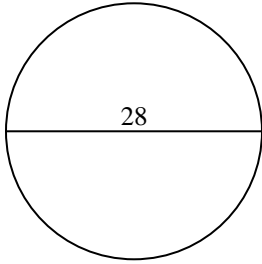
1)



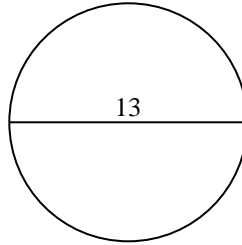
2)



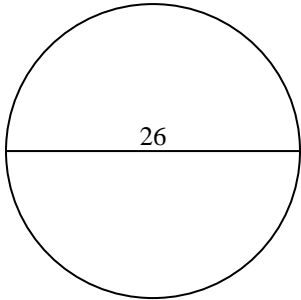
3)



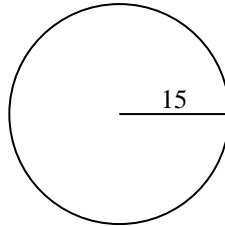
4)



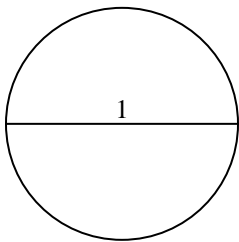
5)



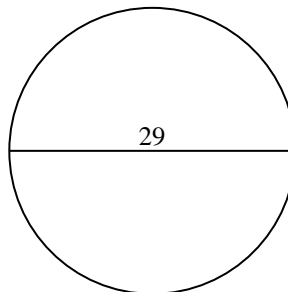
6)



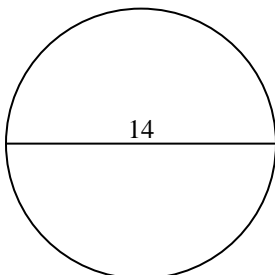
7)



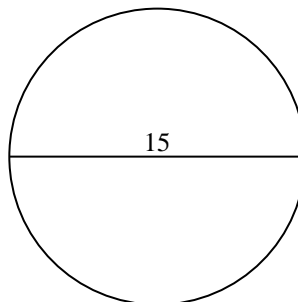
8)



9)



10)

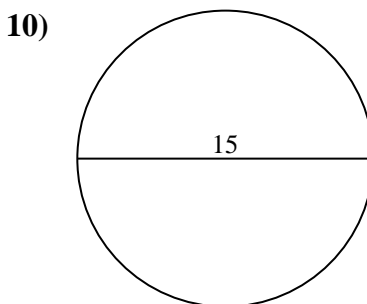
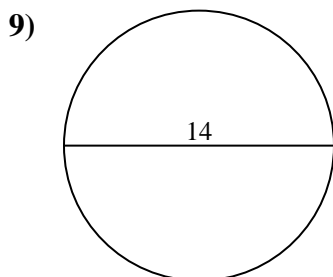
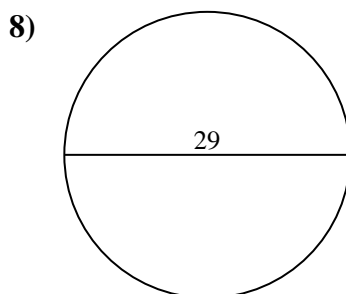
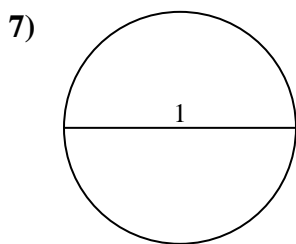
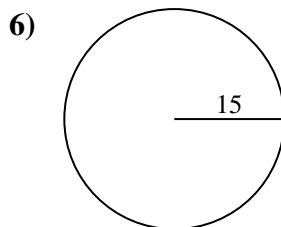
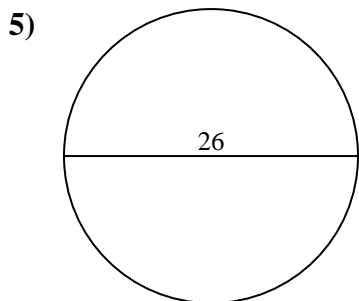
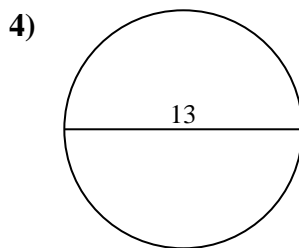
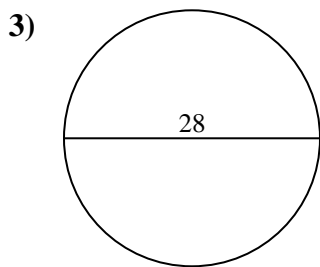
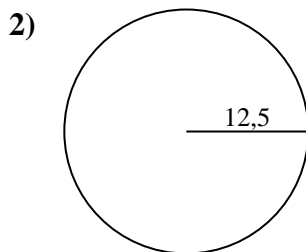
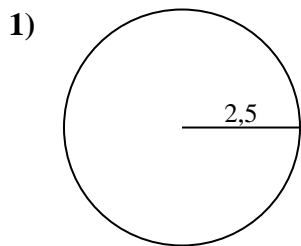


**Antworten**

- 1. \_\_\_\_\_
- 2. \_\_\_\_\_
- 3. \_\_\_\_\_
- 4. \_\_\_\_\_
- 5. \_\_\_\_\_
- 6. \_\_\_\_\_
- 7. \_\_\_\_\_
- 8. \_\_\_\_\_
- 9. \_\_\_\_\_
- 10. \_\_\_\_\_



Berechne die Kreisfläche und den Kreisumfang jedes Kreises. Die Kreise sind nicht maßstäblich.



**Antworten**

1.	<u>19,6</u>	<u>15,7</u>
2.	<u>490,9</u>	<u>78,5</u>
3.	<u>615,8</u>	<u>88</u>
4.	<u>132,7</u>	<u>40,8</u>
5.	<u>530,9</u>	<u>81,7</u>
6.	<u>706,9</u>	<u>94,2</u>
7.	<u>0,8</u>	<u>3,1</u>
8.	<u>660,5</u>	<u>91,1</u>
9.	<u>153,9</u>	<u>44</u>
10.	<u>176,7</u>	<u>47,1</u>

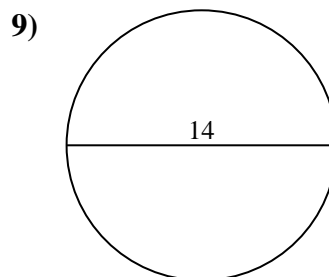
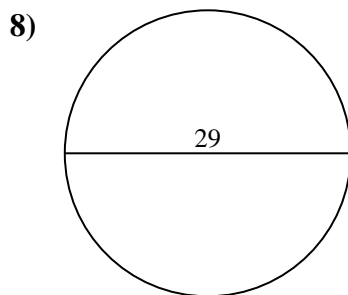
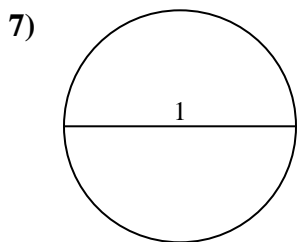
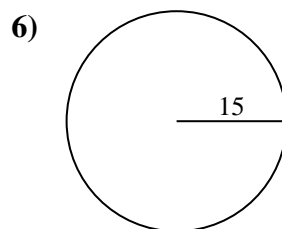
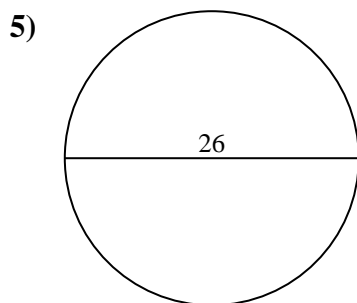
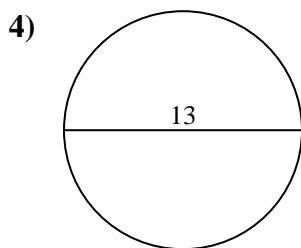
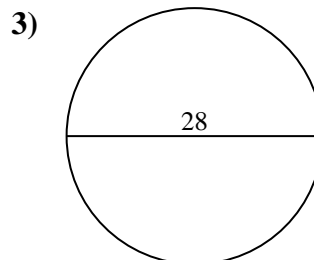
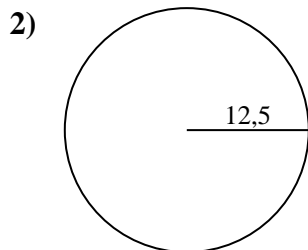
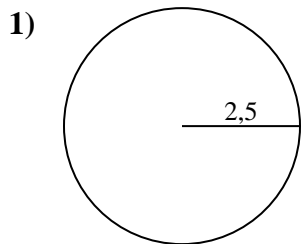


Berechne die Kreisfläche und den Kreisumfang jedes Kreises. Die Kreise sind nicht maßstäblich.

490,9	78,5	15,7	88	530,9
0,8	153,9	44	660,5	3,1
615,8	81,7	94,2	91,1	19,6
706,9	132,7	40,8		

**Antworten**

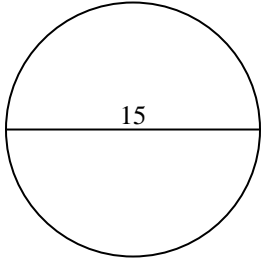
1. \_\_\_\_\_
2. \_\_\_\_\_
3. \_\_\_\_\_
4. \_\_\_\_\_
5. \_\_\_\_\_
6. \_\_\_\_\_
7. \_\_\_\_\_
8. \_\_\_\_\_
9. \_\_\_\_\_



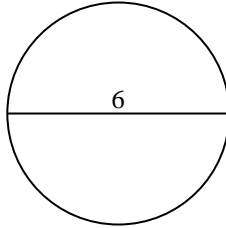


Berechne die Kreisfläche und den Kreisumfang jedes Kreises. Die Kreise sind nicht maßstäblich.

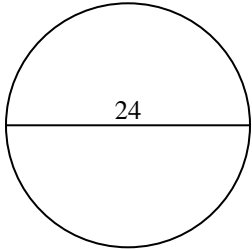
1)



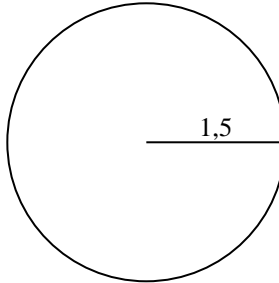
2)



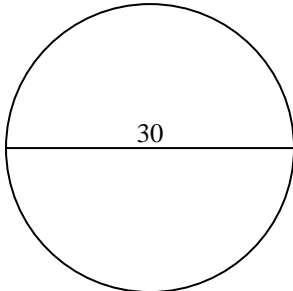
3)



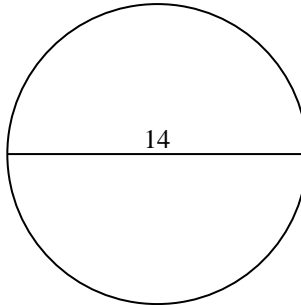
4)



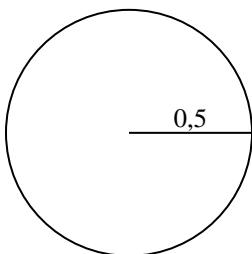
5)



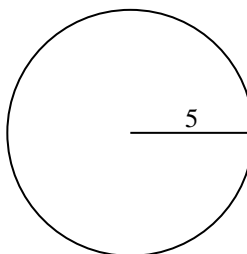
6)



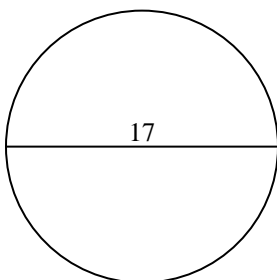
7)



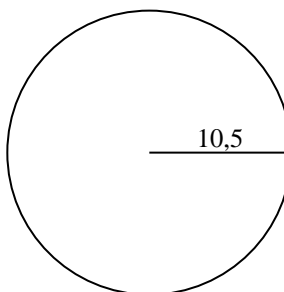
8)



9)



10)

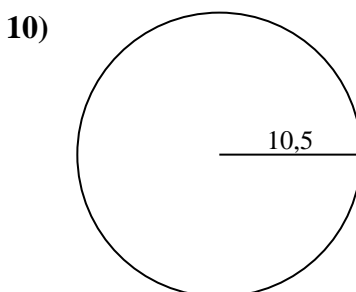
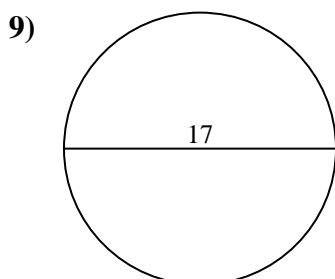
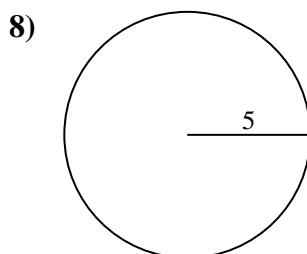
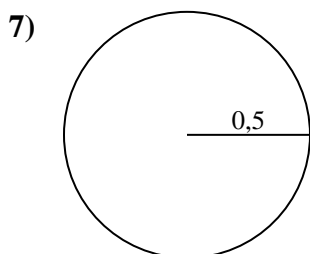
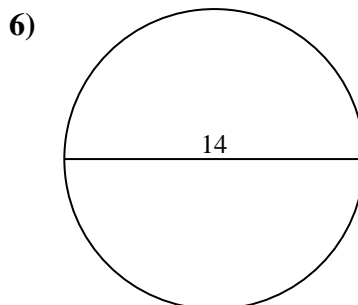
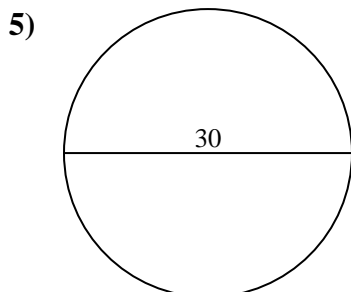
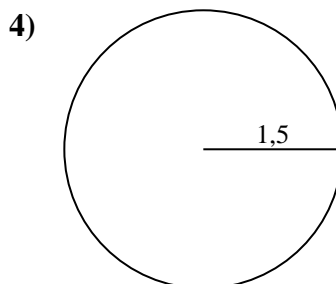
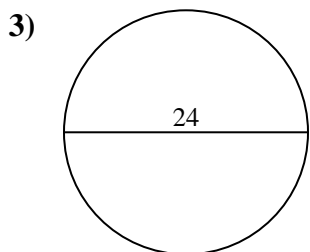
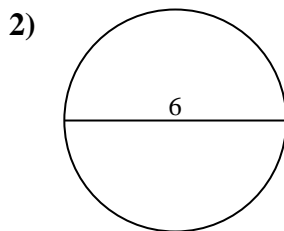
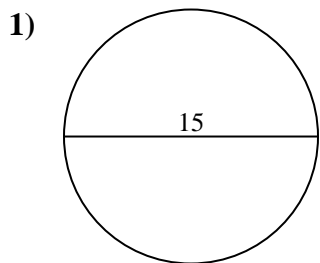


Antworten

- 1. \_\_\_\_\_
- 2. \_\_\_\_\_
- 3. \_\_\_\_\_
- 4. \_\_\_\_\_
- 5. \_\_\_\_\_
- 6. \_\_\_\_\_
- 7. \_\_\_\_\_
- 8. \_\_\_\_\_
- 9. \_\_\_\_\_
- 10. \_\_\_\_\_



Berechne die Kreisfläche und den Kreisumfang jedes Kreises. Die Kreise sind nicht maßstäblich.



**Antworten**

1.	<u>176,7</u>	<u>47,1</u>
2.	<u>28,3</u>	<u>18,8</u>
3.	<u>452,4</u>	<u>75,4</u>
4.	<u>7,1</u>	<u>9,4</u>
5.	<u>706,9</u>	<u>94,2</u>
6.	<u>153,9</u>	<u>44</u>
7.	<u>0,8</u>	<u>3,1</u>
8.	<u>78,5</u>	<u>31,4</u>
9.	<u>227</u>	<u>53,4</u>
10.	<u>346,4</u>	<u>66</u>

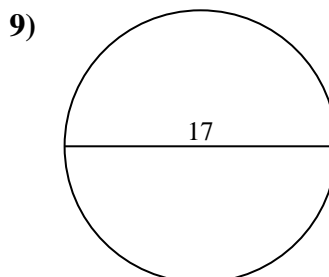
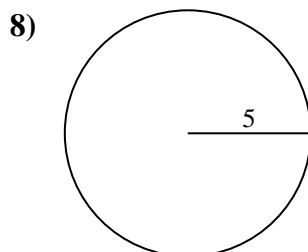
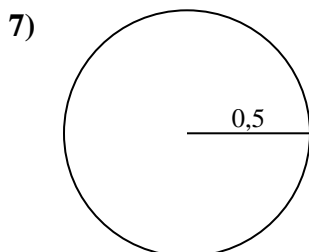
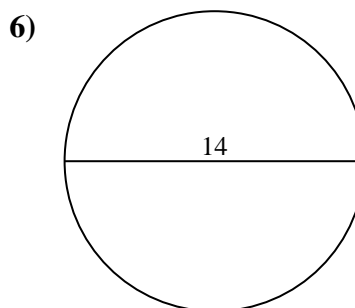
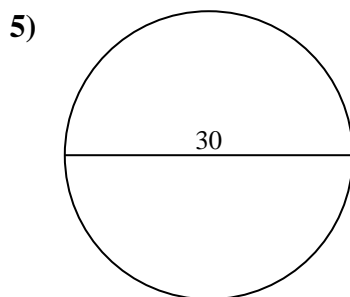
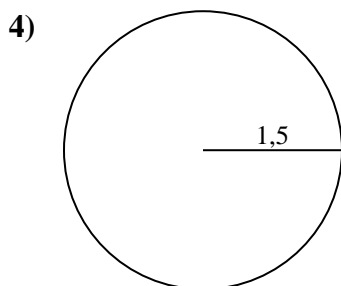
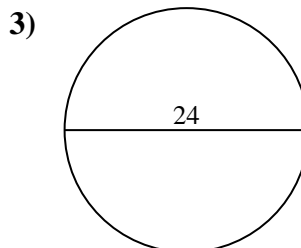
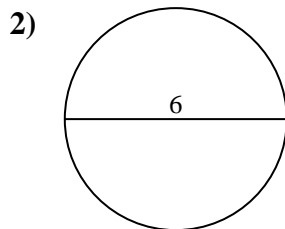
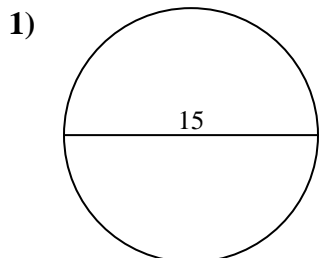


Berechne die Kreisfläche und den Kreisumfang jedes Kreises. Die Kreise sind nicht maßstäblich.

78,5	75,4	7,1	18,8	53,4
31,4	28,3	153,9	3,1	9,4
176,7	0,8	452,4	706,9	47,1
227	44	94,2		

**Antworten**

1. \_\_\_\_\_
2. \_\_\_\_\_
3. \_\_\_\_\_
4. \_\_\_\_\_
5. \_\_\_\_\_
6. \_\_\_\_\_
7. \_\_\_\_\_
8. \_\_\_\_\_
9. \_\_\_\_\_

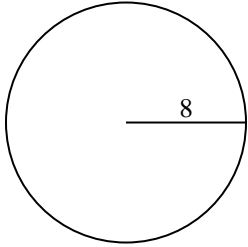




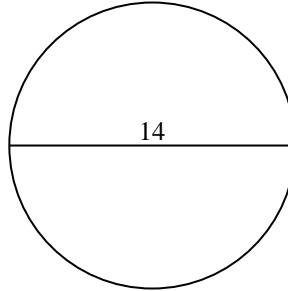


Berechne die Kreisfläche und den Kreisumfang jedes Kreises. Die Kreise sind nicht maßstäblich.

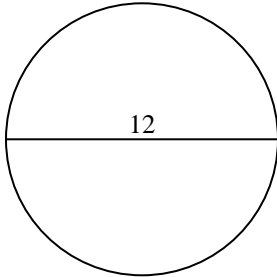
1)



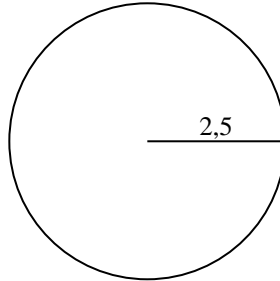
2)



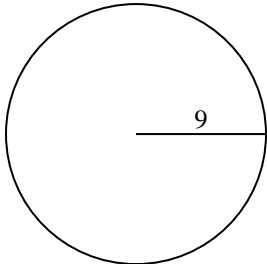
3)



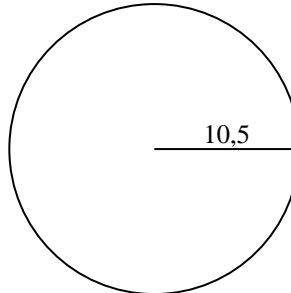
4)



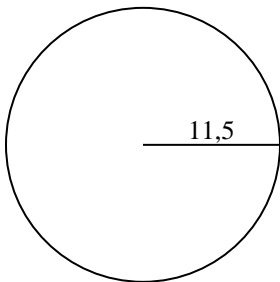
5)



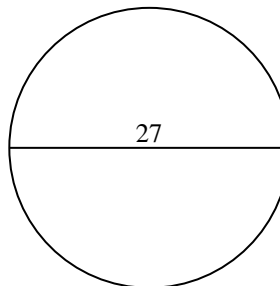
6)



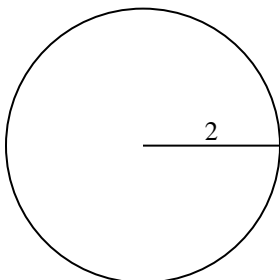
7)



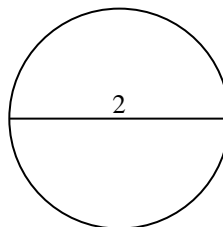
8)



9)



10)

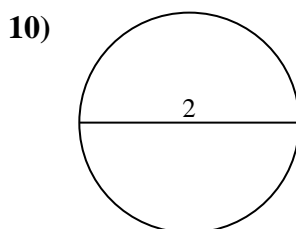
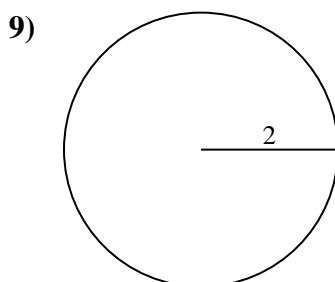
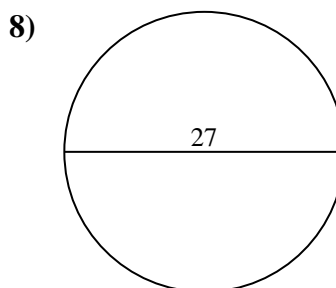
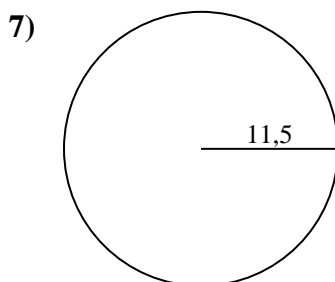
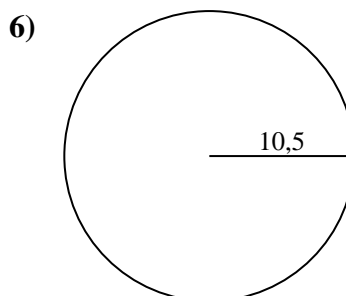
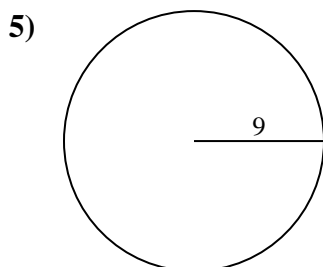
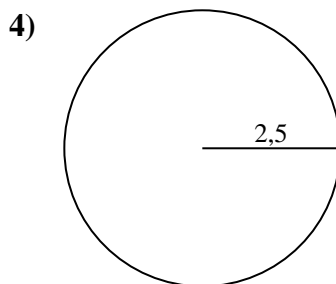
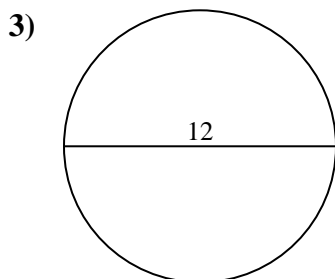
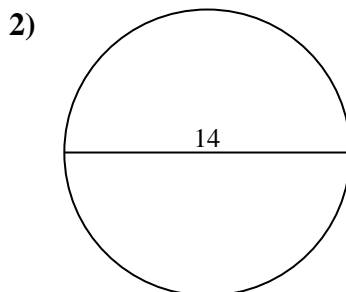
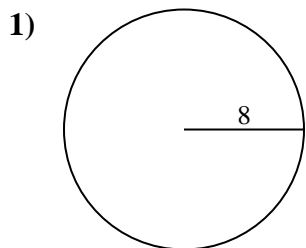


**Antworten**

- 1. \_\_\_\_\_
- 2. \_\_\_\_\_
- 3. \_\_\_\_\_
- 4. \_\_\_\_\_
- 5. \_\_\_\_\_
- 6. \_\_\_\_\_
- 7. \_\_\_\_\_
- 8. \_\_\_\_\_
- 9. \_\_\_\_\_
- 10. \_\_\_\_\_



Berechne die Kreisfläche und den Kreisumfang jedes Kreises. Die Kreise sind nicht maßstäblich.

**Antworten**

1.	<u>201,1</u>	<u>50,3</u>
2.	<u>153,9</u>	<u>44</u>
3.	<u>113,1</u>	<u>37,7</u>
4.	<u>19,6</u>	<u>15,7</u>
5.	<u>254,5</u>	<u>56,5</u>
6.	<u>346,4</u>	<u>66</u>
7.	<u>415,5</u>	<u>72,3</u>
8.	<u>572,6</u>	<u>84,8</u>
9.	<u>12,6</u>	<u>12,6</u>
10.	<u>3,1</u>	<u>6,3</u>

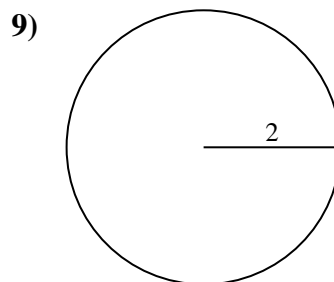
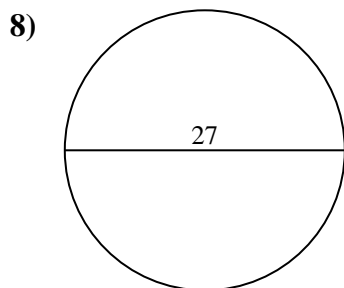
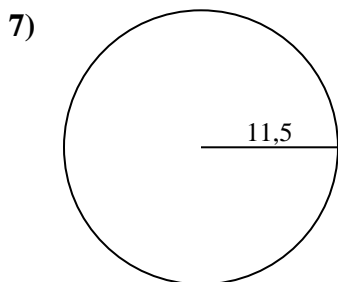
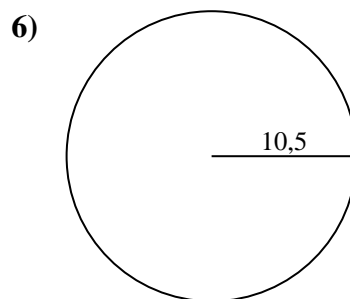
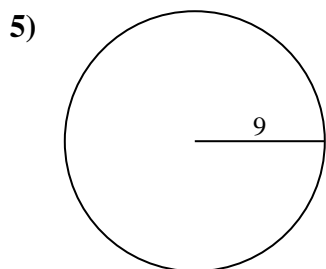
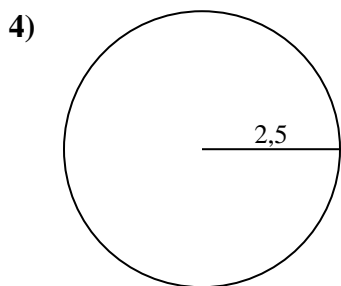
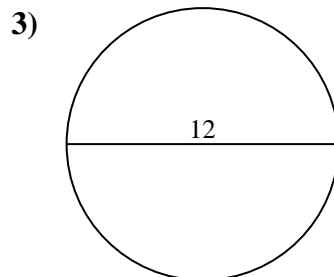
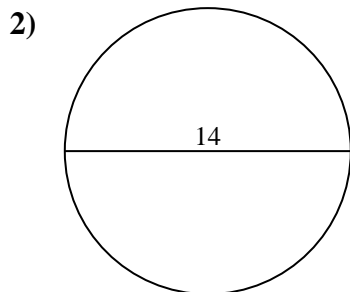
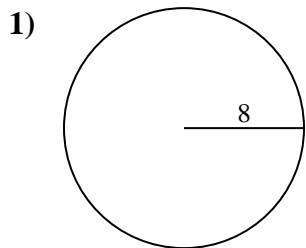


Berechne die Kreisfläche und den Kreisumfang jedes Kreises. Die Kreise sind nicht maßstäblich.

**Antworten**

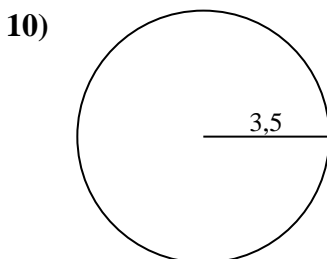
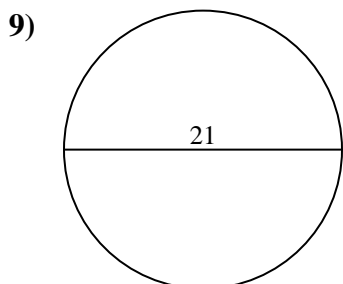
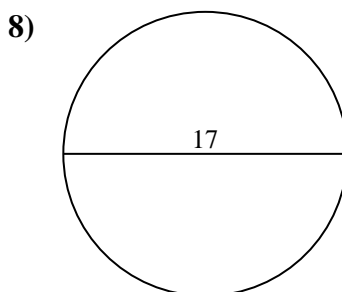
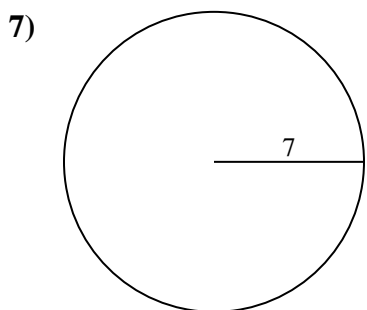
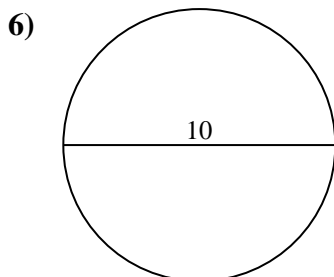
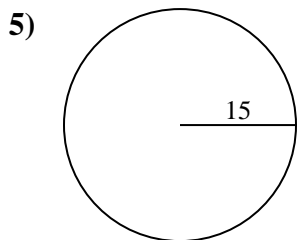
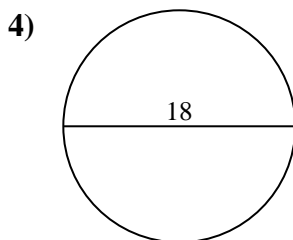
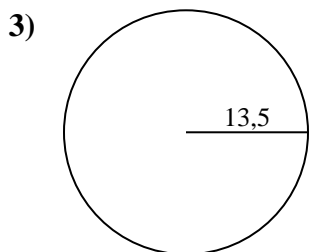
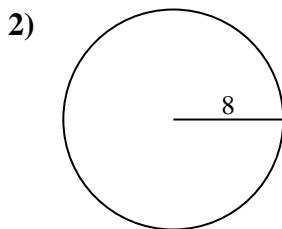
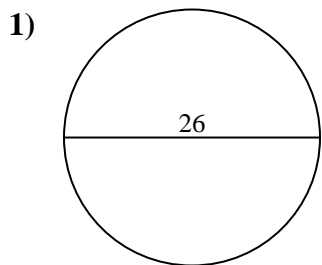
66	254,5	50,3	572,6	37,7
72,3	12,6	19,6	113,1	153,9
15,7	346,4	56,5	201,1	84,8
415,5	12,6	44		

1. \_\_\_\_\_
2. \_\_\_\_\_
3. \_\_\_\_\_
4. \_\_\_\_\_
5. \_\_\_\_\_
6. \_\_\_\_\_
7. \_\_\_\_\_
8. \_\_\_\_\_
9. \_\_\_\_\_





Berechne die Kreisfläche und den Kreisumfang jedes Kreises. Die Kreise sind nicht maßstäblich.



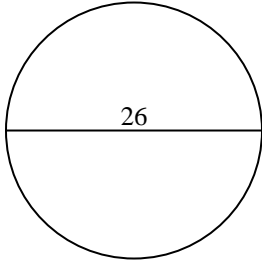
Antworten

- 1. \_\_\_\_\_
- 2. \_\_\_\_\_
- 3. \_\_\_\_\_
- 4. \_\_\_\_\_
- 5. \_\_\_\_\_
- 6. \_\_\_\_\_
- 7. \_\_\_\_\_
- 8. \_\_\_\_\_
- 9. \_\_\_\_\_
- 10. \_\_\_\_\_

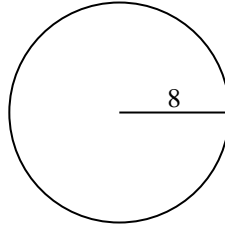


Berechne die Kreisfläche und den Kreisumfang jedes Kreises. Die Kreise sind nicht maßstäblich.

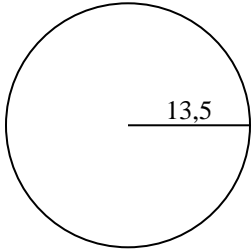
1)



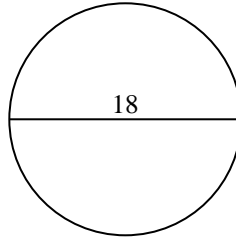
2)



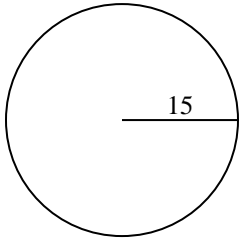
3)



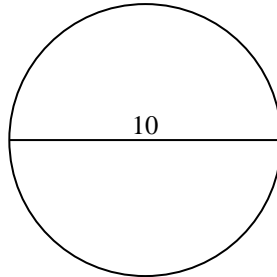
4)



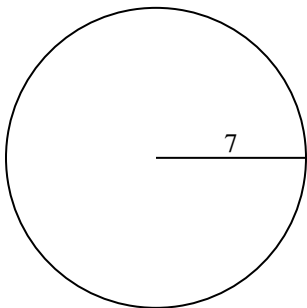
5)



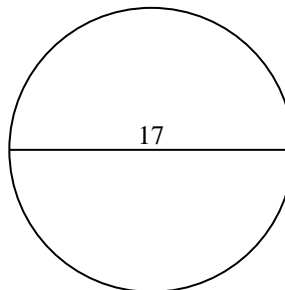
6)



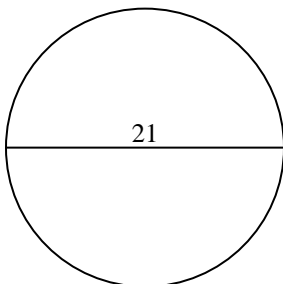
7)



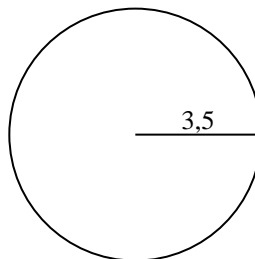
8)



9)



10)



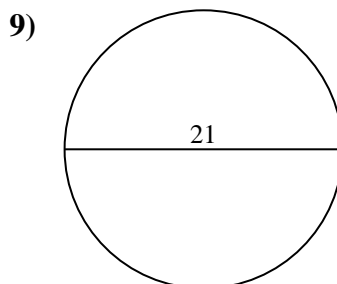
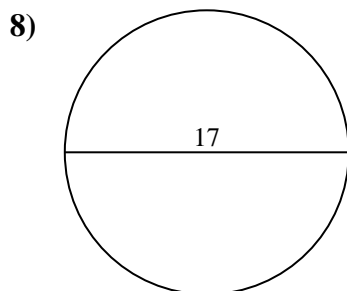
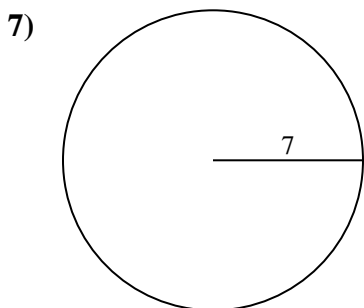
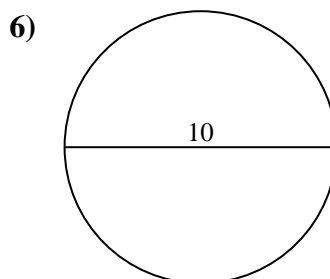
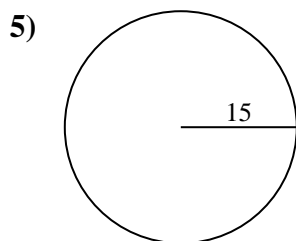
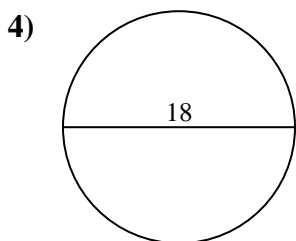
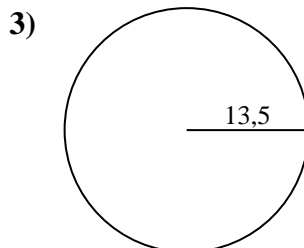
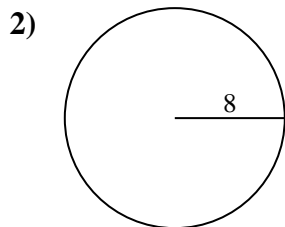
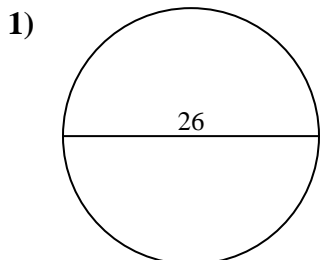
**Antworten**

1.	<u>530,9</u>	<u>81,7</u>
2.	<u>201,1</u>	<u>50,3</u>
3.	<u>572,6</u>	<u>84,8</u>
4.	<u>254,5</u>	<u>56,5</u>
5.	<u>706,9</u>	<u>94,2</u>
6.	<u>78,5</u>	<u>31,4</u>
7.	<u>153,9</u>	<u>44</u>
8.	<u>227</u>	<u>53,4</u>
9.	<u>346,4</u>	<u>66</u>
10.	<u>38,5</u>	<u>22</u>



Berechne die Kreisfläche und den Kreisumfang jedes Kreises. Die Kreise sind nicht maßstäblich.

227	346,4	530,9	201,1	706,9
84,8	31,4	78,5	153,9	53,4
44	94,2	66	254,5	56,5
572,6	81,7	50,3		



**Antworten**

1. \_\_\_\_\_
2. \_\_\_\_\_
3. \_\_\_\_\_
4. \_\_\_\_\_
5. \_\_\_\_\_
6. \_\_\_\_\_
7. \_\_\_\_\_
8. \_\_\_\_\_
9. \_\_\_\_\_