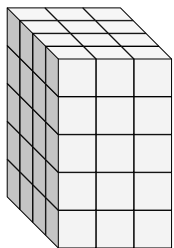


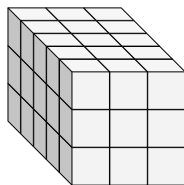


Finde die Länge, Breite und Höhe des rechteckigen Körpers. Bestimme danach das Volumen.

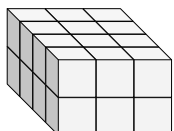
Bsp)



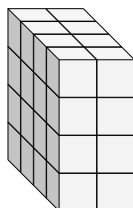
1)



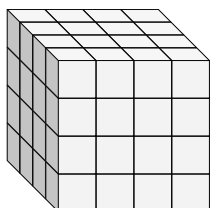
2)



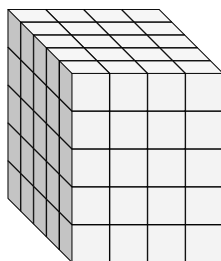
3)



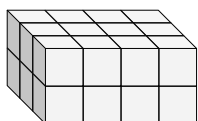
4)



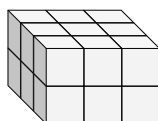
5)



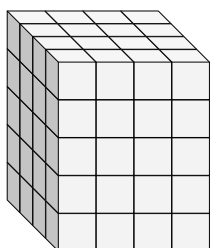
6)



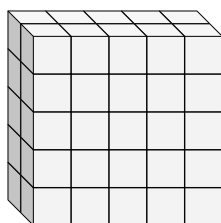
7)



8)



9)



Antworten

Bsp. 4 3 5 60

1. _____

2. _____

3. _____

4. _____

5. _____

6. _____

7. _____

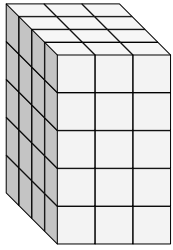
8. _____

9. _____

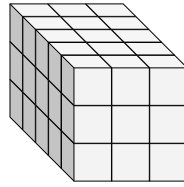


Finde die Länge, Breite und Höhe des rechteckigen Körpers. Bestimme danach das Volumen.

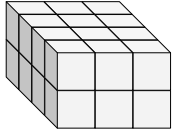
Bsp)



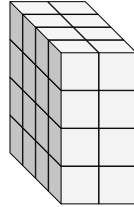
1)



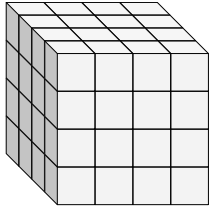
2)



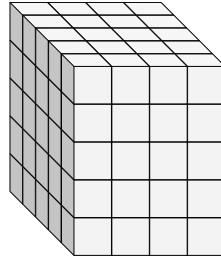
3)



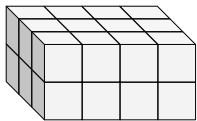
4)



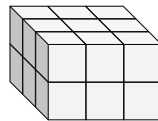
5)



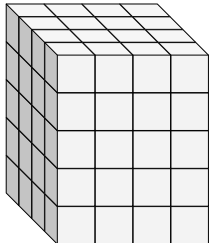
6)



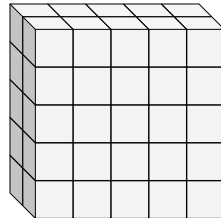
7)



8)



9)



Antworten

Bsp. 4 3 5 60

1. 5 3 3 45

2. 4 3 2 24

3. 4 2 4 32

4. 4 4 4 64

5. 5 4 5 100

6. 3 4 2 24

7. 3 3 2 18

8. 4 4 5 80

9. 2 5 5 50