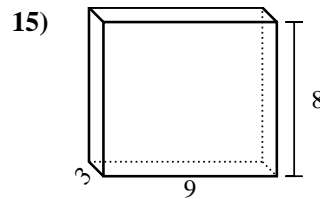
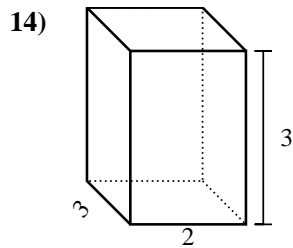
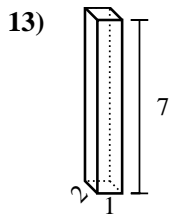
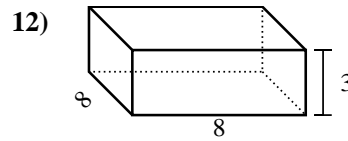
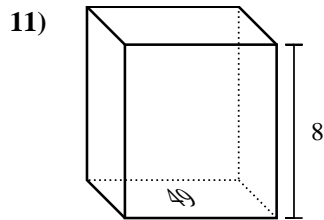
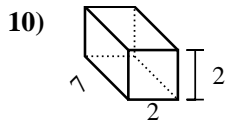
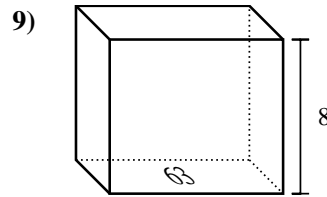
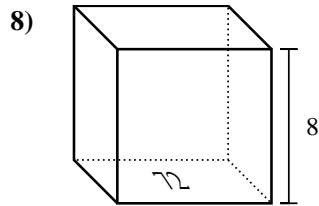
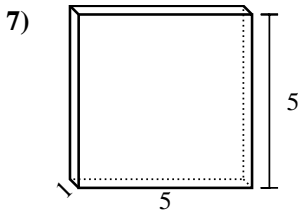
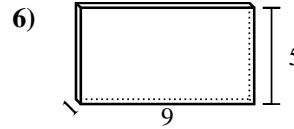
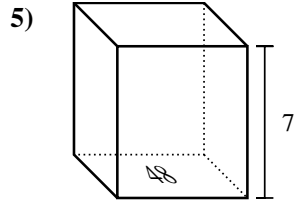
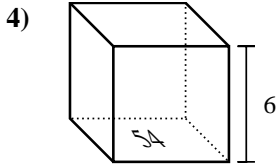
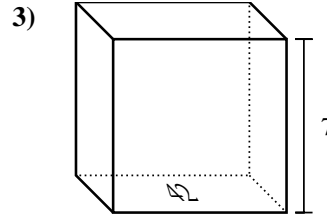
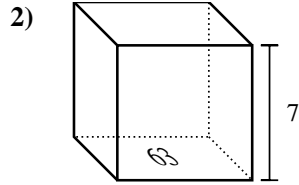
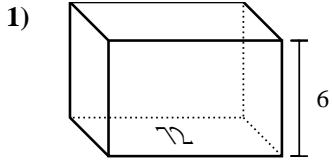




Bestimme das Volumen jedes rechteckigen Körpers. Denke daran, dass $V = \text{Länge} \times \text{Breite} \times \text{Höhe}$ ist. Einheiten sind in cm und nicht maßstabsgerecht.

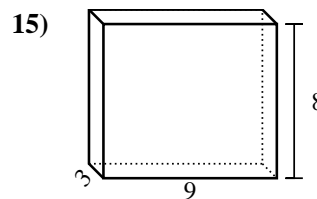
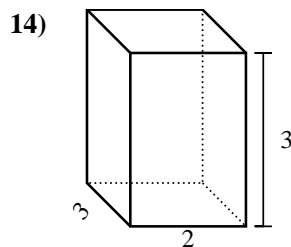
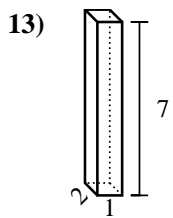
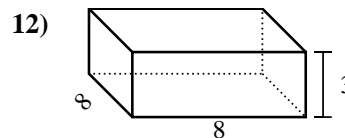
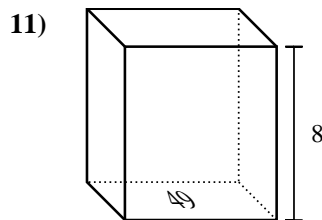
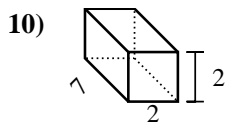
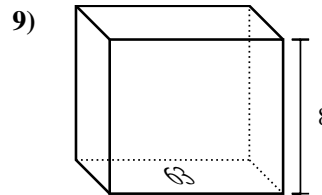
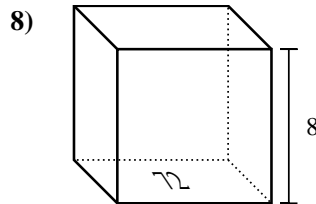
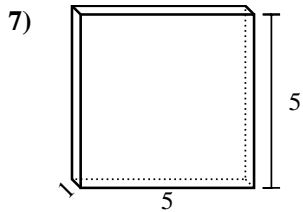
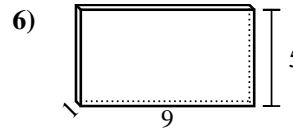
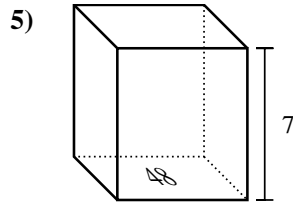
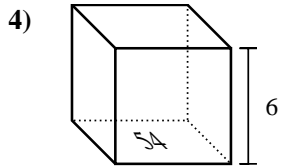
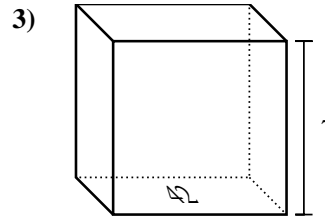
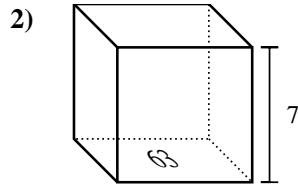
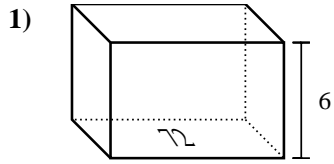
Antworten



- 1. _____
- 2. _____
- 3. _____
- 4. _____
- 5. _____
- 6. _____
- 7. _____
- 8. _____
- 9. _____
- 10. _____
- 11. _____
- 12. _____
- 13. _____
- 14. _____
- 15. _____



Bestimme das Volumen jedes rechteckigen Körpers. Denke daran, dass $V = \text{Länge} \times \text{Breite} \times \text{Höhe}$ ist. Einheiten sind in cm und nicht maßstabsgerecht.



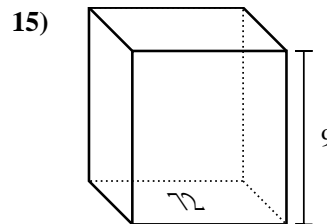
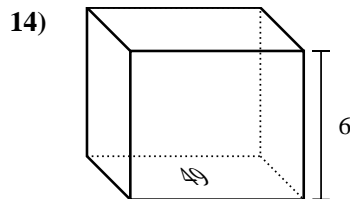
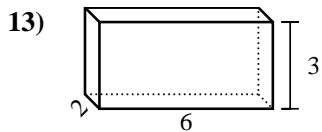
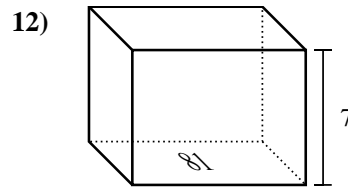
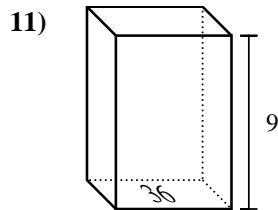
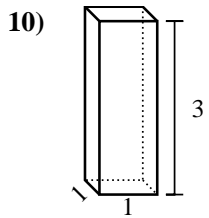
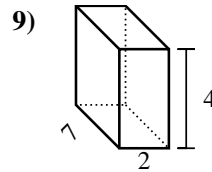
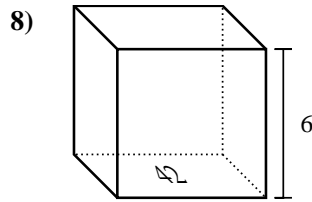
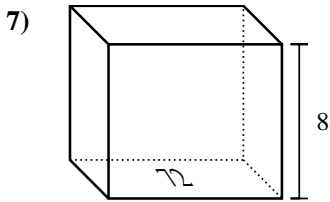
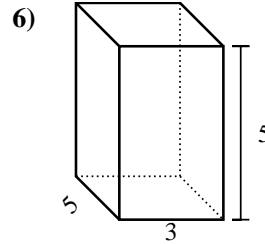
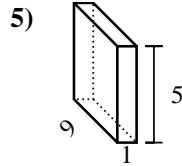
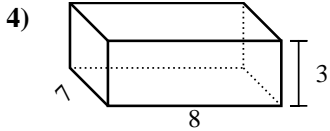
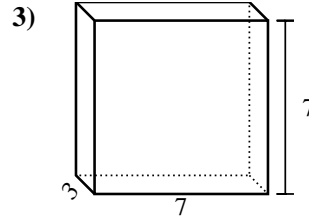
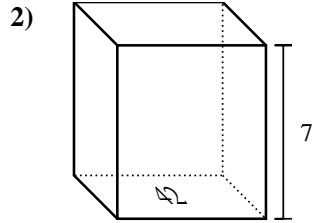
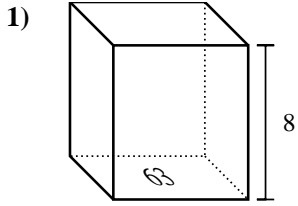
Antworten

1. 432 cm³
2. 441 cm³
3. 294 cm³
4. 324 cm³
5. 336 cm³
6. 45 cm³
7. 25 cm³
8. 576 cm³
9. 504 cm³
10. 28 cm³
11. 392 cm³
12. 192 cm³
13. 14 cm³
14. 18 cm³
15. 216 cm³



Bestimme das Volumen jedes rechteckigen Körpers. Denke daran, dass $V = \text{Länge} \times \text{Breite} \times \text{Höhe}$ ist. Einheiten sind in cm und nicht maßstabsgerecht.

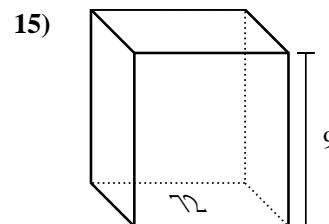
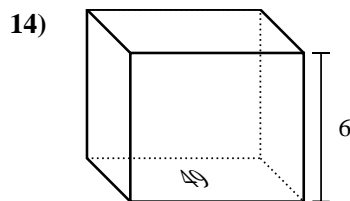
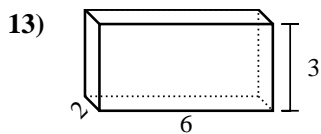
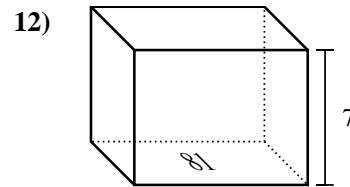
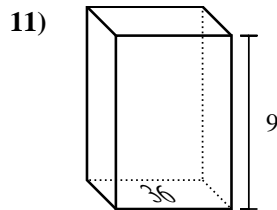
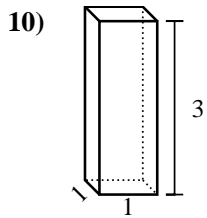
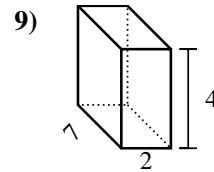
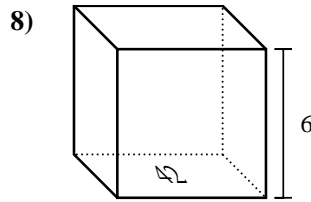
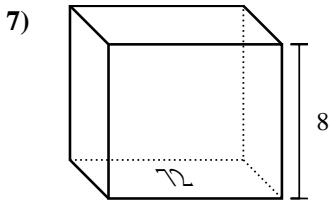
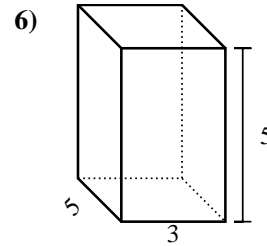
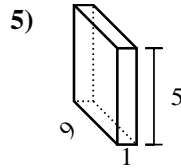
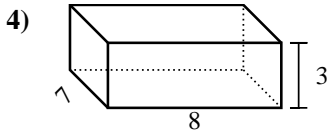
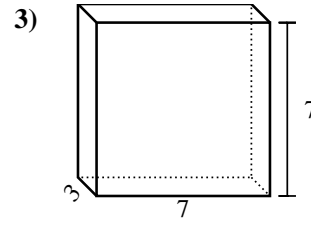
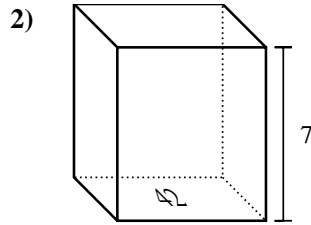
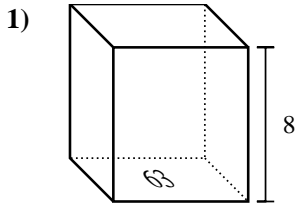
Antworten



- 1. _____
- 2. _____
- 3. _____
- 4. _____
- 5. _____
- 6. _____
- 7. _____
- 8. _____
- 9. _____
- 10. _____
- 11. _____
- 12. _____
- 13. _____
- 14. _____
- 15. _____



Bestimme das Volumen jedes rechteckigen Körpers. Denke daran, dass $V = \text{Länge} \times \text{Breite} \times \text{Höhe}$ ist. Einheiten sind in cm und nicht maßstabsgerecht.



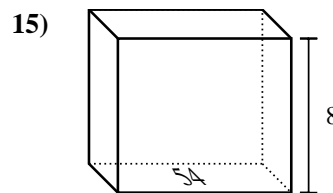
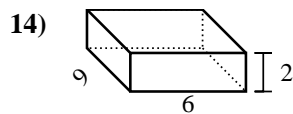
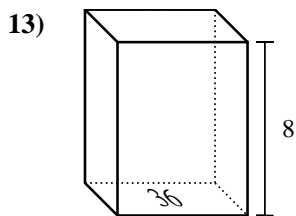
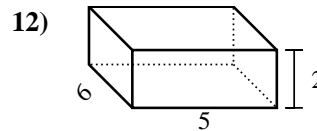
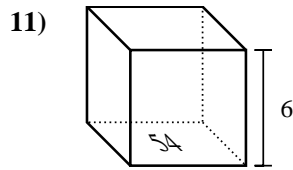
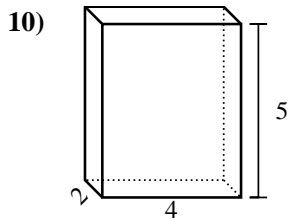
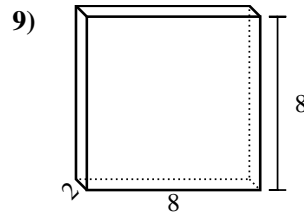
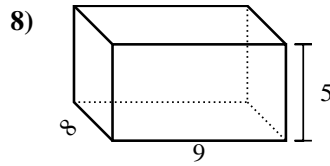
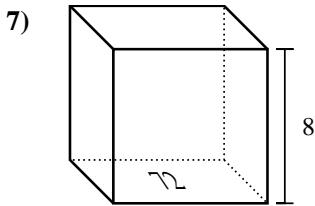
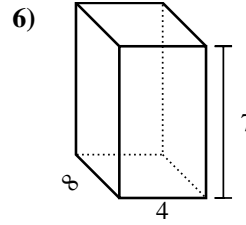
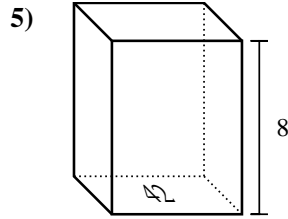
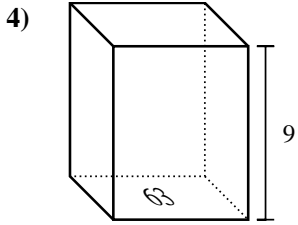
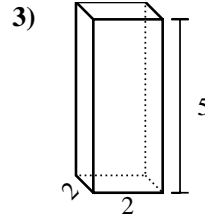
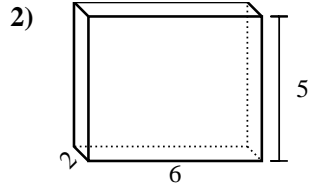
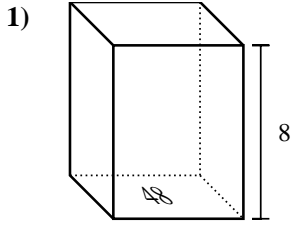
Antworten

1. 504 cm³
2. 294 cm³
3. 147 cm³
4. 168 cm³
5. 45 cm³
6. 75 cm³
7. 576 cm³
8. 252 cm³
9. 56 cm³
10. 3 cm³
11. 324 cm³
12. 567 cm³
13. 36 cm³
14. 294 cm³
15. 648 cm³



Bestimme das Volumen jedes rechteckigen Körpers. Denke daran, dass $V = \text{Länge} \times \text{Breite} \times \text{Höhe}$ ist. Einheiten sind in cm und nicht maßstabsgerecht.

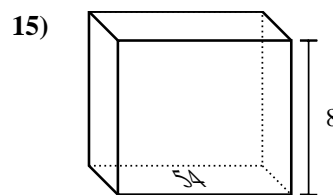
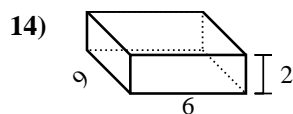
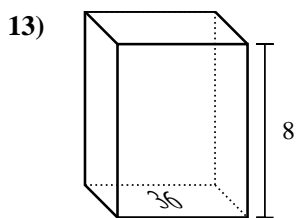
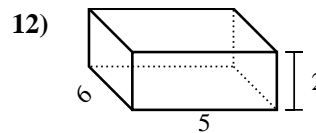
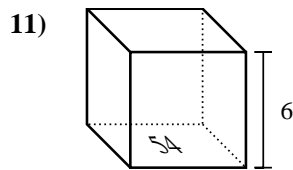
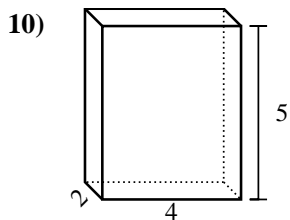
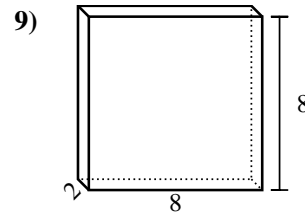
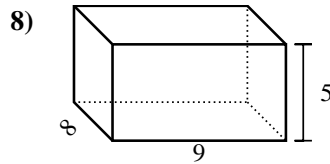
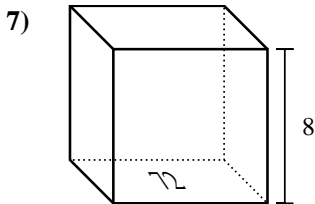
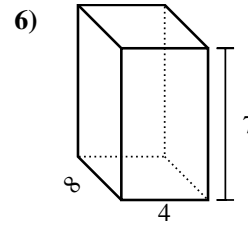
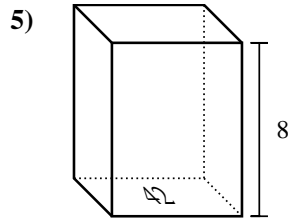
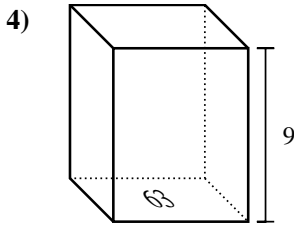
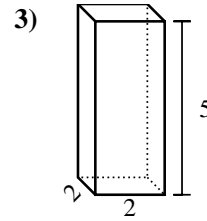
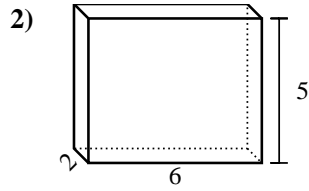
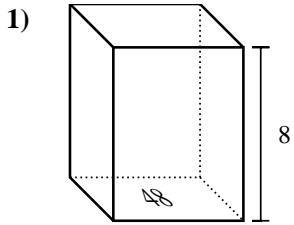
Antworten



1. _____
2. _____
3. _____
4. _____
5. _____
6. _____
7. _____
8. _____
9. _____
10. _____
11. _____
12. _____
13. _____
14. _____
15. _____



Bestimme das Volumen jedes rechteckigen Körpers. Denke daran, dass $V = \text{Länge} \times \text{Breite} \times \text{Höhe}$ ist. Einheiten sind in cm und nicht maßstabsgerecht.



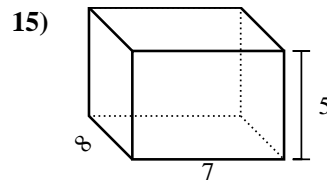
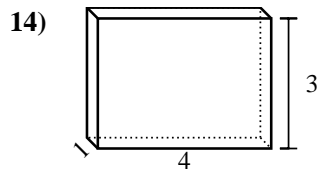
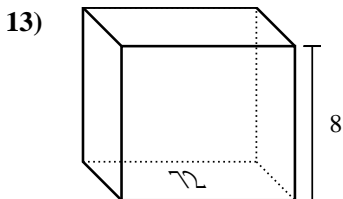
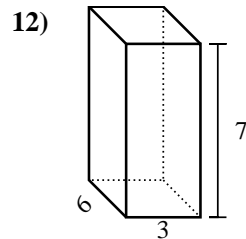
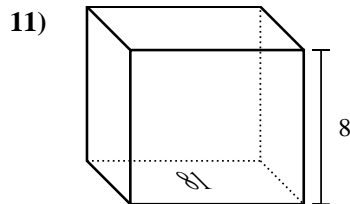
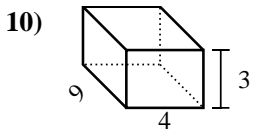
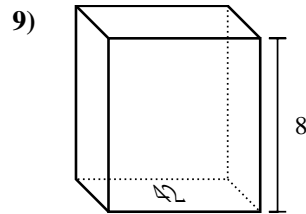
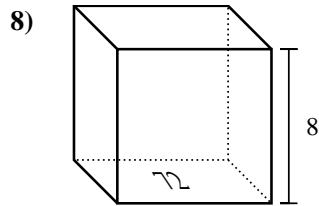
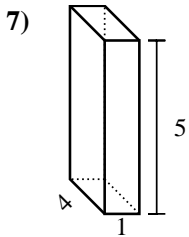
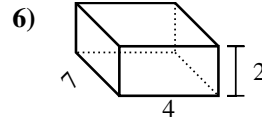
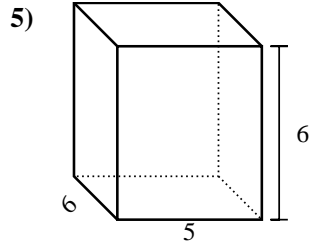
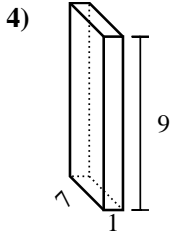
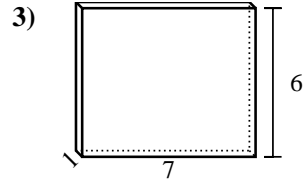
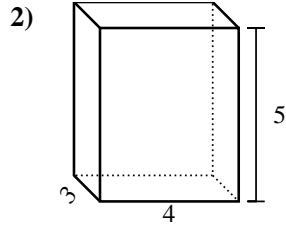
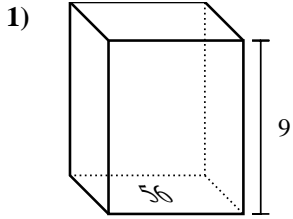
Antworten

1. 384 cm³
2. 60 cm³
3. 20 cm³
4. 567 cm³
5. 336 cm³
6. 224 cm³
7. 576 cm³
8. 360 cm³
9. 128 cm³
10. 40 cm³
11. 324 cm³
12. 60 cm³
13. 288 cm³
14. 108 cm³
15. 432 cm³



Bestimme das Volumen jedes rechteckigen Körpers. Denke daran, dass $V = \text{Länge} \times \text{Breite} \times \text{Höhe}$ ist. Einheiten sind in cm und nicht maßstabsgerecht.

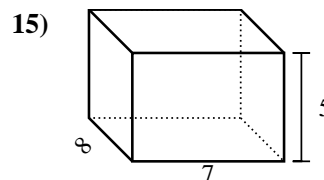
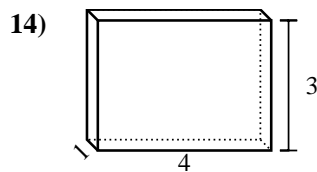
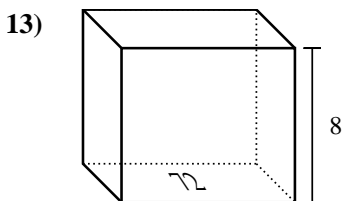
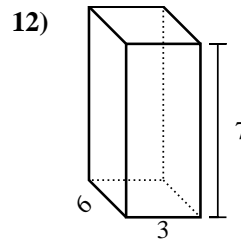
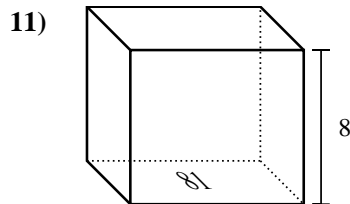
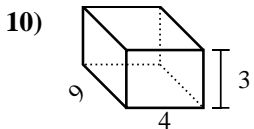
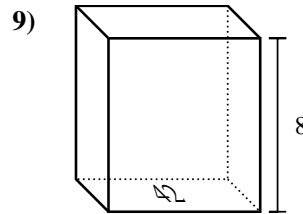
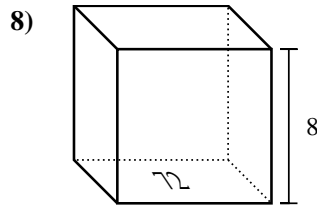
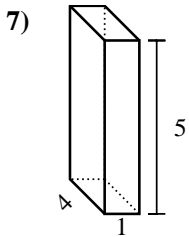
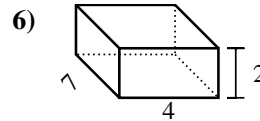
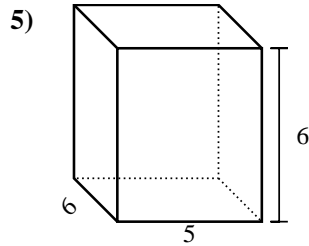
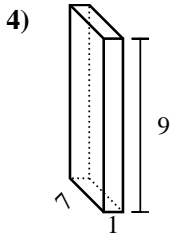
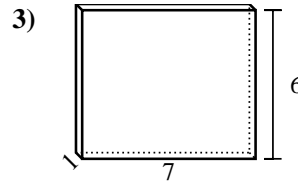
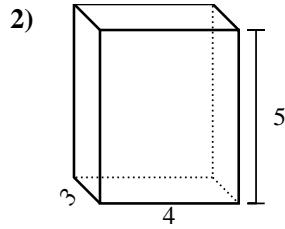
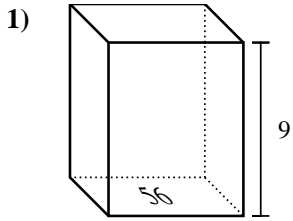
Antworten



1. _____
2. _____
3. _____
4. _____
5. _____
6. _____
7. _____
8. _____
9. _____
10. _____
11. _____
12. _____
13. _____
14. _____
15. _____



Bestimme das Volumen jedes rechteckigen Körpers. Denke daran, dass $V = \text{Länge} \times \text{Breite} \times \text{Höhe}$ ist. Einheiten sind in cm und nicht maßstabsgerecht.



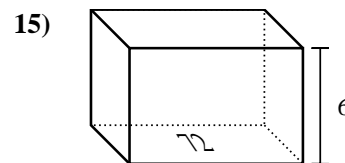
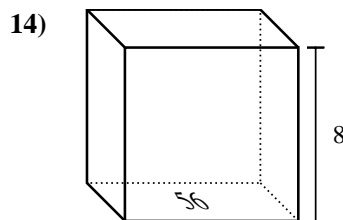
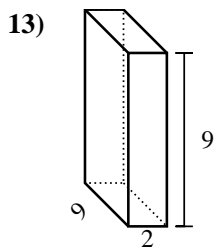
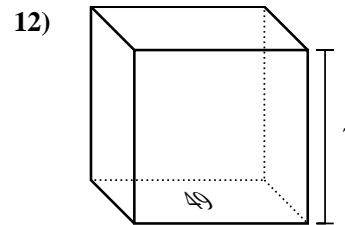
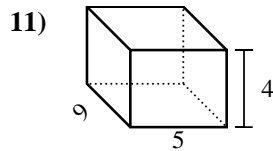
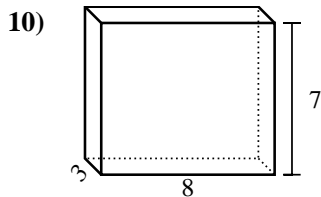
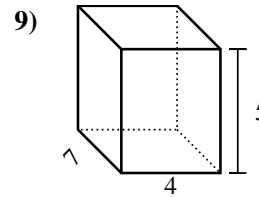
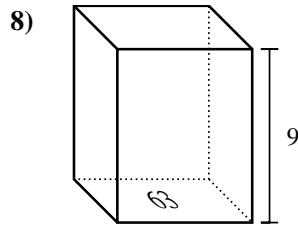
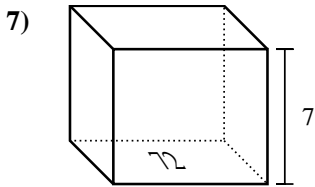
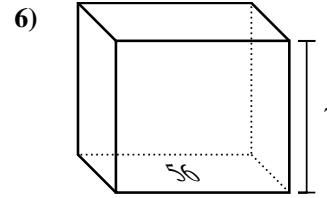
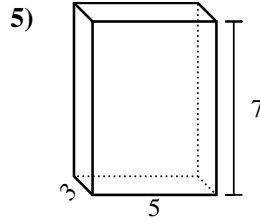
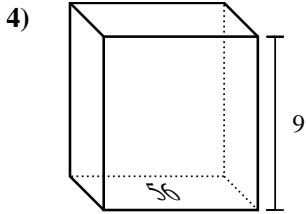
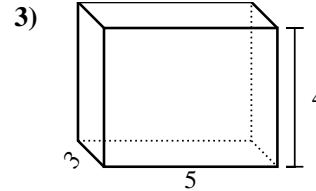
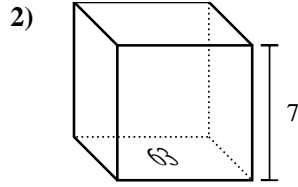
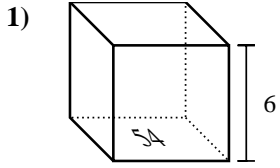
Antworten

1. 504 cm³
2. 60 cm³
3. 42 cm³
4. 63 cm³
5. 180 cm³
6. 56 cm³
7. 20 cm³
8. 576 cm³
9. 336 cm³
10. 108 cm³
11. 648 cm³
12. 126 cm³
13. 576 cm³
14. 12 cm³
15. 280 cm³



Bestimme das Volumen jedes rechteckigen Körpers. Denke daran, dass $V = \text{Länge} \times \text{Breite} \times \text{Höhe}$ ist. Einheiten sind in cm und nicht maßstabsgerecht.

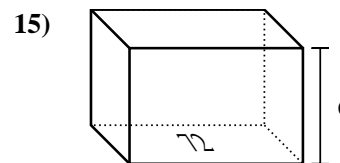
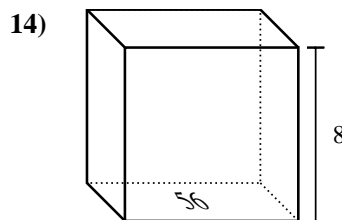
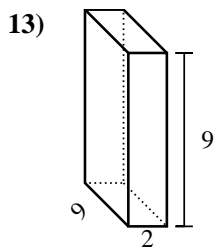
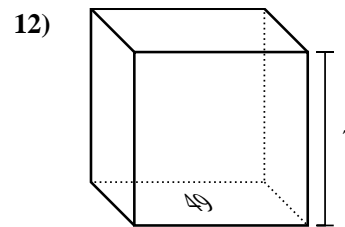
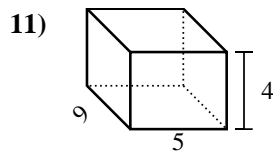
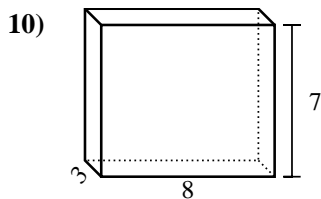
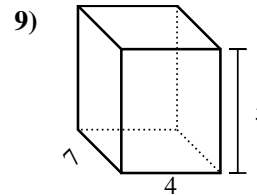
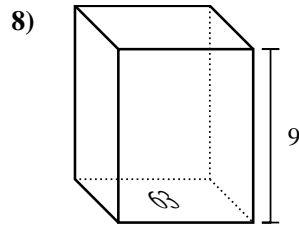
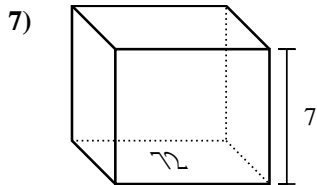
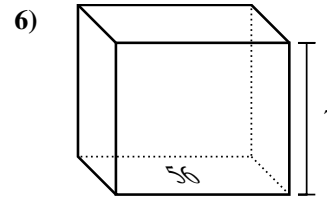
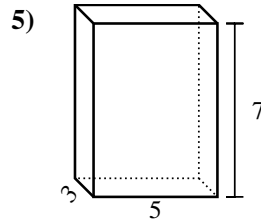
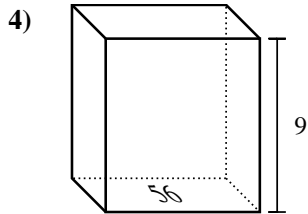
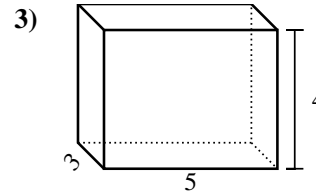
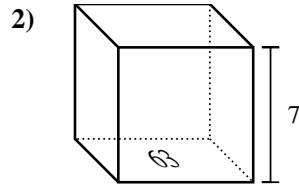
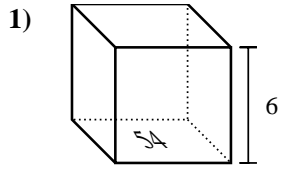
Antworten



- 1. _____
- 2. _____
- 3. _____
- 4. _____
- 5. _____
- 6. _____
- 7. _____
- 8. _____
- 9. _____
- 10. _____
- 11. _____
- 12. _____
- 13. _____
- 14. _____
- 15. _____



Bestimme das Volumen jedes rechteckigen Körpers. Denke daran, dass $V = \text{Länge} \times \text{Breite} \times \text{Höhe}$ ist. Einheiten sind in cm und nicht maßstabsgerecht.



Antworten

1. **324 cm³**

2. **441 cm³**

3. **60 cm³**

4. **504 cm³**

5. **105 cm³**

6. **392 cm³**

7. **504 cm³**

8. **567 cm³**

9. **140 cm³**

10. **168 cm³**

11. **180 cm³**

12. **343 cm³**

13. **162 cm³**

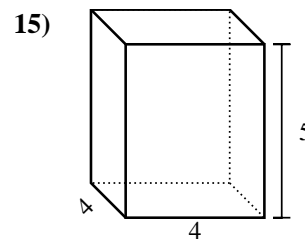
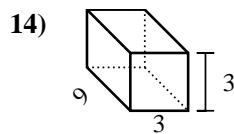
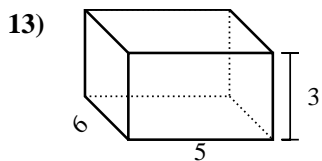
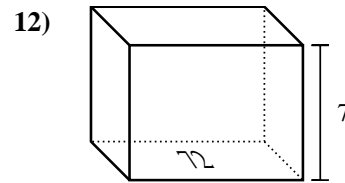
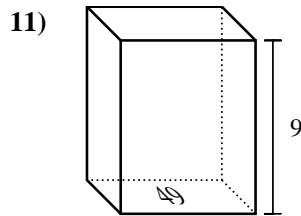
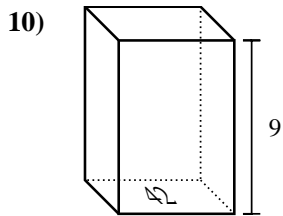
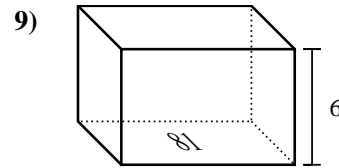
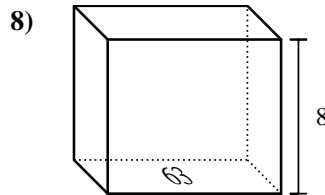
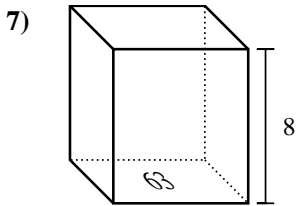
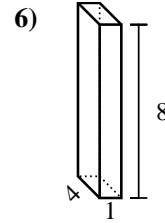
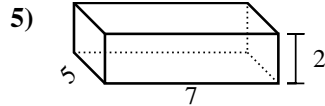
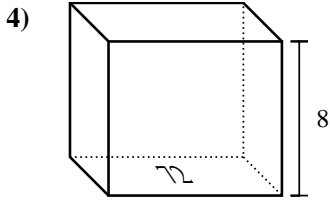
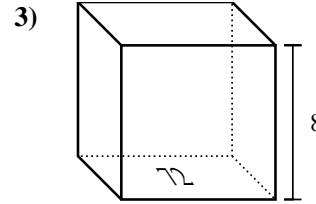
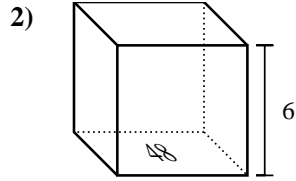
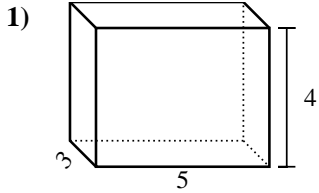
14. **448 cm³**

15. **432 cm³**



Bestimme das Volumen jedes rechteckigen Körpers. Denke daran, dass $V = \text{Länge} \times \text{Breite} \times \text{Höhe}$ ist. Einheiten sind in cm und nicht maßstabsgerecht.

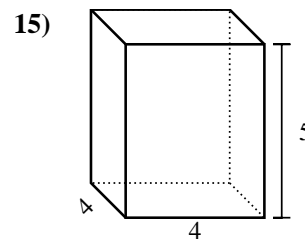
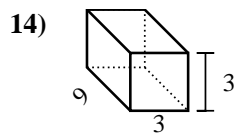
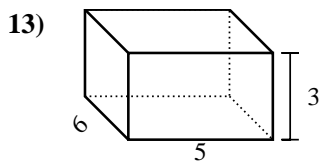
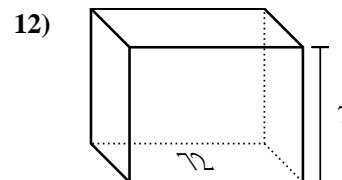
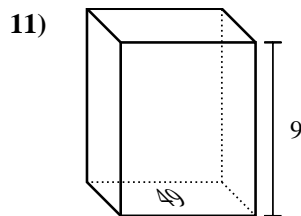
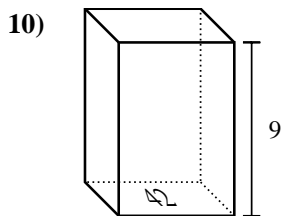
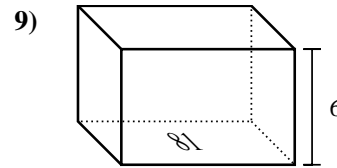
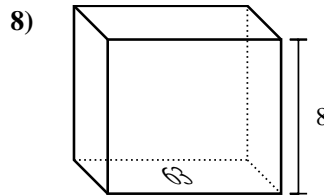
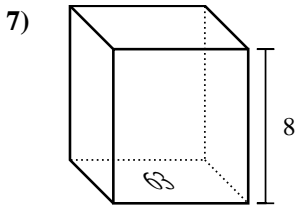
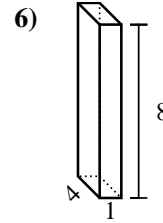
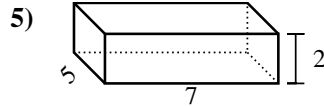
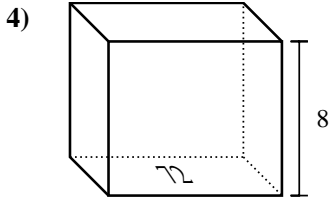
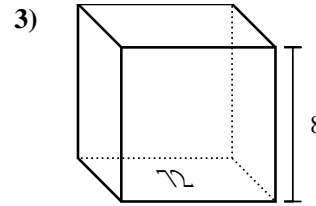
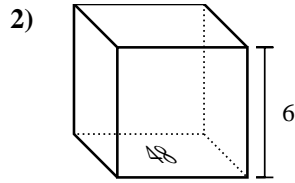
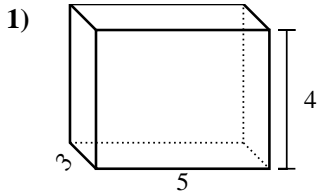
Antworten



- 1. _____
- 2. _____
- 3. _____
- 4. _____
- 5. _____
- 6. _____
- 7. _____
- 8. _____
- 9. _____
- 10. _____
- 11. _____
- 12. _____
- 13. _____
- 14. _____
- 15. _____



Bestimme das Volumen jedes rechteckigen Körpers. Denke daran, dass $V = \text{Länge} \times \text{Breite} \times \text{Höhe}$ ist. Einheiten sind in cm und nicht maßstabsgerecht.

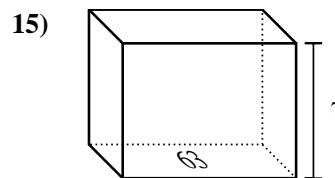
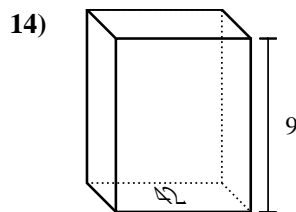
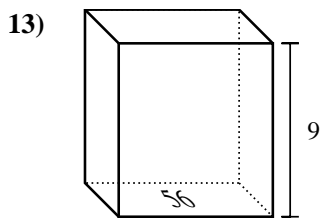
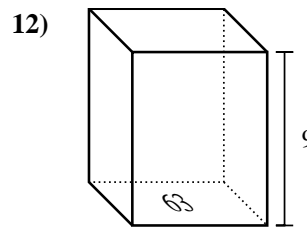
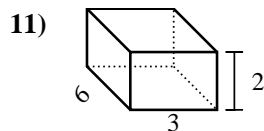
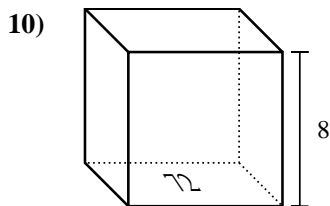
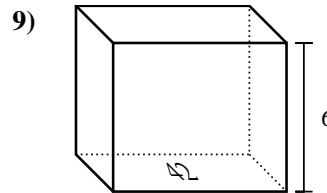
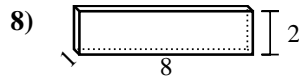
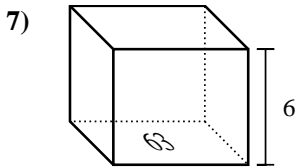
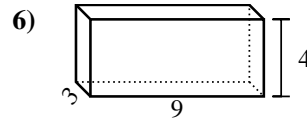
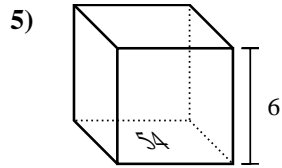
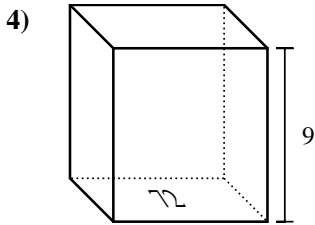
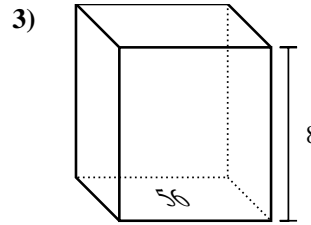
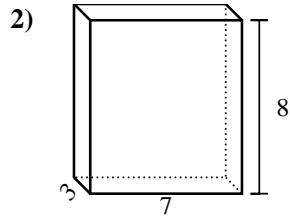
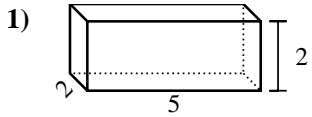


Antworten

1. 60 cm³
2. 288 cm³
3. 576 cm³
4. 576 cm³
5. 70 cm³
6. 32 cm³
7. 504 cm³
8. 504 cm³
9. 486 cm³
10. 378 cm³
11. 441 cm³
12. 504 cm³
13. 90 cm³
14. 81 cm³
15. 80 cm³



Bestimme das Volumen jedes rechteckigen Körpers. Denke daran, dass $V = \text{Länge} \times \text{Breite} \times \text{Höhe}$ ist. Einheiten sind in cm und nicht maßstabsgerecht.

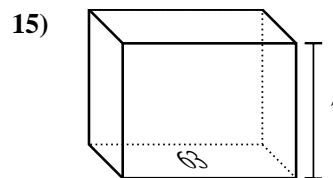
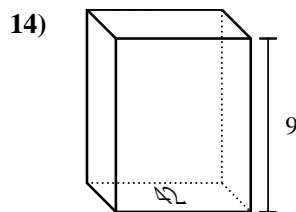
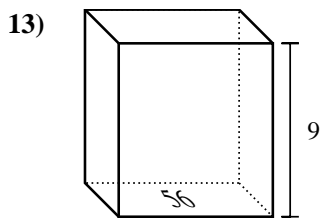
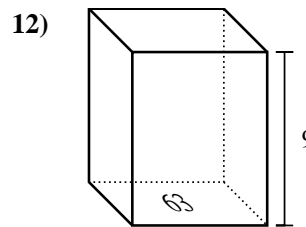
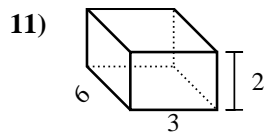
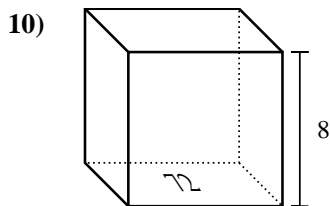
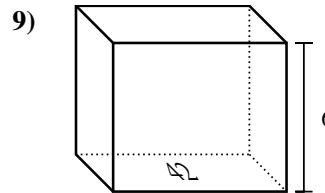
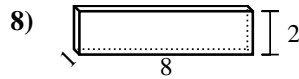
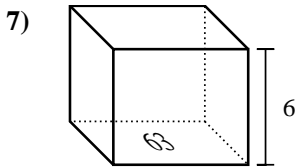
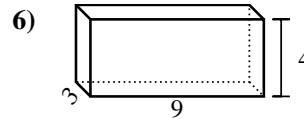
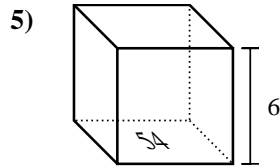
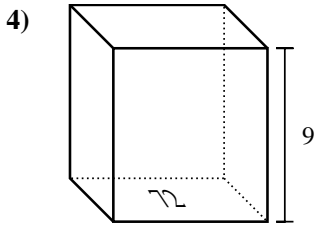
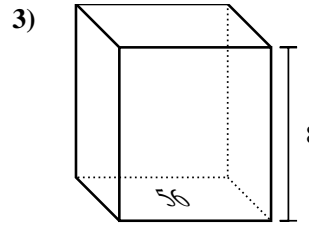
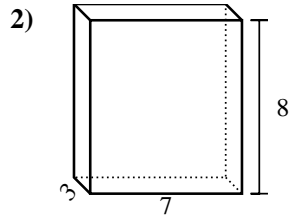
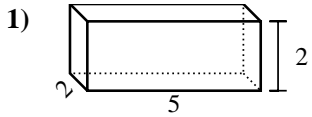


Antworten

- 1. _____
- 2. _____
- 3. _____
- 4. _____
- 5. _____
- 6. _____
- 7. _____
- 8. _____
- 9. _____
- 10. _____
- 11. _____
- 12. _____
- 13. _____
- 14. _____
- 15. _____



Bestimme das Volumen jedes rechteckigen Körpers. Denke daran, dass $V = \text{Länge} \times \text{Breite} \times \text{Höhe}$ ist. Einheiten sind in cm und nicht maßstabsgerecht.



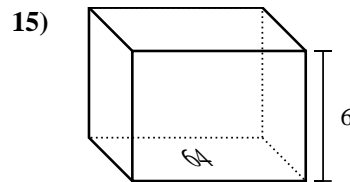
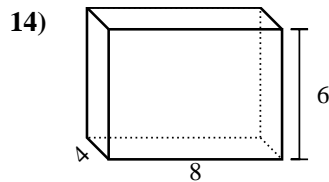
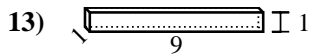
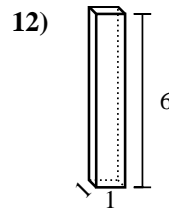
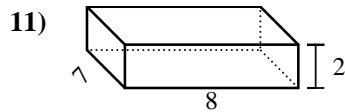
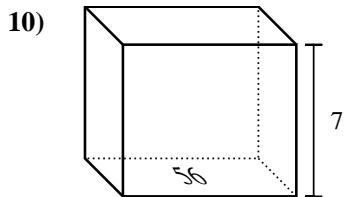
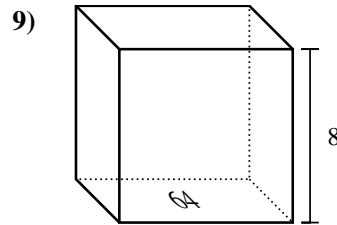
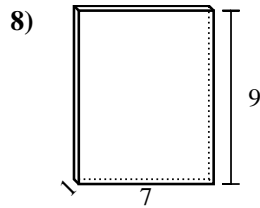
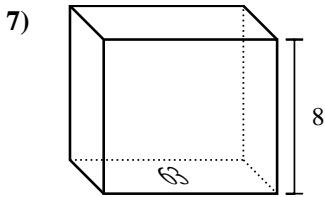
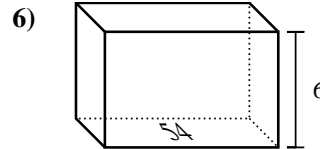
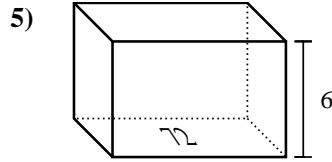
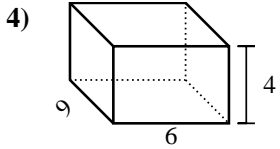
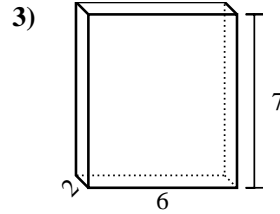
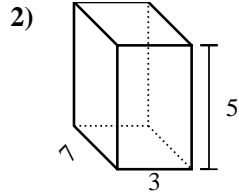
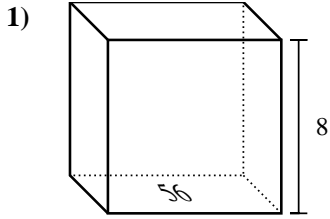
Antworten

1. 20 cm³
2. 168 cm³
3. 448 cm³
4. 648 cm³
5. 324 cm³
6. 108 cm³
7. 378 cm³
8. 16 cm³
9. 252 cm³
10. 576 cm³
11. 36 cm³
12. 567 cm³
13. 504 cm³
14. 378 cm³
15. 441 cm³



Bestimme das Volumen jedes rechteckigen Körpers. Denke daran, dass $V = \text{Länge} \times \text{Breite} \times \text{Höhe}$ ist. Einheiten sind in cm und nicht maßstabsgerecht.

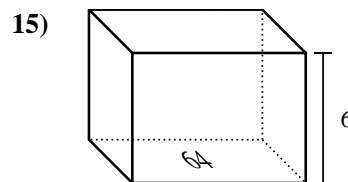
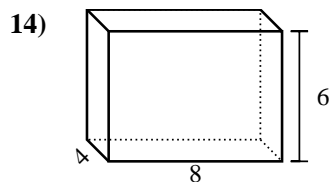
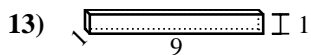
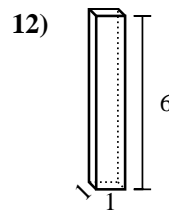
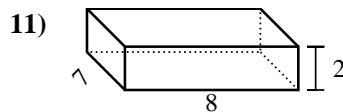
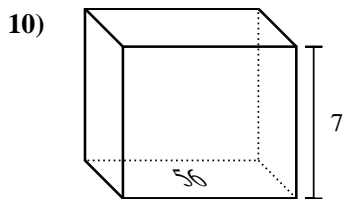
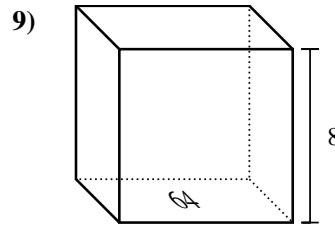
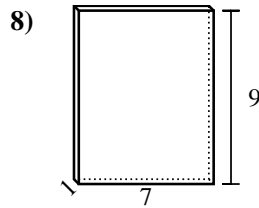
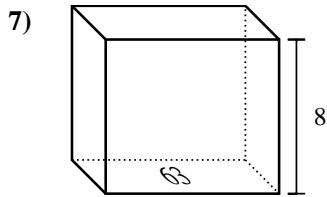
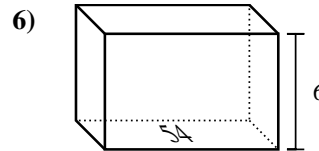
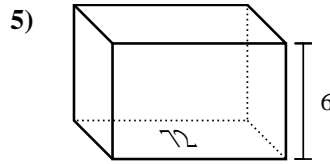
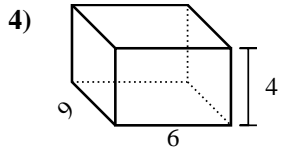
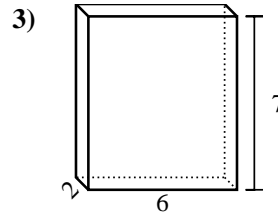
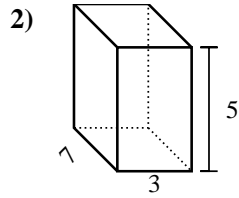
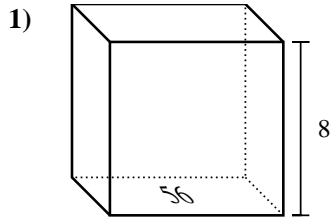
Antworten



- 1. _____
- 2. _____
- 3. _____
- 4. _____
- 5. _____
- 6. _____
- 7. _____
- 8. _____
- 9. _____
- 10. _____
- 11. _____
- 12. _____
- 13. _____
- 14. _____
- 15. _____



Bestimme das Volumen jedes rechteckigen Körpers. Denke daran, dass $V = \text{Länge} \times \text{Breite} \times \text{Höhe}$ ist. Einheiten sind in cm und nicht maßstabsgerecht.



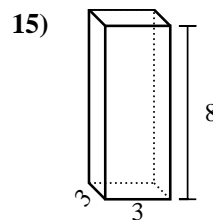
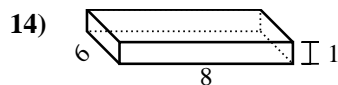
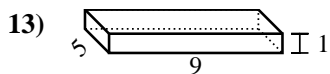
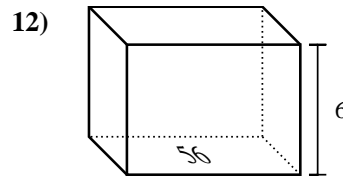
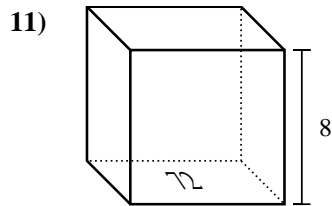
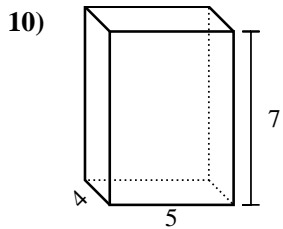
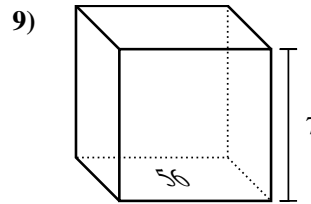
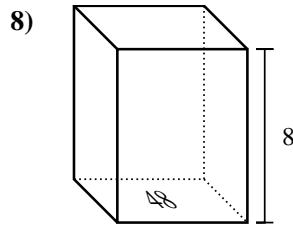
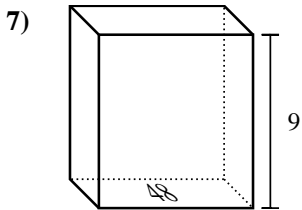
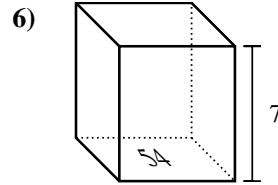
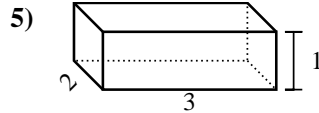
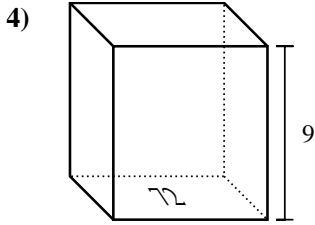
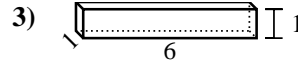
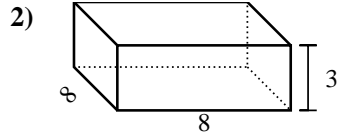
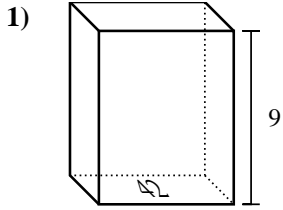
Antworten

1. 448 cm³
2. 105 cm³
3. 84 cm³
4. 216 cm³
5. 432 cm³
6. 324 cm³
7. 504 cm³
8. 63 cm³
9. 512 cm³
10. 392 cm³
11. 112 cm³
12. 6 cm³
13. 9 cm³
14. 192 cm³
15. 384 cm³



Bestimme das Volumen jedes rechteckigen Körpers. Denke daran, dass $V = \text{Länge} \times \text{Breite} \times \text{Höhe}$ ist. Einheiten sind in cm und nicht maßstabsgerecht.

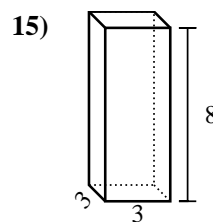
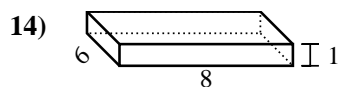
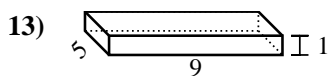
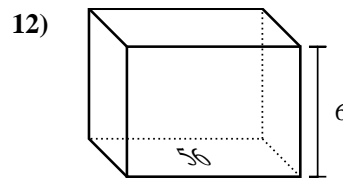
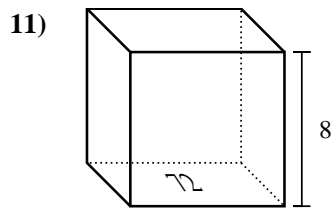
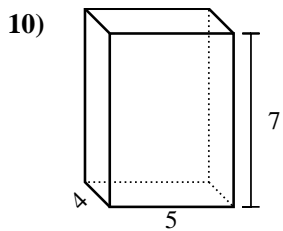
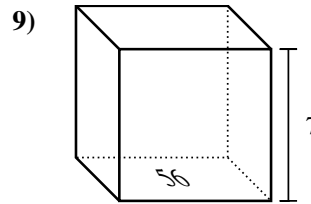
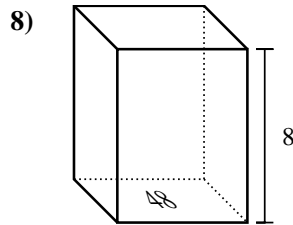
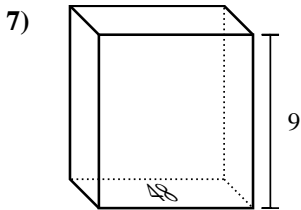
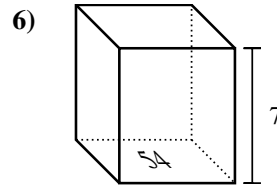
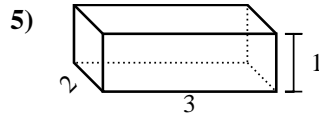
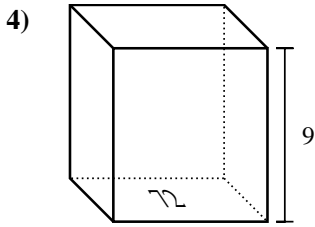
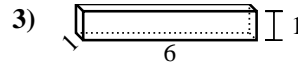
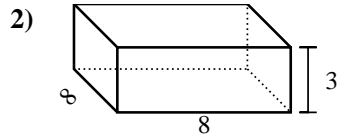
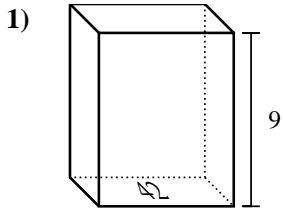
Antworten



1. _____
2. _____
3. _____
4. _____
5. _____
6. _____
7. _____
8. _____
9. _____
10. _____
11. _____
12. _____
13. _____
14. _____
15. _____



Bestimme das Volumen jedes rechteckigen Körpers. Denke daran, dass $V = \text{Länge} \times \text{Breite} \times \text{Höhe}$ ist. Einheiten sind in cm und nicht maßstabsgerecht.



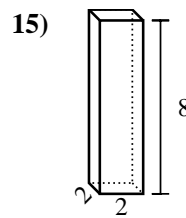
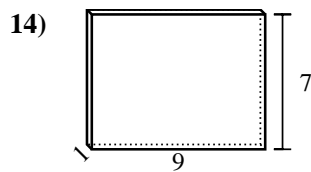
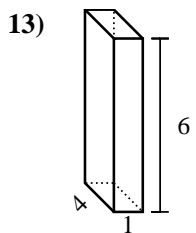
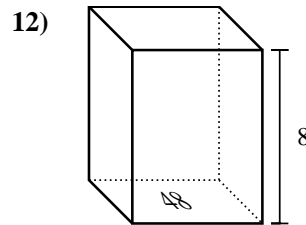
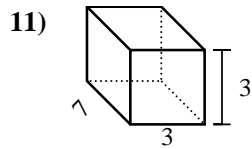
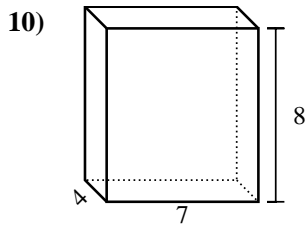
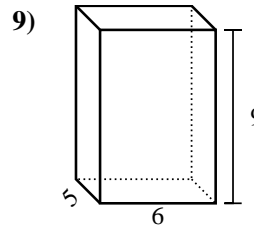
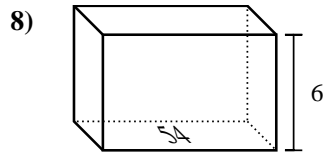
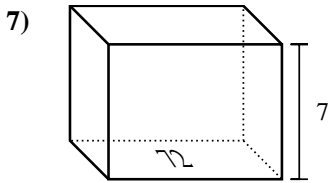
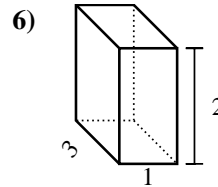
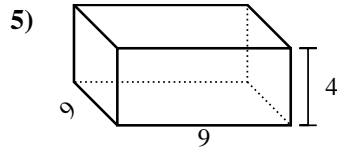
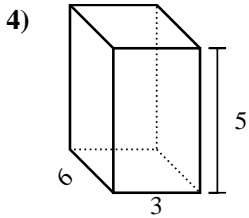
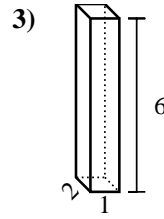
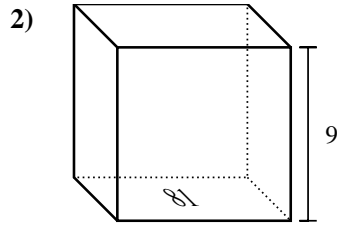
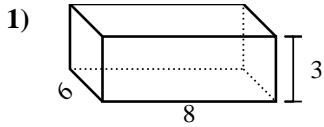
Antworten

1. 378 cm³
2. 192 cm³
3. 6 cm³
4. 648 cm³
5. 6 cm³
6. 378 cm³
7. 432 cm³
8. 384 cm³
9. 392 cm³
10. 140 cm³
11. 576 cm³
12. 336 cm³
13. 45 cm³
14. 48 cm³
15. 72 cm³



Bestimme das Volumen jedes rechteckigen Körpers. Denke daran, dass $V = \text{Länge} \times \text{Breite} \times \text{Höhe}$ ist. Einheiten sind in cm und nicht maßstabsgerecht.

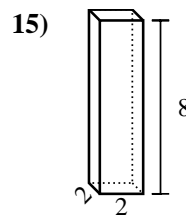
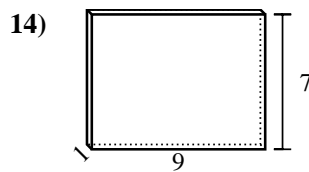
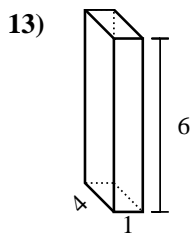
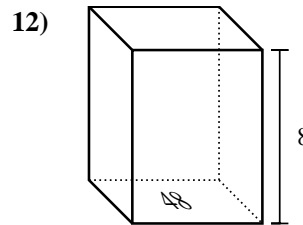
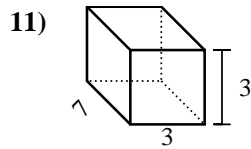
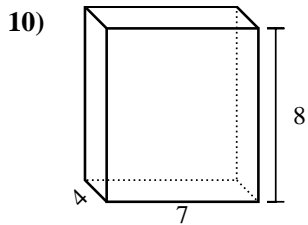
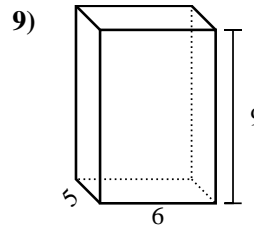
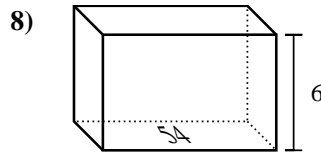
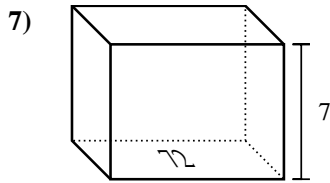
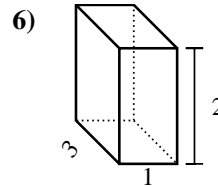
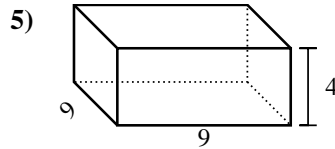
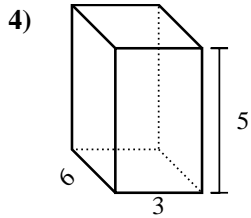
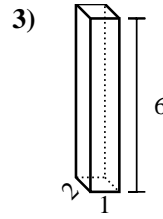
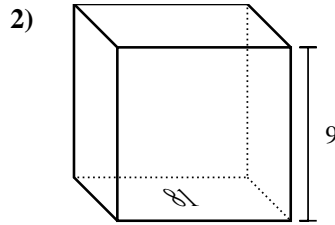
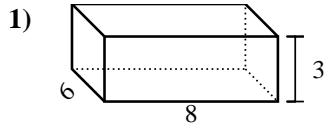
Antworten



1. _____
2. _____
3. _____
4. _____
5. _____
6. _____
7. _____
8. _____
9. _____
10. _____
11. _____
12. _____
13. _____
14. _____
15. _____



Bestimme das Volumen jedes rechteckigen Körpers. Denke daran, dass $V = \text{Länge} \times \text{Breite} \times \text{Höhe}$ ist. Einheiten sind in cm und nicht maßstabsgerecht.



Antworten

1. 144 cm³
2. 729 cm³
3. 12 cm³
4. 90 cm³
5. 324 cm³
6. 6 cm³
7. 504 cm³
8. 324 cm³
9. 270 cm³
10. 224 cm³
11. 63 cm³
12. 384 cm³
13. 24 cm³
14. 63 cm³
15. 32 cm³