

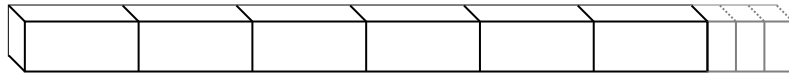


Bestimme die Anzahl der kleinen Teilstücke, die aus dem größeren Stück gemacht werden können.

Antworten

Bsp)

$$6\frac{3}{4}$$

Bsp. **27**

1. _____

1)

$$7\frac{1}{2}$$




2. _____

3. _____

2)

$$5\frac{1}{2}$$

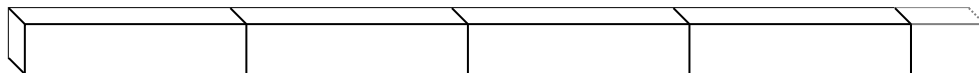


4. _____

5. _____

3)

$$4\frac{1}{3}$$



6. _____

7. _____

4)

$$9\frac{3}{4}$$

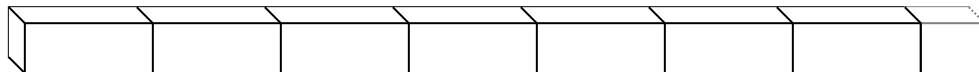


8. _____

9. _____

5)

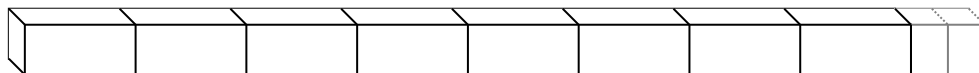
$$7\frac{1}{2}$$



10. _____


6)

$$8\frac{2}{3}$$



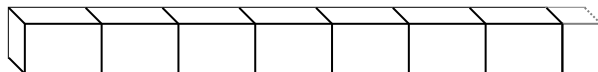
7)

$$2\frac{1}{2}$$




8)

$$7\frac{1}{2}$$



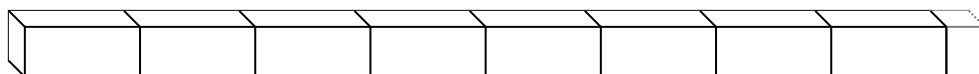
9)

$$2\frac{1}{3}$$



10)

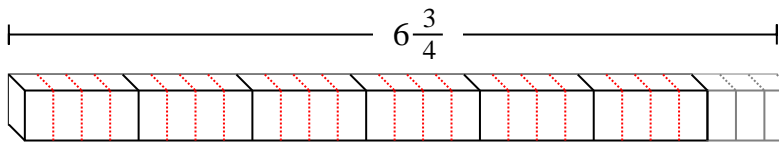
$$8\frac{1}{3}$$



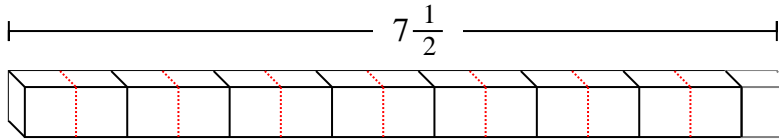


Bestimme die Anzahl der kleinen Teilstücke, die aus dem größeren Stück gemacht werden können.

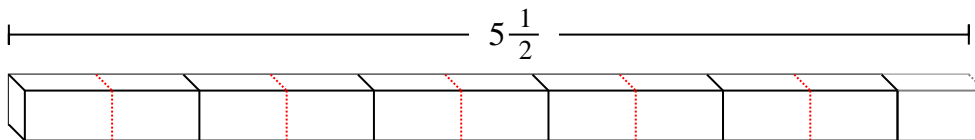
Bsp)



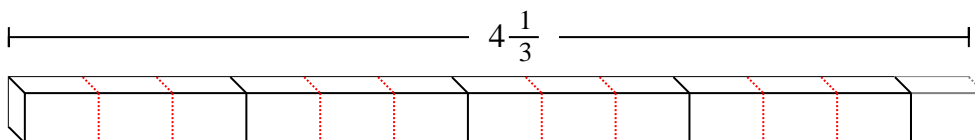
1)



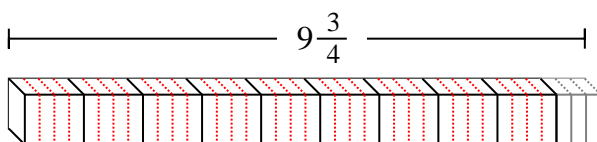
2)



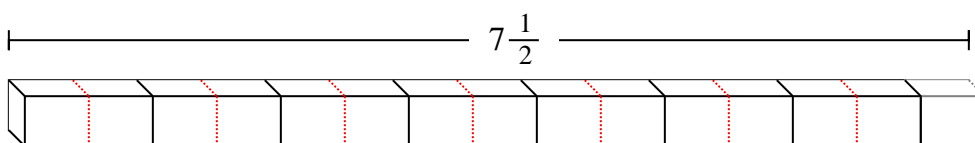
3)



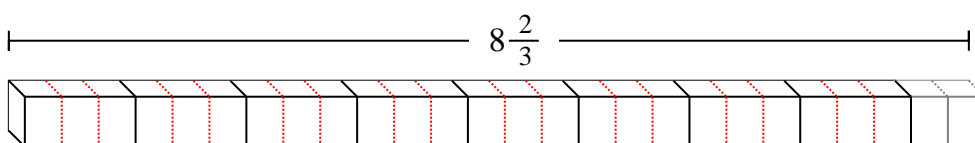
4)



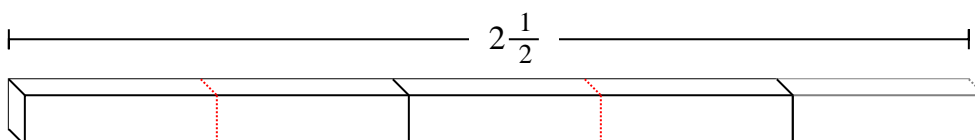
5)



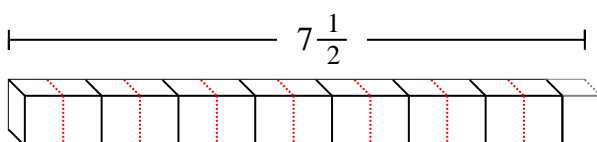
6)



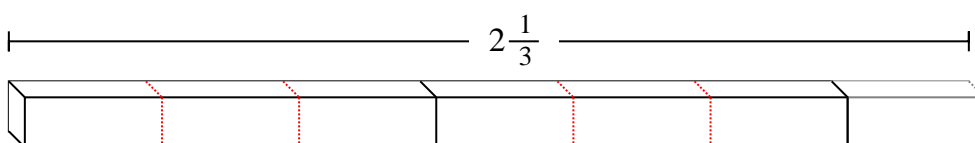
7)



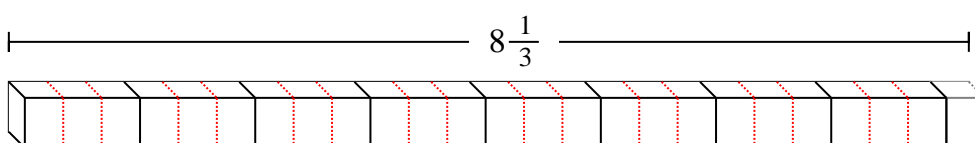
8)



9)



10)

**Antworten**Bsp. **27**1. **15**2. **11**3. **13**4. **39**5. **15**6. **26**7. **5**8. **15**9. **7**10. **25**