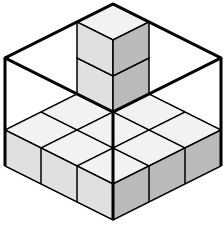




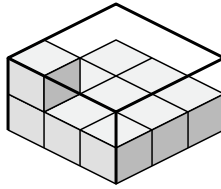
Erstellen Sie einen Ausdruck, um das Volumen jeder Box zu bestimmen.

**Antworten**

1)



2)



1. \_\_\_\_\_

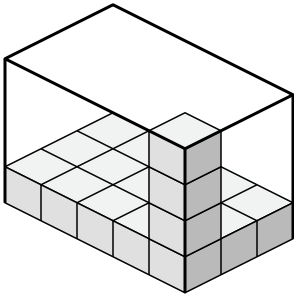
2. \_\_\_\_\_

3. \_\_\_\_\_

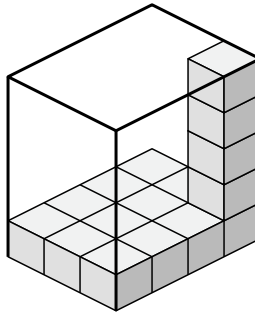
4. \_\_\_\_\_

5. \_\_\_\_\_

3)



4)

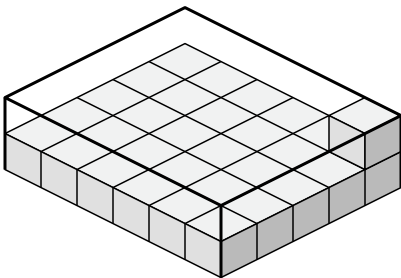


6. \_\_\_\_\_

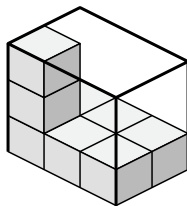
7. \_\_\_\_\_

8. \_\_\_\_\_

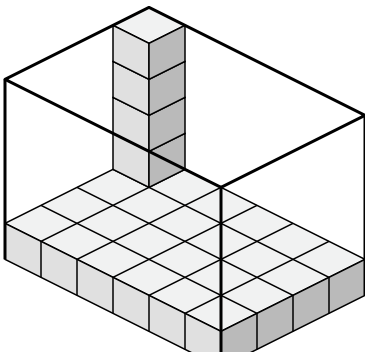
5)



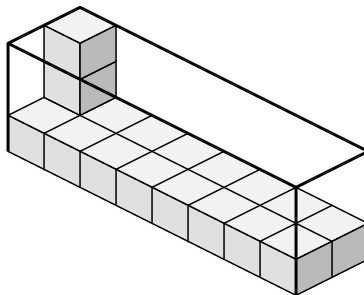
6)



7)



8)

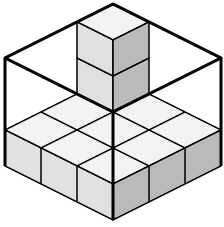




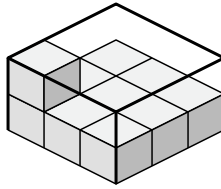
Erstellen Sie einen Ausdruck, um das Volumen jeder Box zu bestimmen.

Antworten

1)



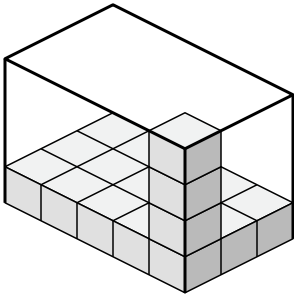
2)



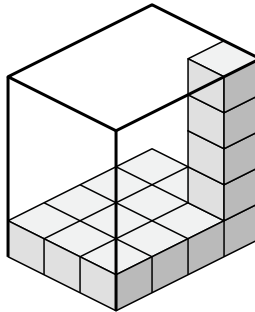
1. 3•3•3

2. 3•3•2

3)



4)



3. 5•3•4

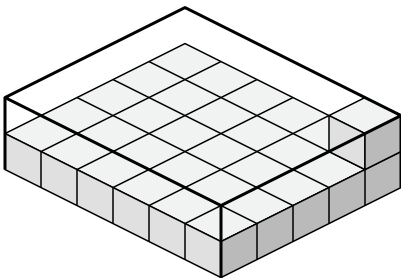
4. 3•4•5

5. 6•5•2

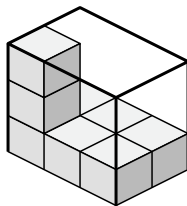
6. 3•2•3

7. 6•4•5

5)

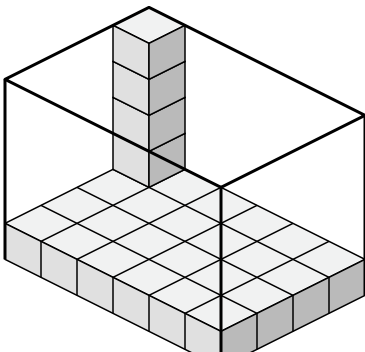


6)



8. 8•2•3

7)



8)

