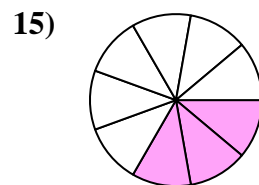
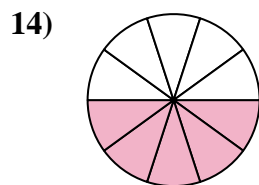
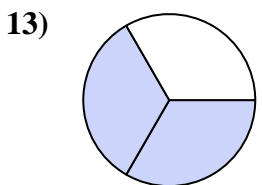
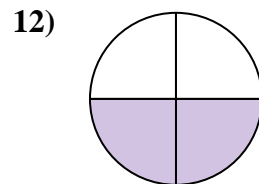
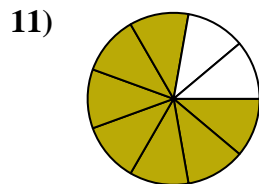
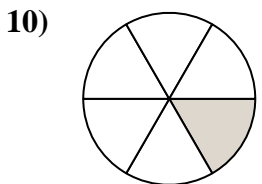
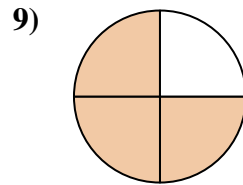
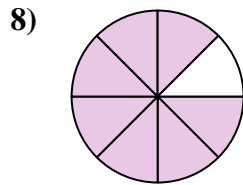
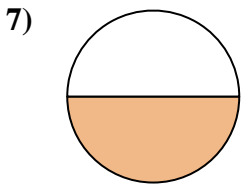
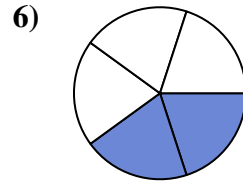
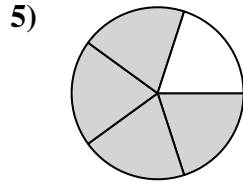
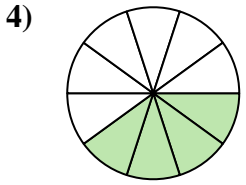
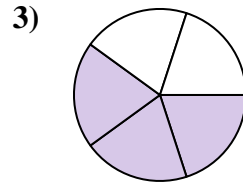
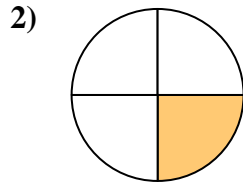
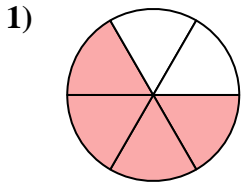




Finden Sie den Winkel (in Grad) des schattierten Teils des Kreises.

Antworten

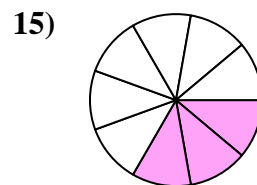
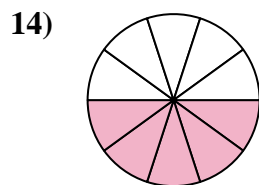
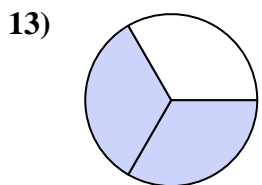
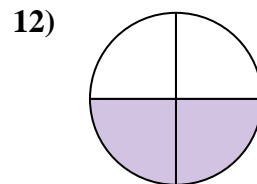
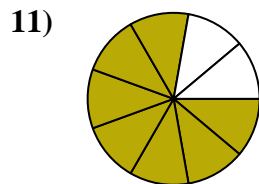
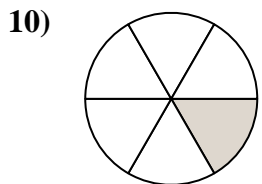
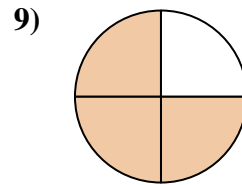
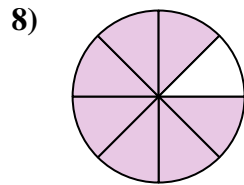
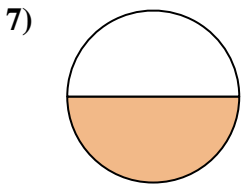
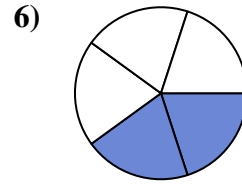
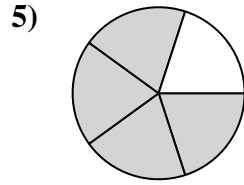
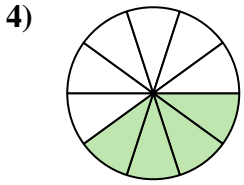
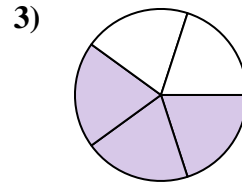
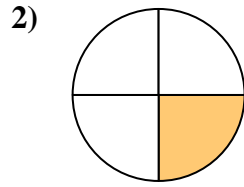
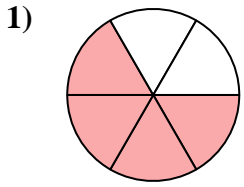


- 1. _____
- 2. _____
- 3. _____
- 4. _____
- 5. _____
- 6. _____
- 7. _____
- 8. _____
- 9. _____
- 10. _____
- 11. _____
- 12. _____
- 13. _____
- 14. _____
- 15. _____



Finden Sie den Winkel (in Grad) des schattierten Teils des Kreises.

Antworten



1. 240

2. 90

3. 216

4. 144

5. 288

6. 144

7. 180

8. 315

9. 270

10. 60

11. 280

12. 180

13. 240

14. 180

15. 120



Finden Sie den Winkel (in Grad) des schattierten Teils des Kreises.

Antworten

288

216

315

144

280

60

90

240

144

270

180

180

1. _____

2. _____

3. _____

4. _____

5. _____

6. _____

7. _____

8. _____

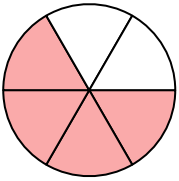
9. _____

10. _____

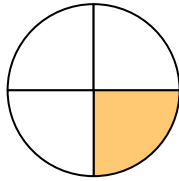
11. _____

12. _____

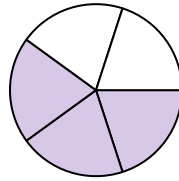
1)



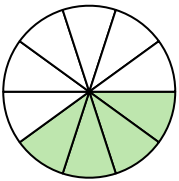
2)



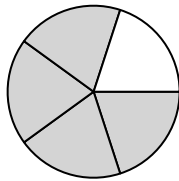
3)



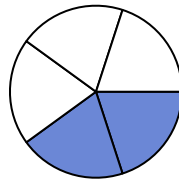
4)



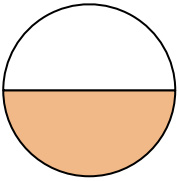
5)



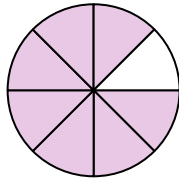
6)



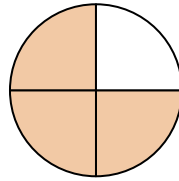
7)



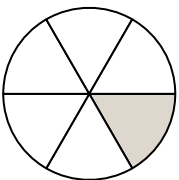
8)



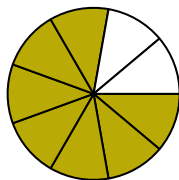
9)



10)



11)



12)

