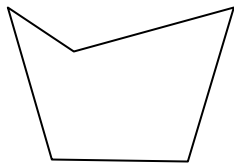
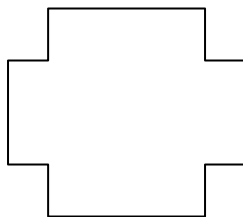


Zähle die Anzahl von spitzwinkligen, stumpfwinkligen, rechtwinkligen und überstumpften Winkeln in jeder Form.

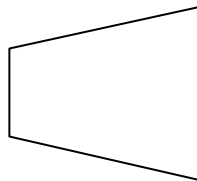
Bsp)



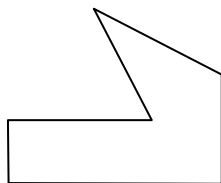
1)



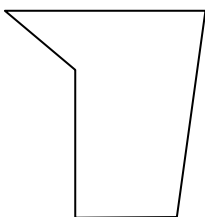
2)




3)



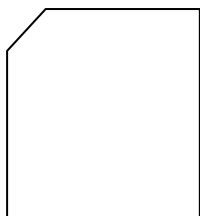
4)



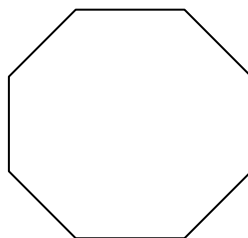
5)



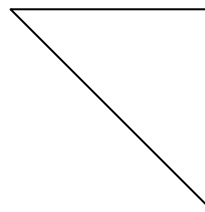
6)



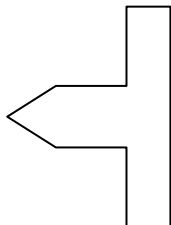
7)



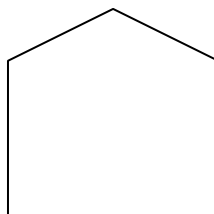
8)



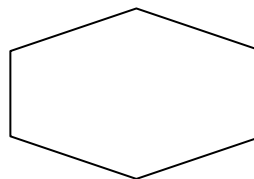
9)



10)



11)



Antworten

Bsp. 2 2 0 1

1. _____

2. _____

3. _____

4. _____

5.

6. _____

7. _____

8.

9.

10.

11

