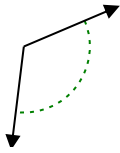




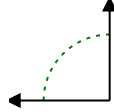
Stelle fest, ob der gezeigte Winkel spitzwinklig, stumpfwinklig oder geradwinklig ist.

**Antworten**

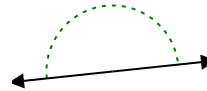
Bsp)



1)



2)

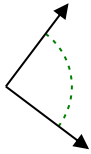


Bsp. stumpfwinklig

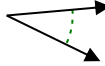
1. \_\_\_\_\_

2. \_\_\_\_\_

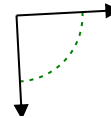
3)



4)



5)

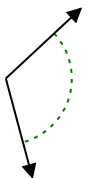


3. \_\_\_\_\_

4. \_\_\_\_\_

5. \_\_\_\_\_

6)



7)



8)

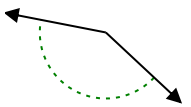


6. \_\_\_\_\_

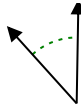
7. \_\_\_\_\_

8. \_\_\_\_\_

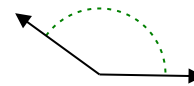
9)



10)



11)

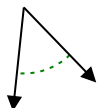


9. \_\_\_\_\_

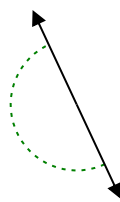
10. \_\_\_\_\_

11. \_\_\_\_\_

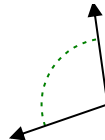
12)



13)



14)

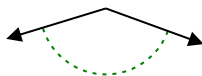


12. \_\_\_\_\_

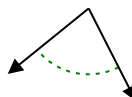
13. \_\_\_\_\_

14. \_\_\_\_\_

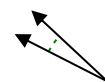
15)



16)



17)

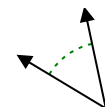


15. \_\_\_\_\_

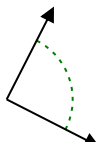
16. \_\_\_\_\_

17. \_\_\_\_\_

18)



19)



20)



18. \_\_\_\_\_

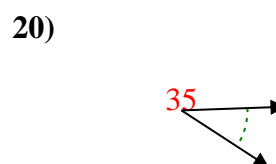
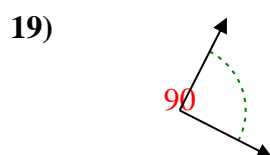
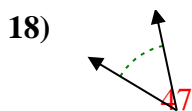
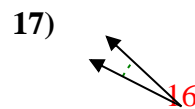
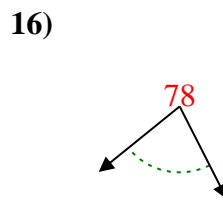
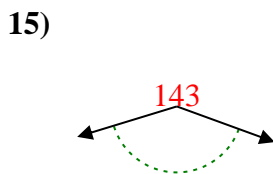
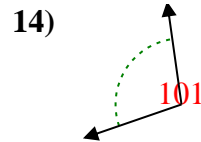
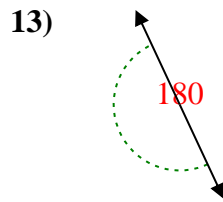
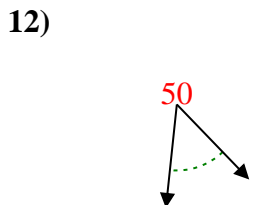
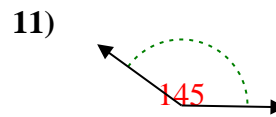
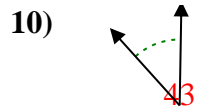
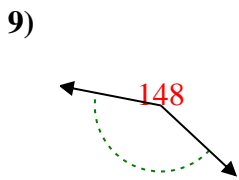

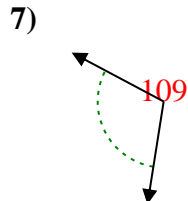
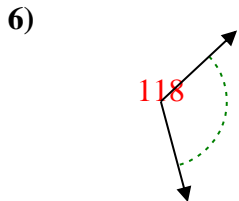
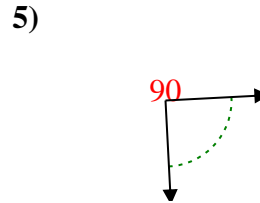
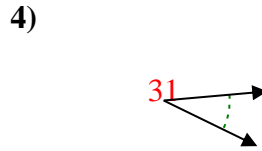
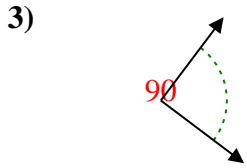
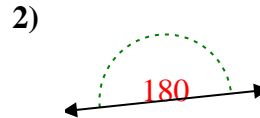
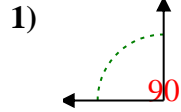
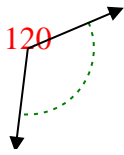
19. \_\_\_\_\_

20. \_\_\_\_\_



Stelle fest, ob der gezeigte Winkel spitzwinklig, stumpfwinklig, rechtwinklig oder geradwinklig ist.

Bsp)



**Antworten**

Bsp. stumpfwinklig

1. rechtwinklig

2. gestreckt

3. rechtwinklig

4. spitzwinklig

5. rechtwinklig

6. stumpfwinklig

7. stumpfwinklig

8. spitzwinklig

9. stumpfwinklig

10. spitzwinklig

11. stumpfwinklig

12. spitzwinklig

13. gestreckt

14. stumpfwinklig

15. stumpfwinklig

16. spitzwinklig

17. spitzwinklig

18. spitzwinklig

19. rechtwinklig

20. spitzwinklig