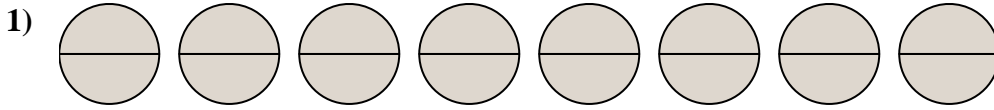


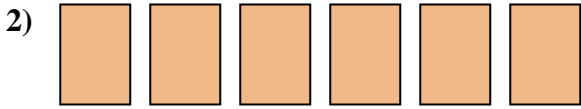


Schreiben Sie den schattierten Betrag als Bruch.

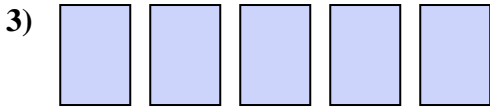
Antworten




1. _____



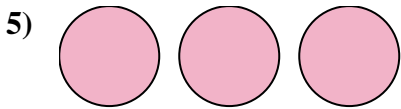
2. _____



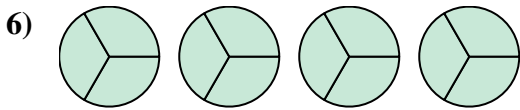
3. _____



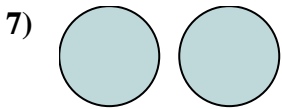
4. _____



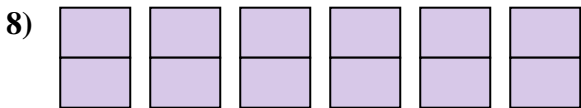
5. _____



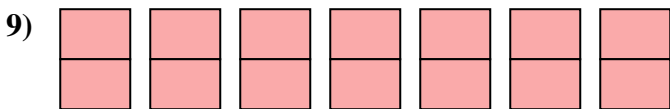
6. _____



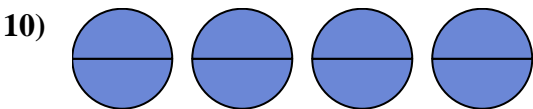
7. _____



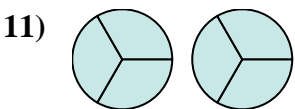
8. _____



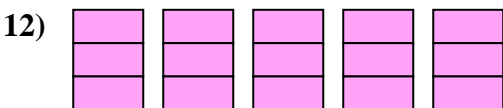
9. _____



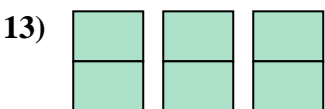
10. _____



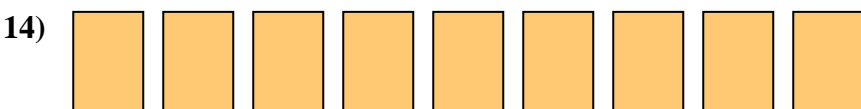
11. _____



12. _____



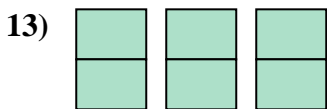
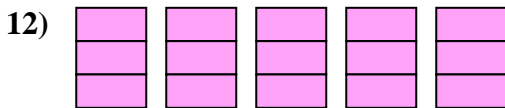
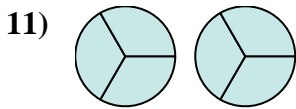
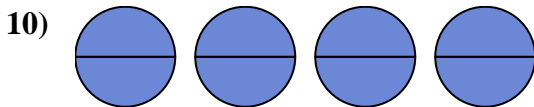
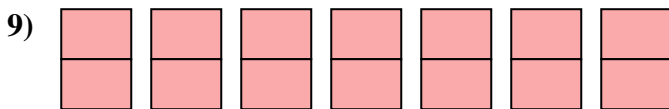
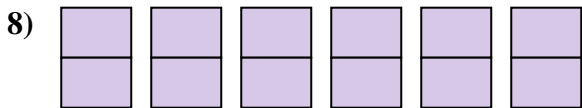
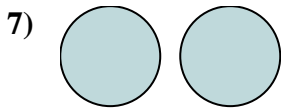
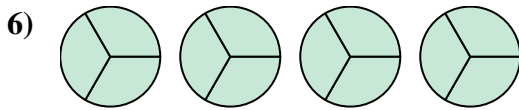
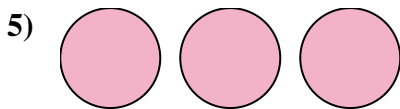

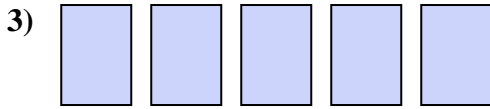
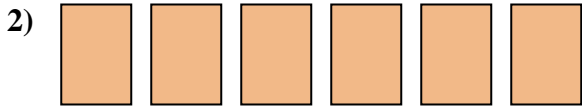
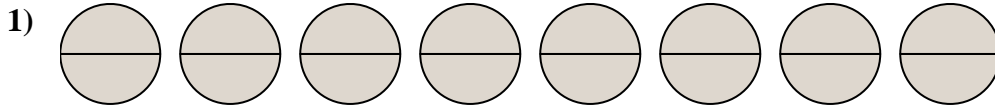
13. _____



14. _____



Schreiben Sie den schattierten Betrag als Bruch.

**Antworten**

1. $\frac{16}{2}$

2. $\frac{6}{1}$

3. $\frac{5}{1}$

4. $\frac{4}{1}$

5. $\frac{3}{1}$

6. $\frac{12}{3}$

7. $\frac{2}{1}$

8. $\frac{12}{2}$

9. $\frac{14}{2}$

10. $\frac{8}{2}$

11. $\frac{6}{3}$

12. $\frac{15}{3}$

13. $\frac{6}{2}$

14. $\frac{9}{1}$