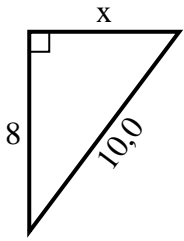


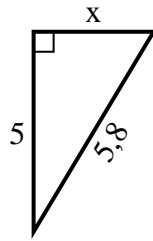


**Finden Sie den Wert von X.**

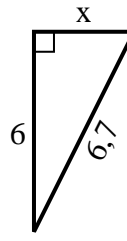
1) Umfang = 24 u



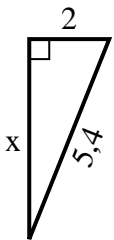
2) Umfang = 13,8 u



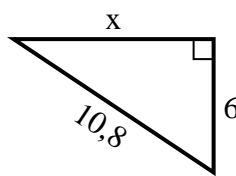
3) Umfang = 15,7 u



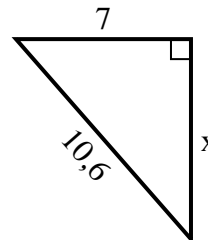
4) Umfang = 12,4 u



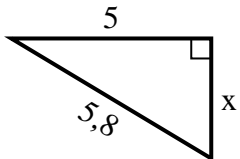
5) Umfang = 25,8 u



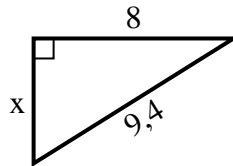
6) Umfang = 25,6 u



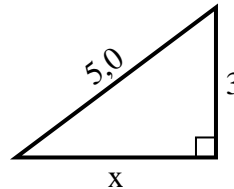
7) Umfang = 13,8 u



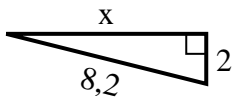
8) Umfang = 22,4 u



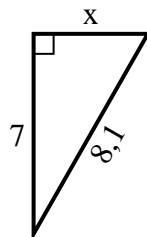
9) Umfang = 12 u



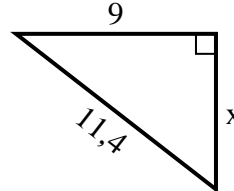
10) Umfang = 18,2 u



11) Umfang = 19,1 u



12) Umfang = 27,4 u

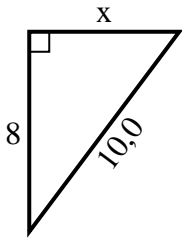


**Antworten**

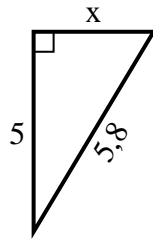
1. \_\_\_\_\_
2. \_\_\_\_\_
3. \_\_\_\_\_
4. \_\_\_\_\_
5. \_\_\_\_\_
6. \_\_\_\_\_
7. \_\_\_\_\_
8. \_\_\_\_\_
9. \_\_\_\_\_
10. \_\_\_\_\_
11. \_\_\_\_\_
12. \_\_\_\_\_

**Finden Sie den Wert von X.****Antworten**

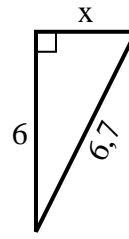
1) Umfang = 24 u



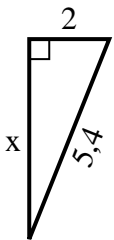
2) Umfang = 13,8 u



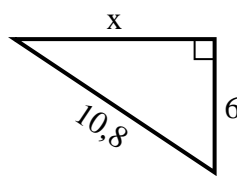
3) Umfang = 15,7 u



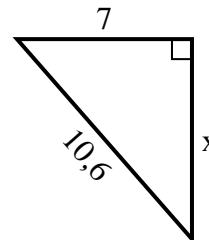
4) Umfang = 12,4 u



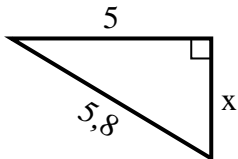
5) Umfang = 25,8 u



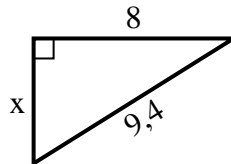
6) Umfang = 25,6 u



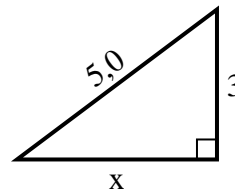
7) Umfang = 13,8 u



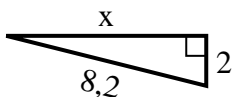
8) Umfang = 22,4 u



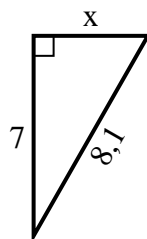
9) Umfang = 12 u



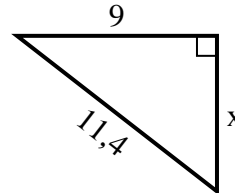
10) Umfang = 18,2 u



11) Umfang = 19,1 u



12) Umfang = 27,4 u

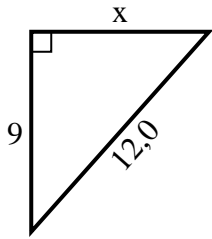


1. 6
2. 3
3. 3
4. 5
5. 9
6. 8
7. 3
8. 5
9. 4
10. 8
11. 4
12. 7

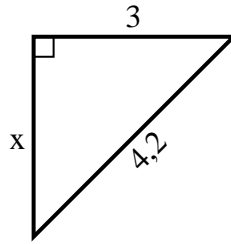


**Finden Sie den Wert von X.**

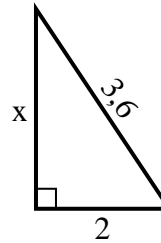
1) Umfang = 29 u



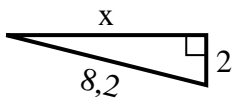
2) Umfang = 10,2 u



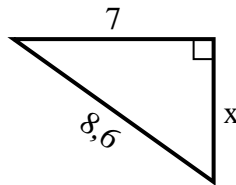
3) Umfang = 8,6 u



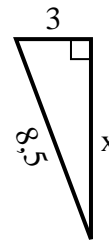
4) Umfang = 18,2 u



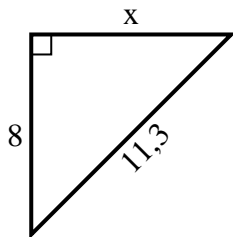
5) Umfang = 20,6 u



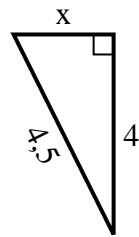
6) Umfang = 19,5 u



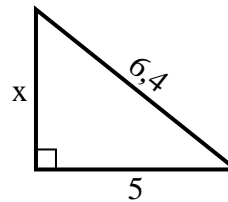
7) Umfang = 27,3 u



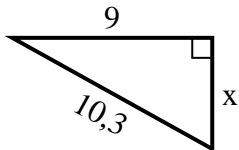
8) Umfang = 10,5 u



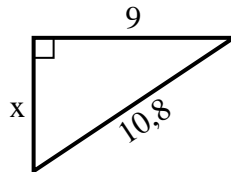
9) Umfang = 15,4 u



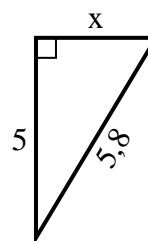
10) Umfang = 24,3 u



11) Umfang = 25,8 u



12) Umfang = 13,8 u

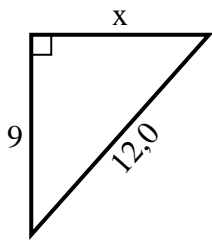


**Antworten**

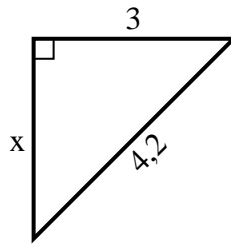
1. \_\_\_\_\_
2. \_\_\_\_\_
3. \_\_\_\_\_
4. \_\_\_\_\_
5. \_\_\_\_\_
6. \_\_\_\_\_
7. \_\_\_\_\_
8. \_\_\_\_\_
9. \_\_\_\_\_
10. \_\_\_\_\_
11. \_\_\_\_\_
12. \_\_\_\_\_

**Finden Sie den Wert von X.****Antworten**

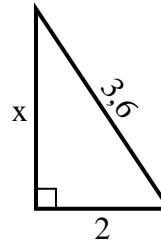
1) Umfang = 29 u



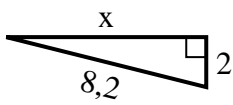
2) Umfang = 10,2 u



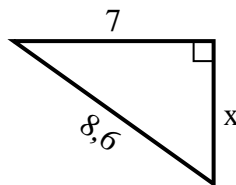
3) Umfang = 8,6 u



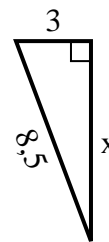
4) Umfang = 18,2 u



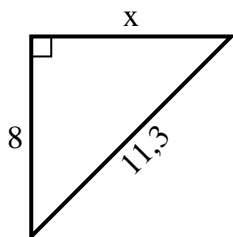
5) Umfang = 20,6 u



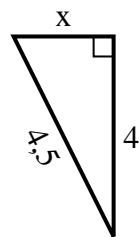
6) Umfang = 19,5 u



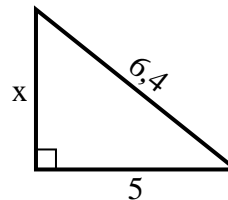
7) Umfang = 27,3 u



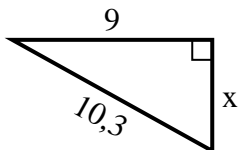
8) Umfang = 10,5 u



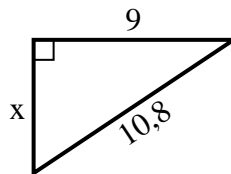
9) Umfang = 15,4 u



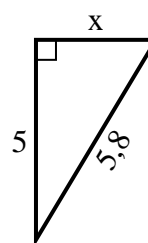
10) Umfang = 24,3 u



11) Umfang = 25,8 u



12) Umfang = 13,8 u

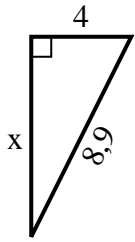


1. 8
2. 3
3. 3
4. 8
5. 5
6. 8
7. 8
8. 2
9. 4
10. 5
11. 6
12. 3

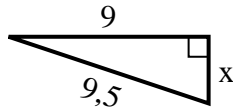


**Finden Sie den Wert von X.**

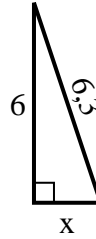
1) Umfang = 20,9 u



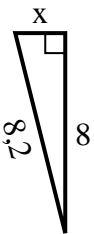
2) Umfang = 21,5 u



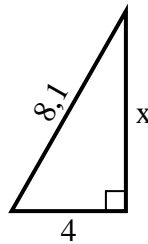
3) Umfang = 14,3 u



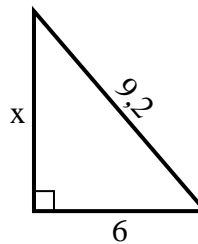
4) Umfang = 18,2 u



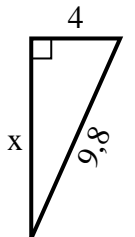
5) Umfang = 19,1 u



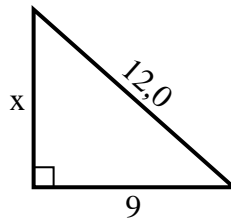
6) Umfang = 22,2 u



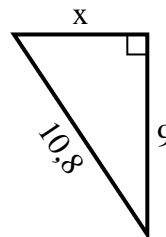
7) Umfang = 22,8 u



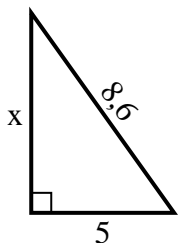
8) Umfang = 29 u



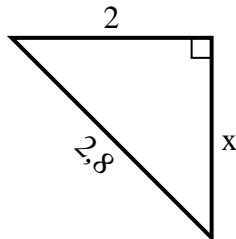
9) Umfang = 25,8 u



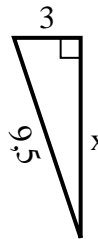
10) Umfang = 20,6 u



11) Umfang = 6,8 u



12) Umfang = 21,5 u

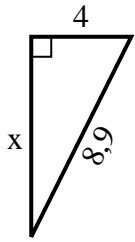


**Antworten**

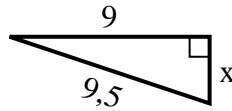
1. \_\_\_\_\_
2. \_\_\_\_\_
3. \_\_\_\_\_
4. \_\_\_\_\_
5. \_\_\_\_\_
6. \_\_\_\_\_
7. \_\_\_\_\_
8. \_\_\_\_\_
9. \_\_\_\_\_
10. \_\_\_\_\_
11. \_\_\_\_\_
12. \_\_\_\_\_

**Finden Sie den Wert von X.**

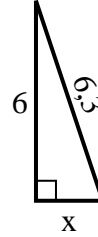
1) Umfang = 20,9 u



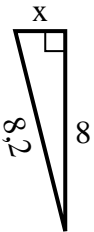
2) Umfang = 21,5 u



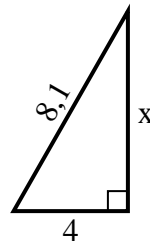
3) Umfang = 14,3 u



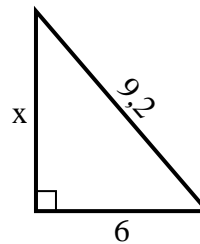
4) Umfang = 18,2 u



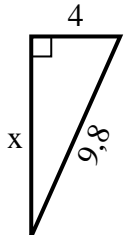
5) Umfang = 19,1 u



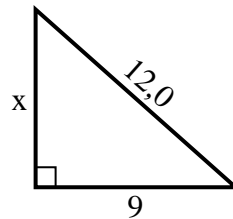
6) Umfang = 22,2 u



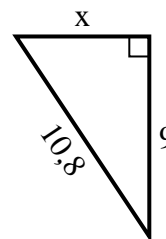
7) Umfang = 22,8 u



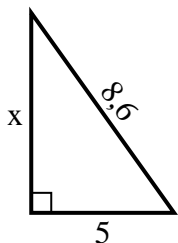
8) Umfang = 29 u



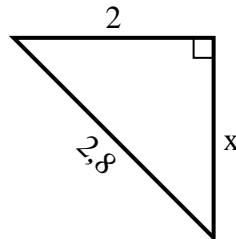
9) Umfang = 25,8 u



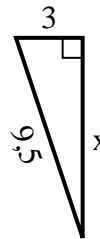
10) Umfang = 20,6 u



11) Umfang = 6,8 u



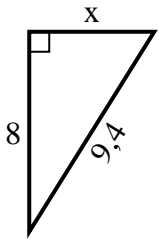
12) Umfang = 21,5 u

**Antworten**1. 82. 33. 24. 25. 76. 77. 98. 89. 610. 711. 212. 9

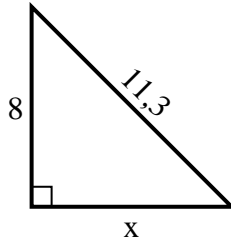


**Finden Sie den Wert von X.**

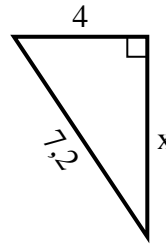
1) Umfang = 22,4 u



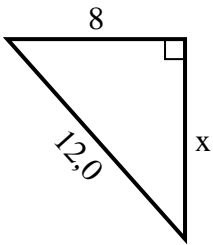
2) Umfang = 27,3 u



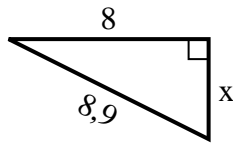
3) Umfang = 17,2 u



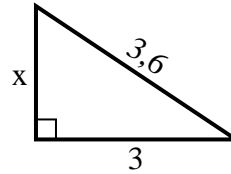
4) Umfang = 29 u



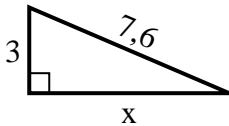
5) Umfang = 20,9 u



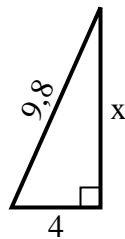
6) Umfang = 8,6 u



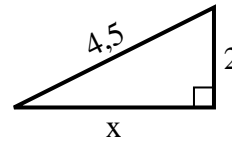
7) Umfang = 17,6 u



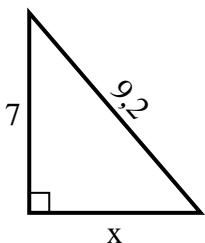
8) Umfang = 22,8 u



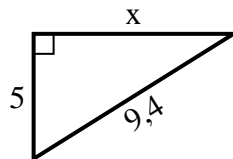
9) Umfang = 10,5 u



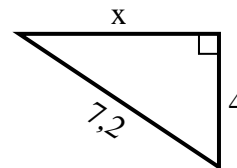
10) Umfang = 22,2 u



11) Umfang = 22,4 u



12) Umfang = 17,2 u

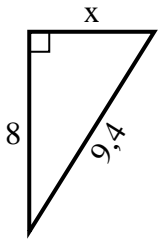


**Antworten**

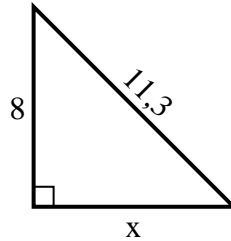
1. \_\_\_\_\_
2. \_\_\_\_\_
3. \_\_\_\_\_
4. \_\_\_\_\_
5. \_\_\_\_\_
6. \_\_\_\_\_
7. \_\_\_\_\_
8. \_\_\_\_\_
9. \_\_\_\_\_
10. \_\_\_\_\_
11. \_\_\_\_\_
12. \_\_\_\_\_

**Finden Sie den Wert von X.**

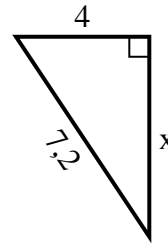
1) Umfang = 22,4 u



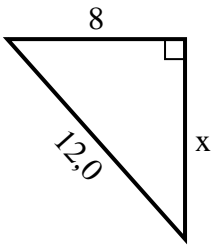
2) Umfang = 27,3 u



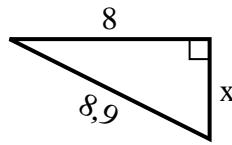
3) Umfang = 17,2 u



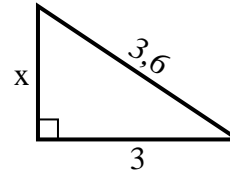
4) Umfang = 29 u



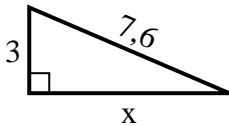
5) Umfang = 20,9 u



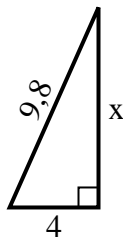
6) Umfang = 8,6 u



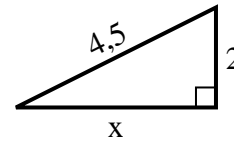
7) Umfang = 17,6 u



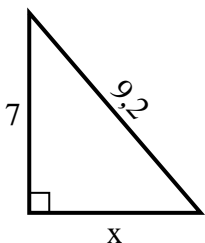
8) Umfang = 22,8 u



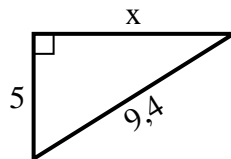
9) Umfang = 10,5 u



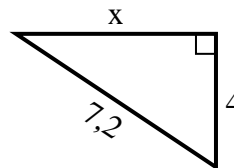
10) Umfang = 22,2 u



11) Umfang = 22,4 u



12) Umfang = 17,2 u

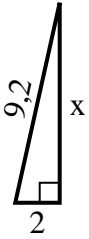
**Antworten**1. 52. 83. 64. 95. 46. 27. 78. 99. 410. 611. 812. 6



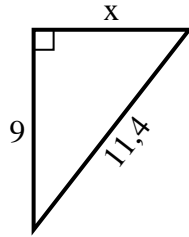


**Finden Sie den Wert von X.**

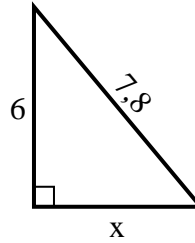
1) Umfang = 20,2 u



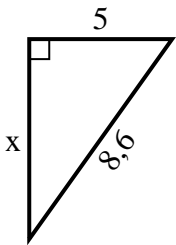
2) Umfang = 27,4 u



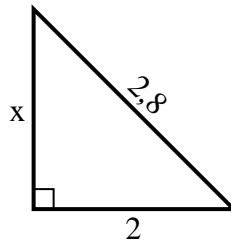
3) Umfang = 18,8 u



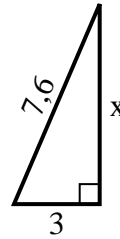
4) Umfang = 20,6 u



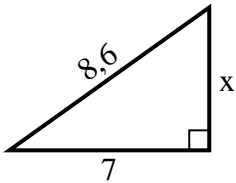
5) Umfang = 6,8 u



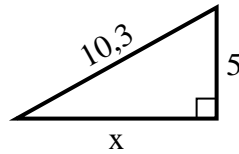
6) Umfang = 17,6 u



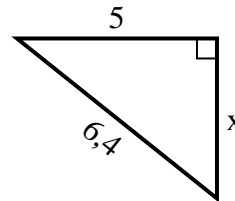
7) Umfang = 20,6 u



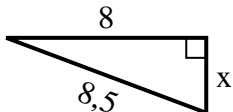
8) Umfang = 24,3 u



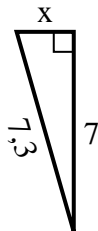
9) Umfang = 15,4 u



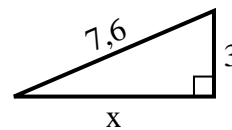
10) Umfang = 19,5 u



11) Umfang = 16,3 u



12) Umfang = 17,6 u

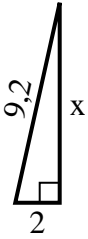


**Antworten**

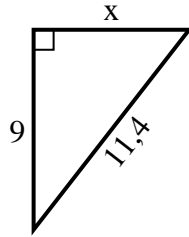
1. \_\_\_\_\_
2. \_\_\_\_\_
3. \_\_\_\_\_
4. \_\_\_\_\_
5. \_\_\_\_\_
6. \_\_\_\_\_
7. \_\_\_\_\_
8. \_\_\_\_\_
9. \_\_\_\_\_
10. \_\_\_\_\_
11. \_\_\_\_\_
12. \_\_\_\_\_

**Finden Sie den Wert von X.**

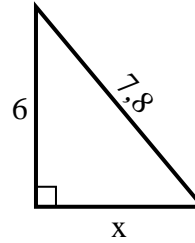
1) Umfang = 20,2 u



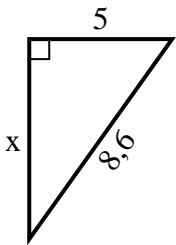
2) Umfang = 27,4 u



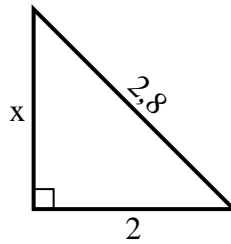
3) Umfang = 18,8 u



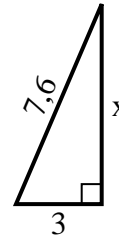
4) Umfang = 20,6 u



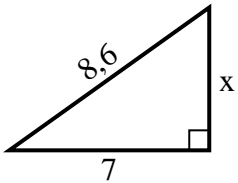
5) Umfang = 6,8 u



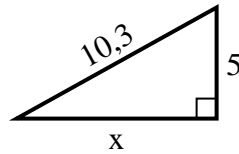
6) Umfang = 17,6 u



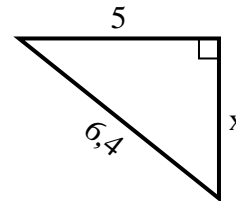
7) Umfang = 20,6 u



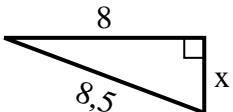
8) Umfang = 24,3 u



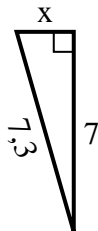
9) Umfang = 15,4 u



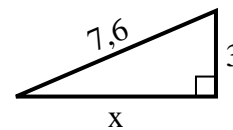
10) Umfang = 19,5 u



11) Umfang = 16,3 u



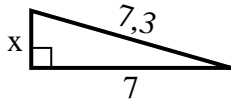
12) Umfang = 17,6 u

**Antworten**1. 92. 73. 54. 75. 26. 77. 58. 99. 410. 311. 212. 7

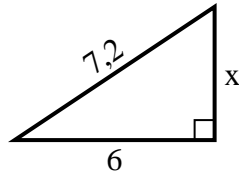


**Finden Sie den Wert von X.**

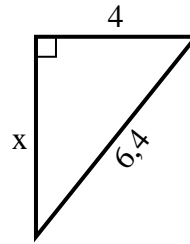
1) Umfang = 16,3 u



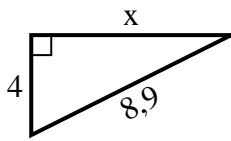
2) Umfang = 17,2 u



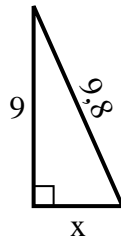
3) Umfang = 15,4 u



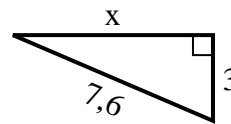
4) Umfang = 20,9 u



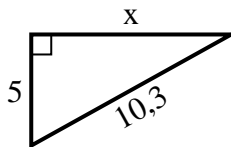
5) Umfang = 22,8 u



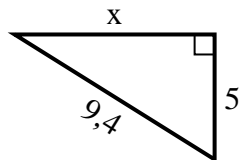
6) Umfang = 17,6 u



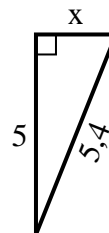
7) Umfang = 24,3 u



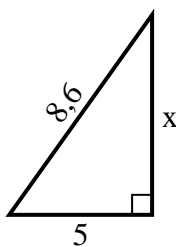
8) Umfang = 22,4 u



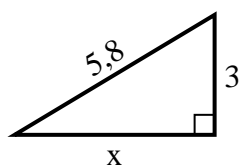
9) Umfang = 12,4 u



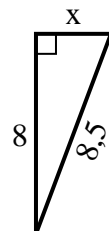
10) Umfang = 20,6 u



11) Umfang = 13,8 u



12) Umfang = 19,5 u

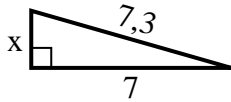


**Antworten**

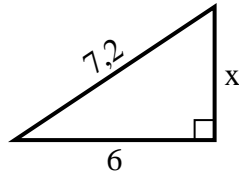
1. \_\_\_\_\_
2. \_\_\_\_\_
3. \_\_\_\_\_
4. \_\_\_\_\_
5. \_\_\_\_\_
6. \_\_\_\_\_
7. \_\_\_\_\_
8. \_\_\_\_\_
9. \_\_\_\_\_
10. \_\_\_\_\_
11. \_\_\_\_\_
12. \_\_\_\_\_

**Finden Sie den Wert von X.**

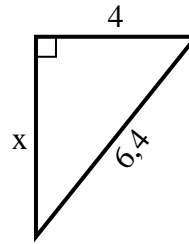
1) Umfang = 16,3 u



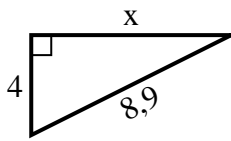
2) Umfang = 17,2 u



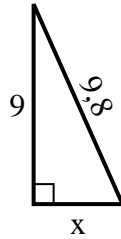
3) Umfang = 15,4 u



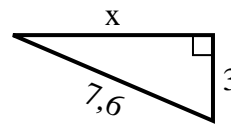
4) Umfang = 20,9 u



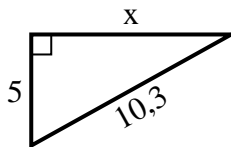
5) Umfang = 22,8 u



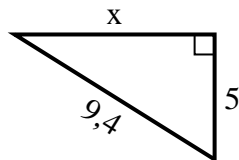
6) Umfang = 17,6 u



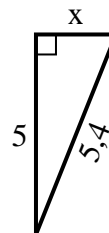
7) Umfang = 24,3 u



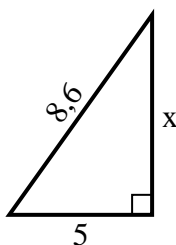
8) Umfang = 22,4 u



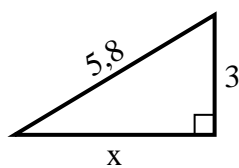
9) Umfang = 12,4 u



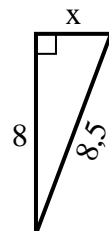
10) Umfang = 20,6 u



11) Umfang = 13,8 u



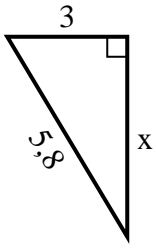
12) Umfang = 19,5 u

**Antworten**1. 22. 43. 54. 85. 46. 77. 98. 89. 210. 711. 512. 3

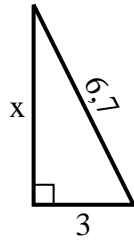


**Finden Sie den Wert von X.**

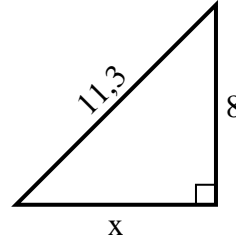
1) Umfang = 13,8 u



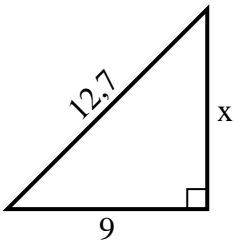
2) Umfang = 15,7 u



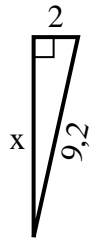
3) Umfang = 27,3 u



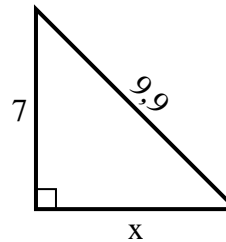
4) Umfang = 30,7 u



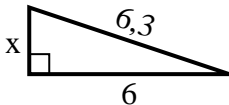
5) Umfang = 20,2 u



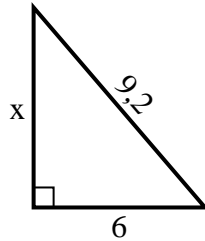
6) Umfang = 23,9 u



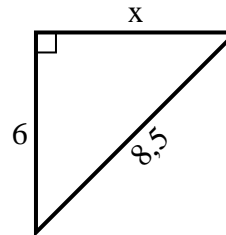
7) Umfang = 14,3 u



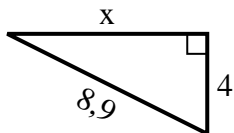
8) Umfang = 22,2 u



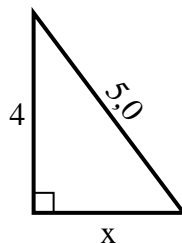
9) Umfang = 20,5 u



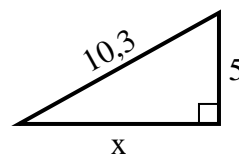
10) Umfang = 20,9 u



11) Umfang = 12 u



12) Umfang = 24,3 u

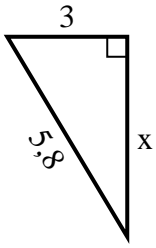


**Antworten**

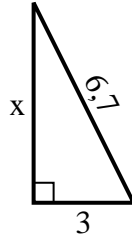
1. \_\_\_\_\_
2. \_\_\_\_\_
3. \_\_\_\_\_
4. \_\_\_\_\_
5. \_\_\_\_\_
6. \_\_\_\_\_
7. \_\_\_\_\_
8. \_\_\_\_\_
9. \_\_\_\_\_
10. \_\_\_\_\_
11. \_\_\_\_\_
12. \_\_\_\_\_

**Finden Sie den Wert von X.**

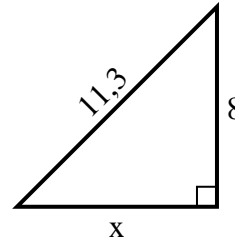
1) Umfang = 13,8 u



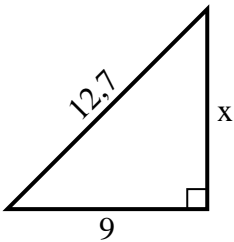
2) Umfang = 15,7 u



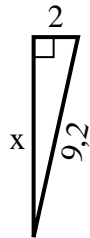
3) Umfang = 27,3 u



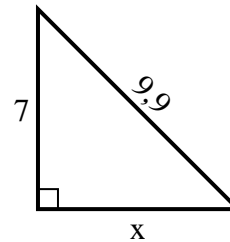
4) Umfang = 30,7 u



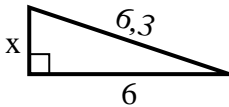
5) Umfang = 20,2 u



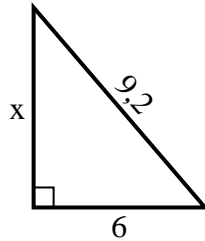
6) Umfang = 23,9 u



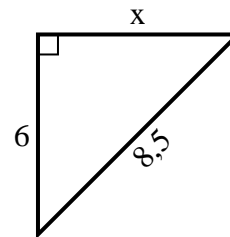
7) Umfang = 14,3 u



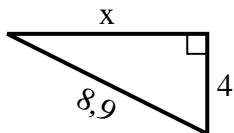
8) Umfang = 22,2 u



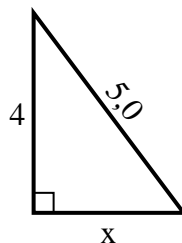
9) Umfang = 20,5 u



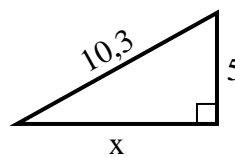
10) Umfang = 20,9 u



11) Umfang = 12 u



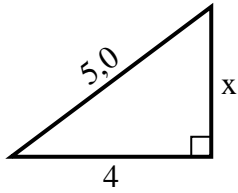
12) Umfang = 24,3 u

**Antworten**1. 52. 63. 84. 95. 96. 77. 28. 79. 610. 811. 312. 9

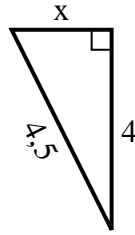


**Finden Sie den Wert von X.**

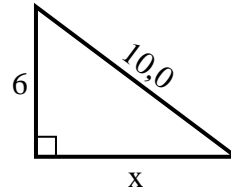
1) Umfang = 12 u



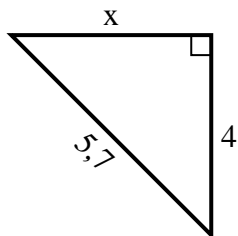
2) Umfang = 10,5 u



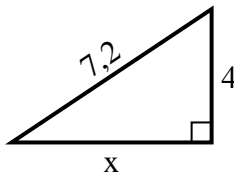
3) Umfang = 24 u



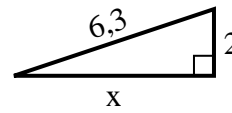
4) Umfang = 13,7 u



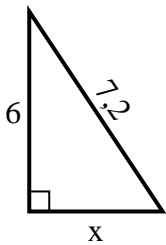
5) Umfang = 17,2 u



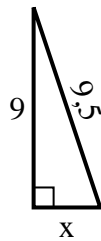
6) Umfang = 14,3 u



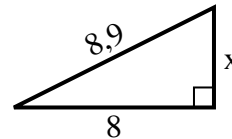
7) Umfang = 17,2 u



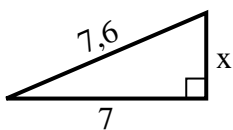
8) Umfang = 21,5 u



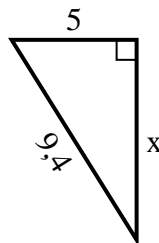
9) Umfang = 20,9 u



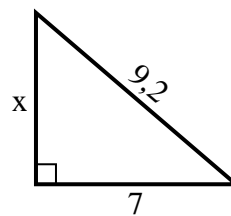
10) Umfang = 17,6 u



11) Umfang = 22,4 u



12) Umfang = 22,2 u

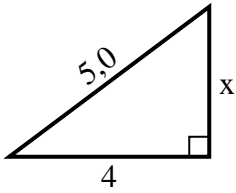


**Antworten**

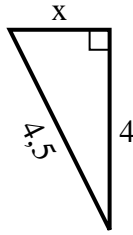
1. \_\_\_\_\_
2. \_\_\_\_\_
3. \_\_\_\_\_
4. \_\_\_\_\_
5. \_\_\_\_\_
6. \_\_\_\_\_
7. \_\_\_\_\_
8. \_\_\_\_\_
9. \_\_\_\_\_
10. \_\_\_\_\_
11. \_\_\_\_\_
12. \_\_\_\_\_

**Finden Sie den Wert von X.**

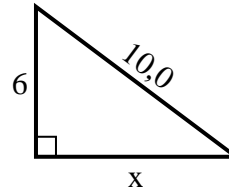
1) Umfang = 12 u



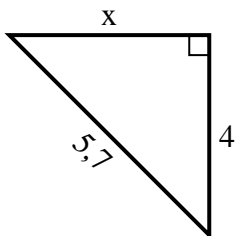
2) Umfang = 10,5 u



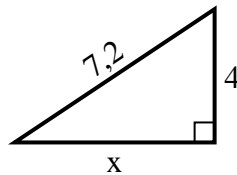
3) Umfang = 24 u



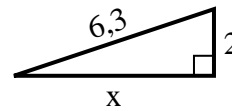
4) Umfang = 13,7 u



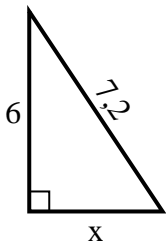
5) Umfang = 17,2 u



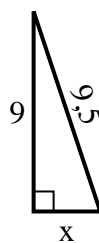
6) Umfang = 14,3 u



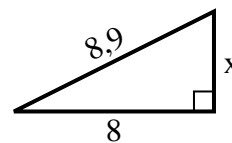
7) Umfang = 17,2 u



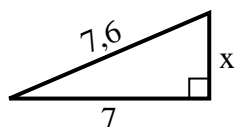
8) Umfang = 21,5 u



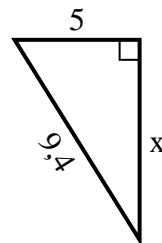
9) Umfang = 20,9 u



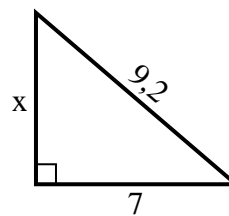
10) Umfang = 17,6 u



11) Umfang = 22,4 u



12) Umfang = 22,2 u

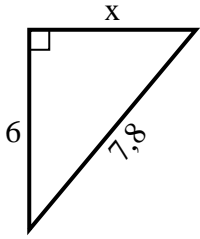
**Antworten**1. 32. 23. 84. 45. 66. 67. 48. 39. 410. 311. 812. 6



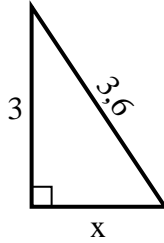


**Finden Sie den Wert von X.**

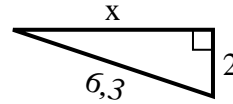
1) Umfang = 18,8 u



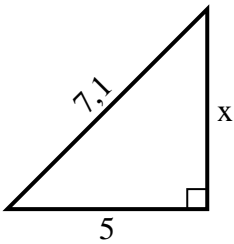
2) Umfang = 8,6 u



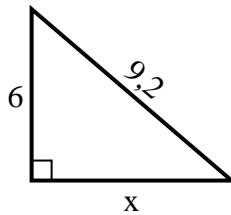
3) Umfang = 14,3 u



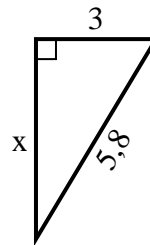
4) Umfang = 17,1 u



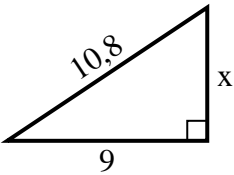
5) Umfang = 22,2 u



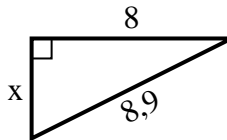
6) Umfang = 13,8 u



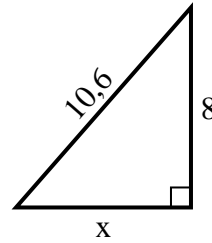
7) Umfang = 25,8 u



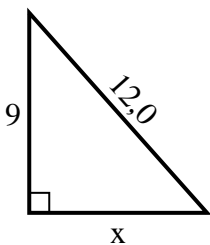
8) Umfang = 20,9 u



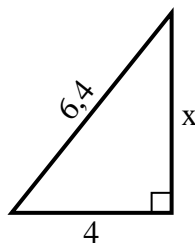
9) Umfang = 25,6 u



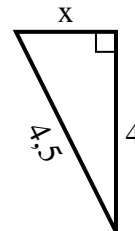
10) Umfang = 29 u



11) Umfang = 15,4 u



12) Umfang = 10,5 u

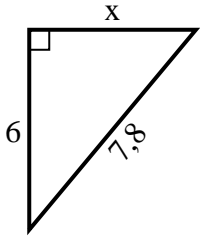


**Antworten**

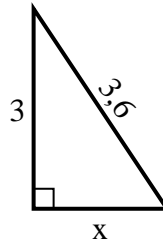
1. \_\_\_\_\_
2. \_\_\_\_\_
3. \_\_\_\_\_
4. \_\_\_\_\_
5. \_\_\_\_\_
6. \_\_\_\_\_
7. \_\_\_\_\_
8. \_\_\_\_\_
9. \_\_\_\_\_
10. \_\_\_\_\_
11. \_\_\_\_\_
12. \_\_\_\_\_

**Finden Sie den Wert von X.**

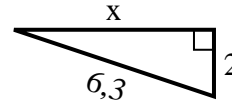
1) Umfang = 18,8 u



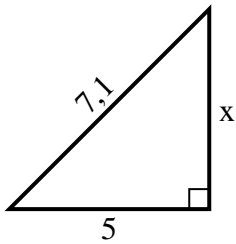
2) Umfang = 8,6 u



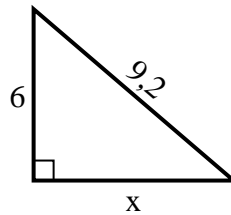
3) Umfang = 14,3 u



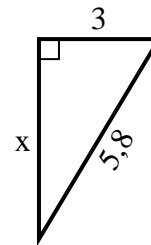
4) Umfang = 17,1 u



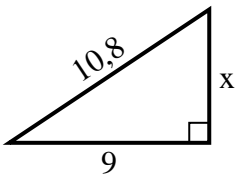
5) Umfang = 22,2 u



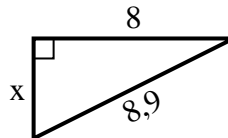
6) Umfang = 13,8 u



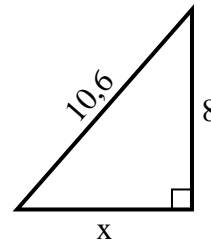
7) Umfang = 25,8 u



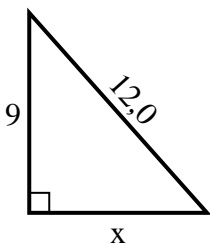
8) Umfang = 20,9 u



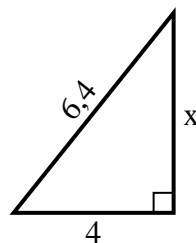
9) Umfang = 25,6 u



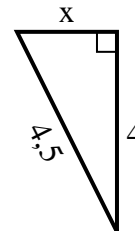
10) Umfang = 29 u



11) Umfang = 15,4 u



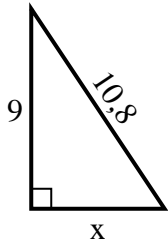
12) Umfang = 10,5 u

**Antworten**1. 52. 23. 64. 55. 76. 57. 68. 49. 710. 811. 512. 2

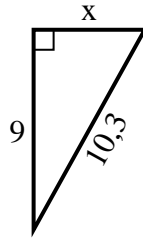


**Finden Sie den Wert von X.**

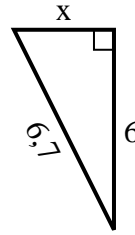
1) Umfang = 25,8 u



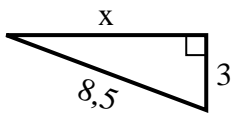
2) Umfang = 24,3 u



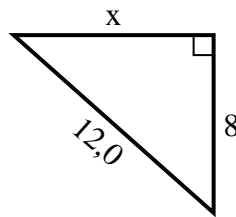
3) Umfang = 15,7 u



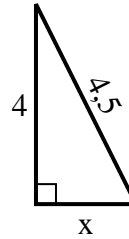
4) Umfang = 19,5 u



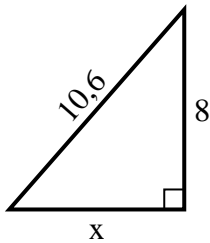
5) Umfang = 29 u



6) Umfang = 10,5 u



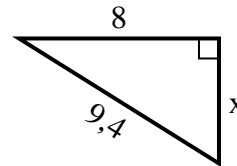
7) Umfang = 25,6 u



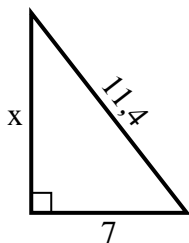
8) Umfang = 14,3 u



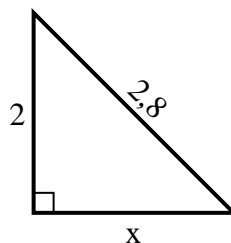
9) Umfang = 22,4 u



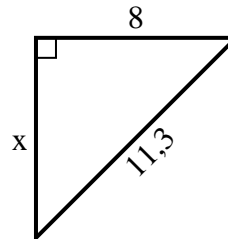
10) Umfang = 27,4 u



11) Umfang = 6,8 u



12) Umfang = 27,3 u

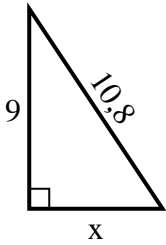


**Antworten**

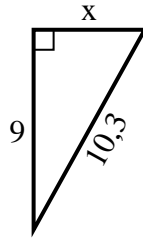
1. \_\_\_\_\_
2. \_\_\_\_\_
3. \_\_\_\_\_
4. \_\_\_\_\_
5. \_\_\_\_\_
6. \_\_\_\_\_
7. \_\_\_\_\_
8. \_\_\_\_\_
9. \_\_\_\_\_
10. \_\_\_\_\_
11. \_\_\_\_\_
12. \_\_\_\_\_

**Finden Sie den Wert von X.**

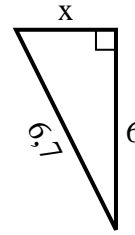
1) Umfang = 25,8 u



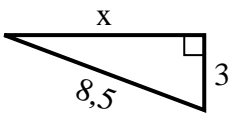
2) Umfang = 24,3 u



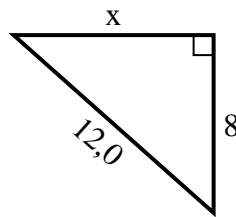
3) Umfang = 15,7 u



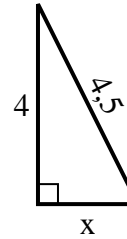
4) Umfang = 19,5 u



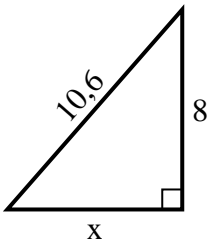
5) Umfang = 29 u



6) Umfang = 10,5 u



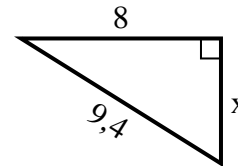
7) Umfang = 25,6 u



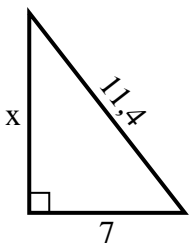
8) Umfang = 14,3 u



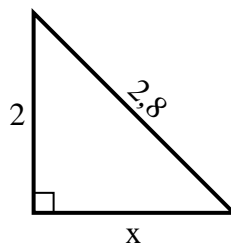
9) Umfang = 22,4 u



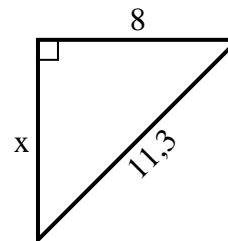
10) Umfang = 27,4 u



11) Umfang = 6,8 u



12) Umfang = 27,3 u

**Antworten**1. 62. 53. 34. 85. 96. 27. 78. 29. 510. 911. 212. 8