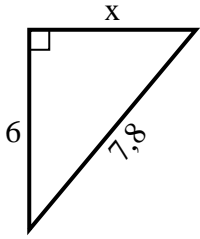


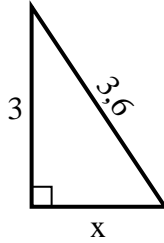


Finden Sie den Wert von X.

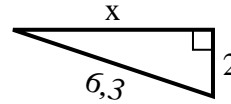
1) Umfang = 18,8 u



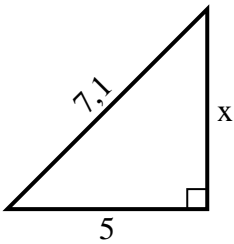
2) Umfang = 8,6 u



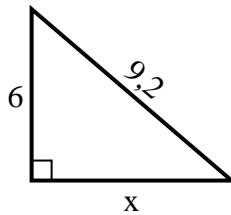
3) Umfang = 14,3 u



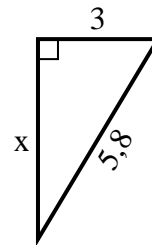
4) Umfang = 17,1 u



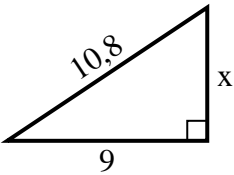
5) Umfang = 22,2 u



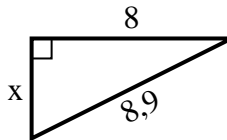
6) Umfang = 13,8 u



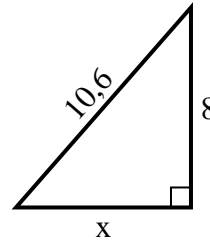
7) Umfang = 25,8 u



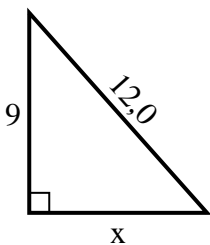
8) Umfang = 20,9 u



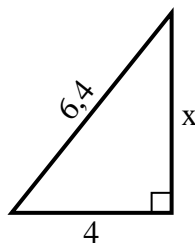
9) Umfang = 25,6 u



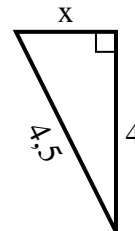
10) Umfang = 29 u



11) Umfang = 15,4 u



12) Umfang = 10,5 u

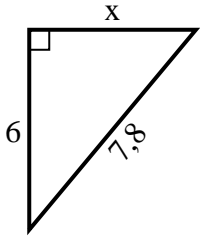


Antworten

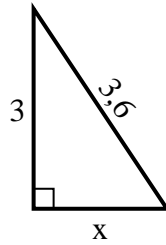
1. _____
2. _____
3. _____
4. _____
5. _____
6. _____
7. _____
8. _____
9. _____
10. _____
11. _____
12. _____

**Finden Sie den Wert von X.**

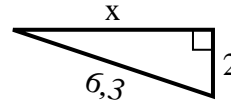
1) Umfang = 18,8 u



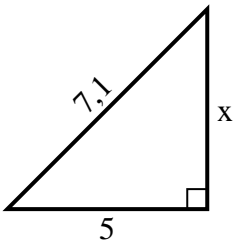
2) Umfang = 8,6 u



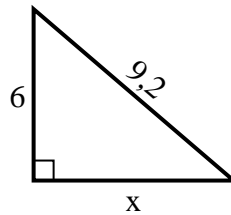
3) Umfang = 14,3 u



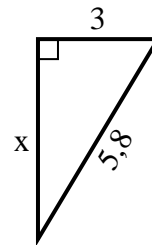
4) Umfang = 17,1 u



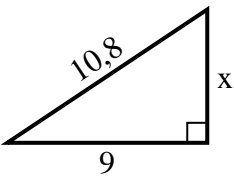
5) Umfang = 22,2 u



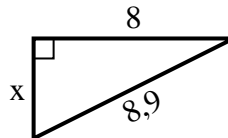
6) Umfang = 13,8 u



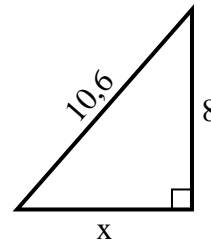
7) Umfang = 25,8 u



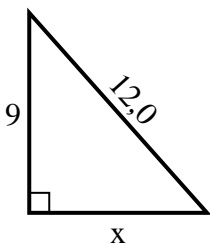
8) Umfang = 20,9 u



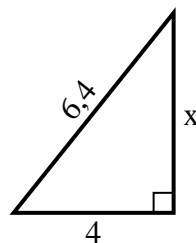
9) Umfang = 25,6 u



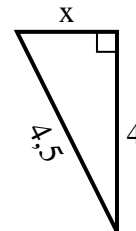
10) Umfang = 29 u



11) Umfang = 15,4 u



12) Umfang = 10,5 u

**Antworten**1. 52. 23. 64. 55. 76. 57. 68. 49. 710. 811. 512. 2