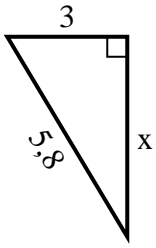


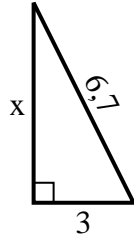


**Finden Sie den Wert von X.**

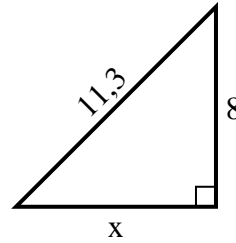
1) Umfang = 13,8 u



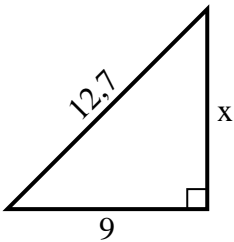
2) Umfang = 15,7 u



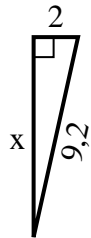
3) Umfang = 27,3 u



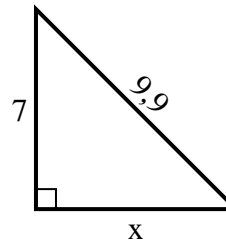
4) Umfang = 30,7 u



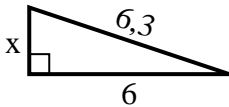
5) Umfang = 20,2 u



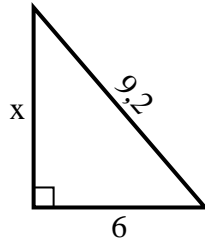
6) Umfang = 23,9 u



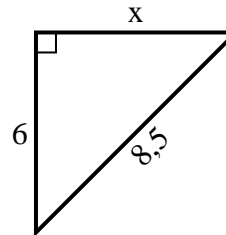
7) Umfang = 14,3 u



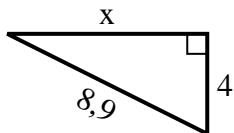
8) Umfang = 22,2 u



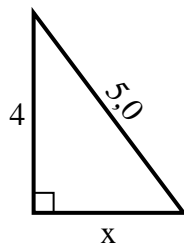
9) Umfang = 20,5 u



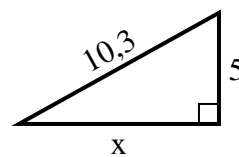
10) Umfang = 20,9 u



11) Umfang = 12 u



12) Umfang = 24,3 u

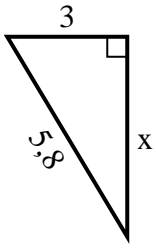


**Antworten**

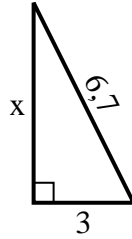
1. \_\_\_\_\_
2. \_\_\_\_\_
3. \_\_\_\_\_
4. \_\_\_\_\_
5. \_\_\_\_\_
6. \_\_\_\_\_
7. \_\_\_\_\_
8. \_\_\_\_\_
9. \_\_\_\_\_
10. \_\_\_\_\_
11. \_\_\_\_\_
12. \_\_\_\_\_

**Finden Sie den Wert von X.**

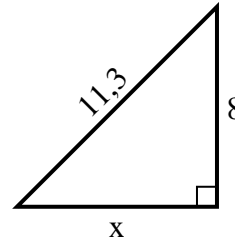
1) Umfang = 13,8 u



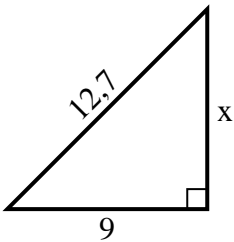
2) Umfang = 15,7 u



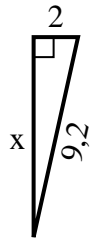
3) Umfang = 27,3 u



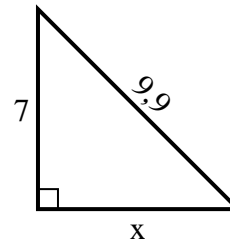
4) Umfang = 30,7 u



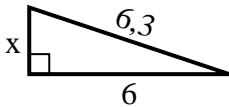
5) Umfang = 20,2 u



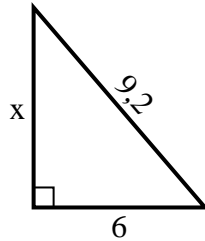
6) Umfang = 23,9 u



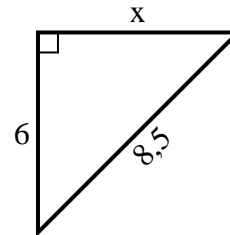
7) Umfang = 14,3 u



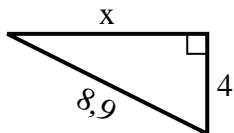
8) Umfang = 22,2 u



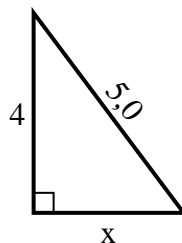
9) Umfang = 20,5 u



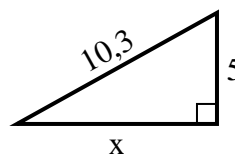
10) Umfang = 20,9 u



11) Umfang = 12 u



12) Umfang = 24,3 u

**Antworten**1. 52. 63. 84. 95. 96. 77. 28. 79. 610. 811. 312. 9