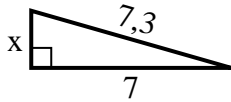


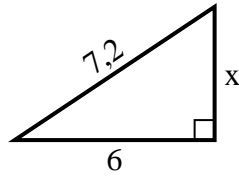


**Finden Sie den Wert von X.**

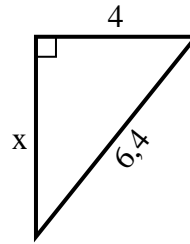
1) Umfang = 16,3 u



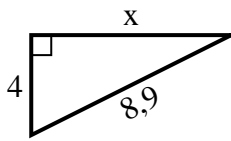
2) Umfang = 17,2 u



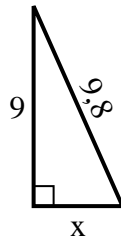
3) Umfang = 15,4 u



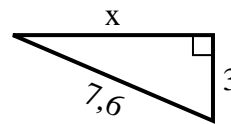
4) Umfang = 20,9 u



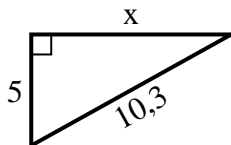
5) Umfang = 22,8 u



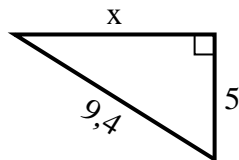
6) Umfang = 17,6 u



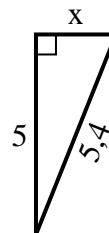
7) Umfang = 24,3 u



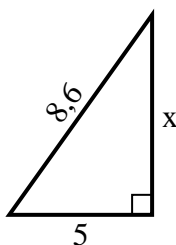
8) Umfang = 22,4 u



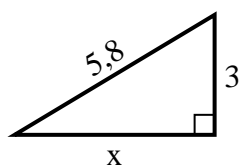
9) Umfang = 12,4 u



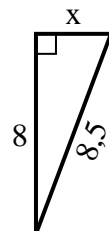
10) Umfang = 20,6 u



11) Umfang = 13,8 u



12) Umfang = 19,5 u

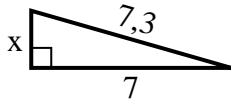


**Antworten**

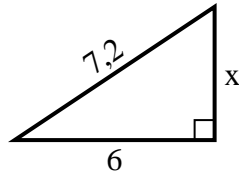
1. \_\_\_\_\_
2. \_\_\_\_\_
3. \_\_\_\_\_
4. \_\_\_\_\_
5. \_\_\_\_\_
6. \_\_\_\_\_
7. \_\_\_\_\_
8. \_\_\_\_\_
9. \_\_\_\_\_
10. \_\_\_\_\_
11. \_\_\_\_\_
12. \_\_\_\_\_

**Finden Sie den Wert von X.**

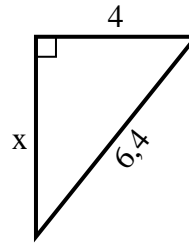
1) Umfang = 16,3 u



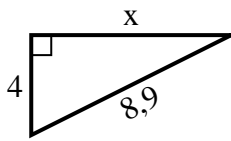
2) Umfang = 17,2 u



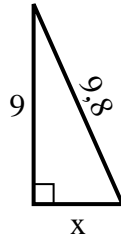
3) Umfang = 15,4 u



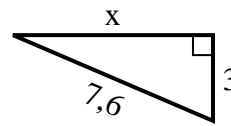
4) Umfang = 20,9 u



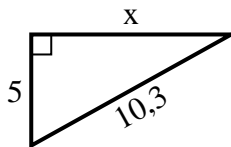
5) Umfang = 22,8 u



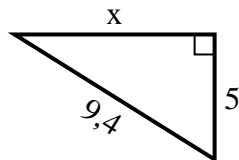
6) Umfang = 17,6 u



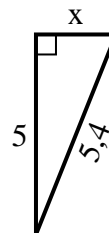
7) Umfang = 24,3 u



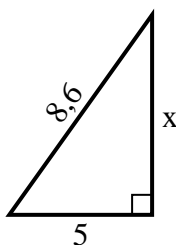
8) Umfang = 22,4 u



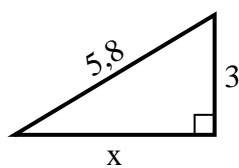
9) Umfang = 12,4 u



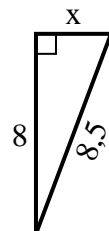
10) Umfang = 20,6 u



11) Umfang = 13,8 u



12) Umfang = 19,5 u

**Antworten**1. 22. 43. 54. 85. 46. 77. 98. 89. 210. 711. 512. 3