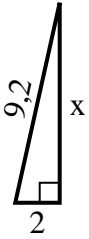


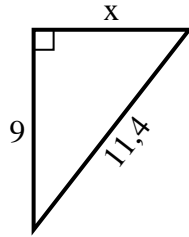


**Finden Sie den Wert von X.**

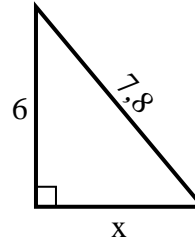
1) Umfang = 20,2 u



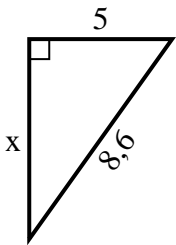
2) Umfang = 27,4 u



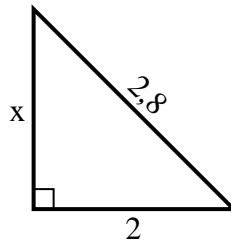
3) Umfang = 18,8 u



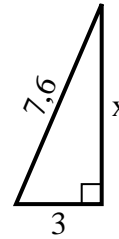
4) Umfang = 20,6 u



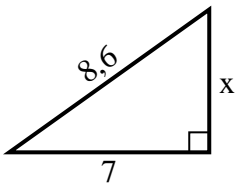
5) Umfang = 6,8 u



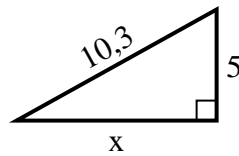
6) Umfang = 17,6 u



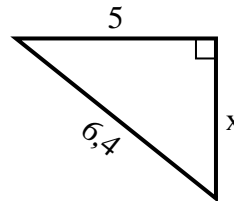
7) Umfang = 20,6 u



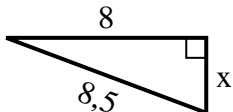
8) Umfang = 24,3 u



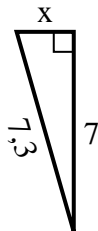
9) Umfang = 15,4 u



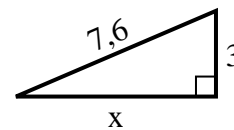
10) Umfang = 19,5 u



11) Umfang = 16,3 u



12) Umfang = 17,6 u

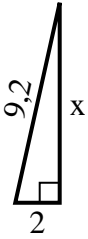


**Antworten**

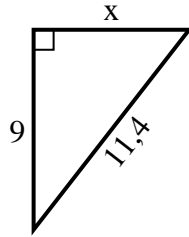
1. \_\_\_\_\_
2. \_\_\_\_\_
3. \_\_\_\_\_
4. \_\_\_\_\_
5. \_\_\_\_\_
6. \_\_\_\_\_
7. \_\_\_\_\_
8. \_\_\_\_\_
9. \_\_\_\_\_
10. \_\_\_\_\_
11. \_\_\_\_\_
12. \_\_\_\_\_

**Finden Sie den Wert von X.**

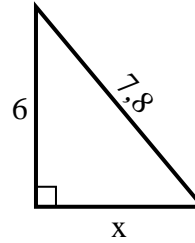
1) Umfang = 20,2 u



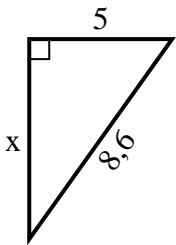
2) Umfang = 27,4 u



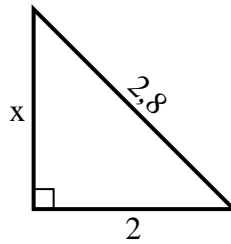
3) Umfang = 18,8 u



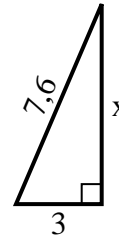
4) Umfang = 20,6 u



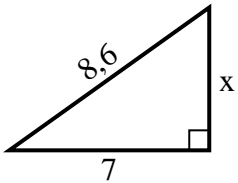
5) Umfang = 6,8 u



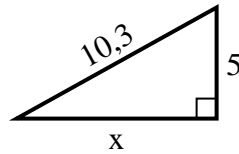
6) Umfang = 17,6 u



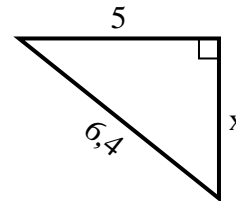
7) Umfang = 20,6 u



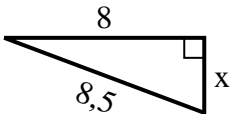
8) Umfang = 24,3 u



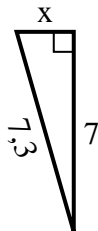
9) Umfang = 15,4 u



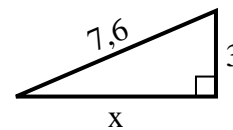
10) Umfang = 19,5 u



11) Umfang = 16,3 u



12) Umfang = 17,6 u

**Antworten**1. **9**2. **7**3. **5**4. **7**5. **2**6. **7**7. **5**8. **9**9. **4**10. **3**11. **2**12. **7**