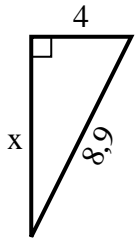


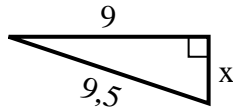


**Finden Sie den Wert von X.**

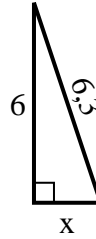
1) Umfang = 20,9 u



2) Umfang = 21,5 u



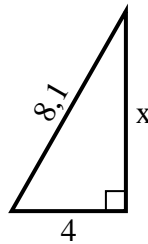
3) Umfang = 14,3 u



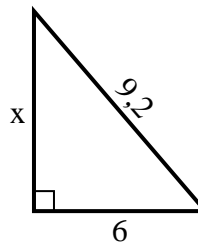
4) Umfang = 18,2 u



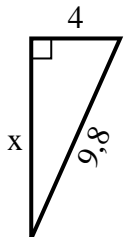
5) Umfang = 19,1 u



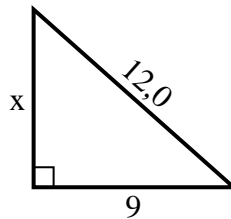
6) Umfang = 22,2 u



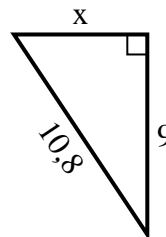
7) Umfang = 22,8 u



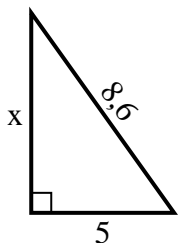
8) Umfang = 29 u



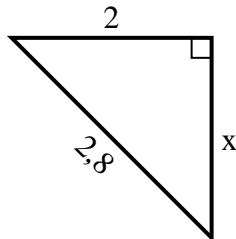
9) Umfang = 25,8 u



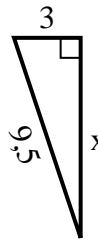
10) Umfang = 20,6 u



11) Umfang = 6,8 u



12) Umfang = 21,5 u

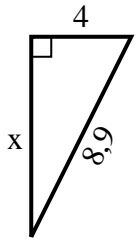


**Antworten**

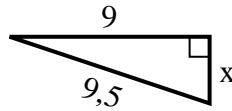
1. \_\_\_\_\_
2. \_\_\_\_\_
3. \_\_\_\_\_
4. \_\_\_\_\_
5. \_\_\_\_\_
6. \_\_\_\_\_
7. \_\_\_\_\_
8. \_\_\_\_\_
9. \_\_\_\_\_
10. \_\_\_\_\_
11. \_\_\_\_\_
12. \_\_\_\_\_

**Finden Sie den Wert von X.**

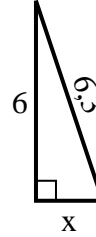
1) Umfang = 20,9 u



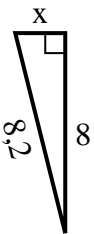
2) Umfang = 21,5 u



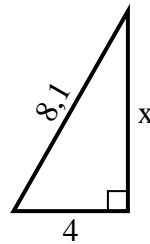
3) Umfang = 14,3 u



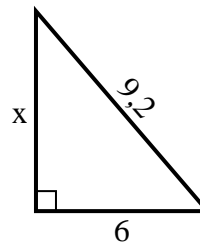
4) Umfang = 18,2 u



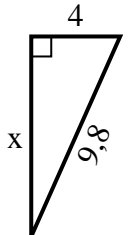
5) Umfang = 19,1 u



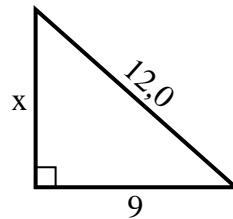
6) Umfang = 22,2 u



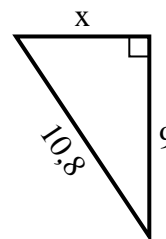
7) Umfang = 22,8 u



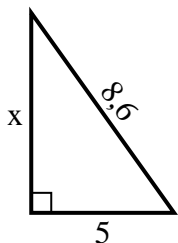
8) Umfang = 29 u



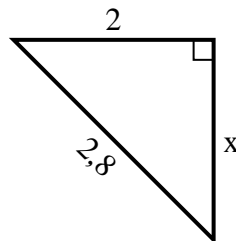
9) Umfang = 25,8 u



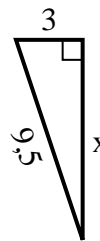
10) Umfang = 20,6 u



11) Umfang = 6,8 u



12) Umfang = 21,5 u

**Antworten**1. 82. 33. 24. 25. 76. 77. 98. 89. 610. 711. 212. 9