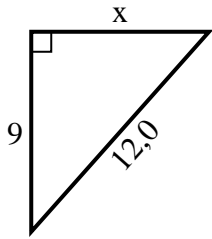


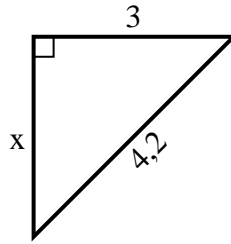


Finden Sie den Wert von X.

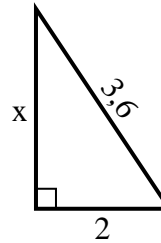
1) Umfang = 29 u



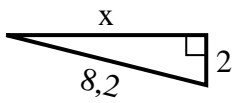
2) Umfang = 10,2 u



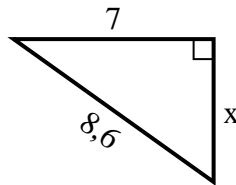
3) Umfang = 8,6 u



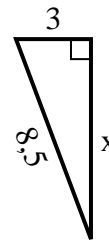
4) Umfang = 18,2 u



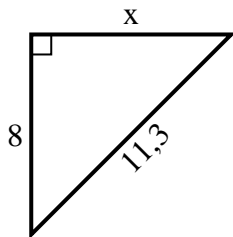
5) Umfang = 20,6 u



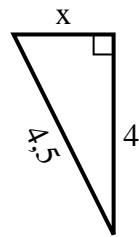
6) Umfang = 19,5 u



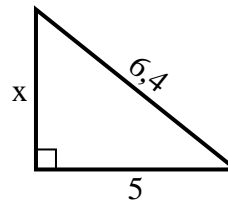
7) Umfang = 27,3 u



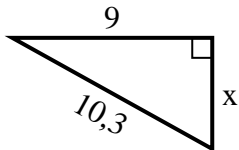
8) Umfang = 10,5 u



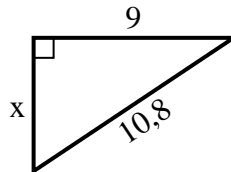
9) Umfang = 15,4 u



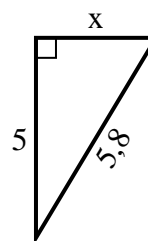
10) Umfang = 24,3 u



11) Umfang = 25,8 u



12) Umfang = 13,8 u

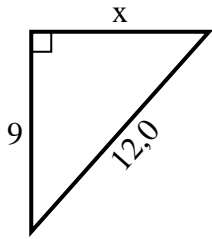


Antworten

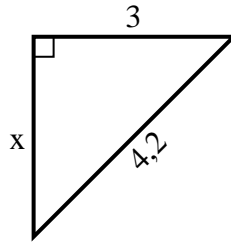
1. _____
2. _____
3. _____
4. _____
5. _____
6. _____
7. _____
8. _____
9. _____
10. _____
11. _____
12. _____

**Finden Sie den Wert von X.**

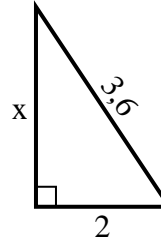
1) Umfang = 29 u



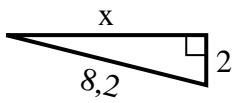
2) Umfang = 10,2 u



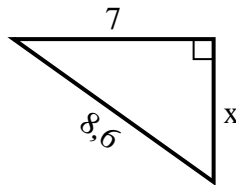
3) Umfang = 8,6 u



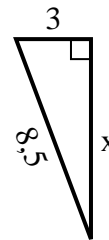
4) Umfang = 18,2 u



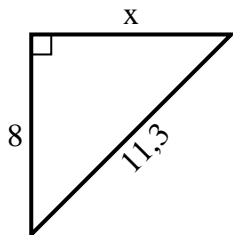
5) Umfang = 20,6 u



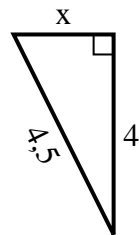
6) Umfang = 19,5 u



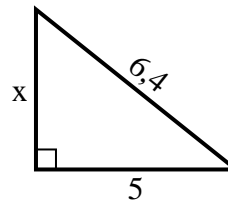
7) Umfang = 27,3 u



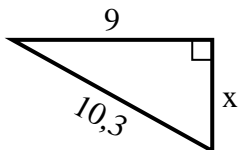
8) Umfang = 10,5 u



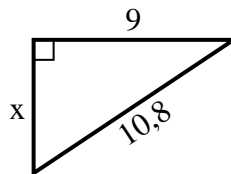
9) Umfang = 15,4 u



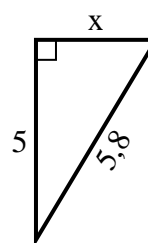
10) Umfang = 24,3 u



11) Umfang = 25,8 u



12) Umfang = 13,8 u

**Antworten**1. 82. 33. 34. 85. 56. 87. 88. 29. 410. 511. 612. 3