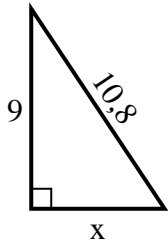


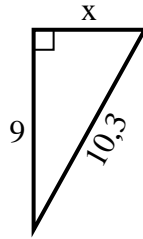


Finden Sie den Wert von X.

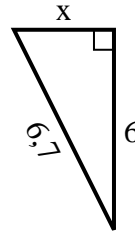
1) Umfang = 25,8 u



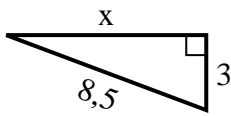
2) Umfang = 24,3 u



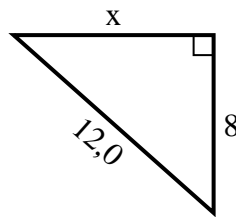
3) Umfang = 15,7 u



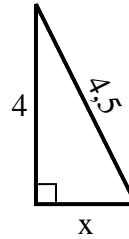
4) Umfang = 19,5 u



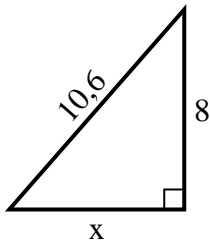
5) Umfang = 29 u



6) Umfang = 10,5 u



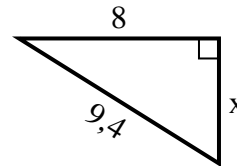
7) Umfang = 25,6 u



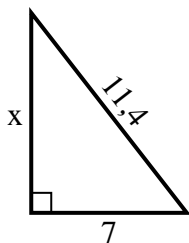
8) Umfang = 14,3 u



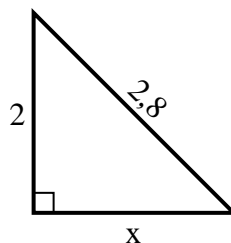
9) Umfang = 22,4 u



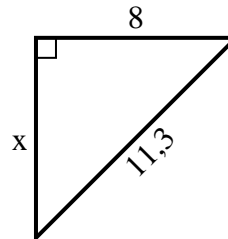
10) Umfang = 27,4 u



11) Umfang = 6,8 u



12) Umfang = 27,3 u

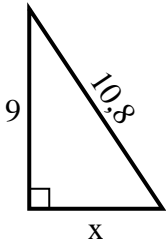


Antworten

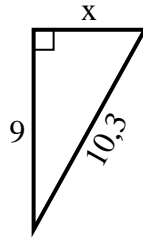
1. _____
2. _____
3. _____
4. _____
5. _____
6. _____
7. _____
8. _____
9. _____
10. _____
11. _____
12. _____

**Finden Sie den Wert von X.****Antworten**

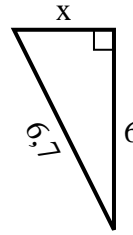
1) Umfang = 25,8 u



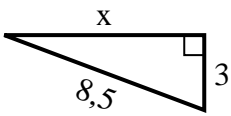
2) Umfang = 24,3 u



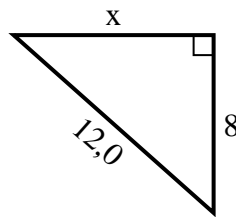
3) Umfang = 15,7 u



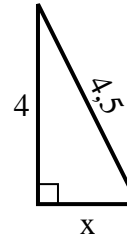
4) Umfang = 19,5 u



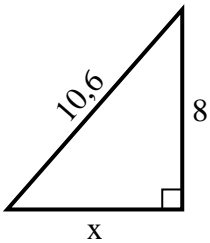
5) Umfang = 29 u



6) Umfang = 10,5 u



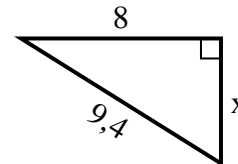
7) Umfang = 25,6 u



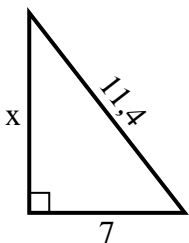
8) Umfang = 14,3 u



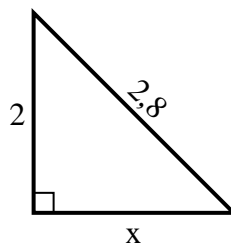
9) Umfang = 22,4 u



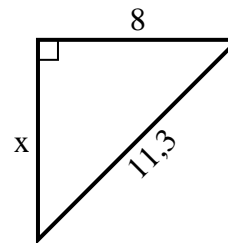
10) Umfang = 27,4 u



11) Umfang = 6,8 u



12) Umfang = 27,3 u

1. 62. 53. 34. 85. 96. 27. 78. 29. 510. 911. 212. 8