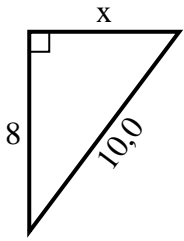


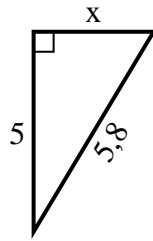


Finden Sie den Wert von X.

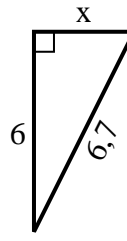
1) Umfang = 24 u



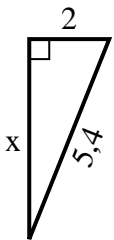
2) Umfang = 13,8 u



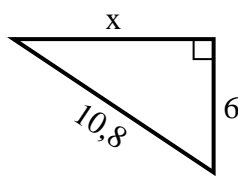
3) Umfang = 15,7 u



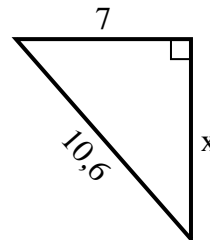
4) Umfang = 12,4 u



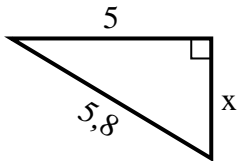
5) Umfang = 25,8 u



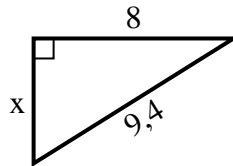
6) Umfang = 25,6 u



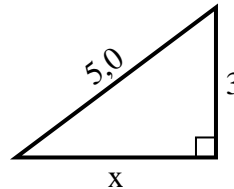
7) Umfang = 13,8 u



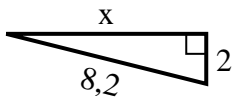
8) Umfang = 22,4 u



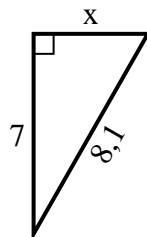
9) Umfang = 12 u



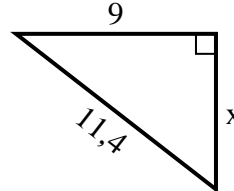
10) Umfang = 18,2 u



11) Umfang = 19,1 u



12) Umfang = 27,4 u

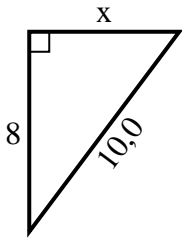


Antworten

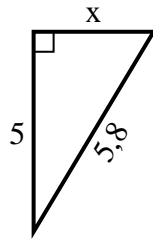
1. _____
2. _____
3. _____
4. _____
5. _____
6. _____
7. _____
8. _____
9. _____
10. _____
11. _____
12. _____

**Finden Sie den Wert von X.****Antworten**

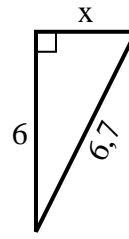
1) Umfang = 24 u



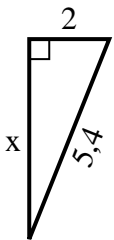
2) Umfang = 13,8 u



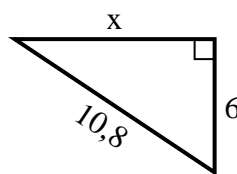
3) Umfang = 15,7 u



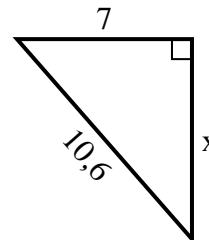
4) Umfang = 12,4 u



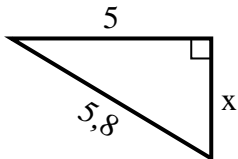
5) Umfang = 25,8 u



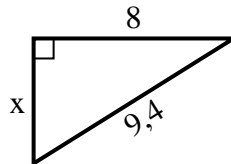
6) Umfang = 25,6 u



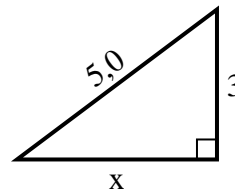
7) Umfang = 13,8 u



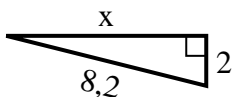
8) Umfang = 22,4 u



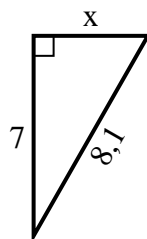
9) Umfang = 12 u



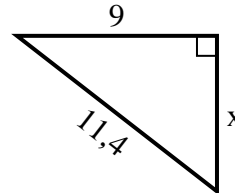
10) Umfang = 18,2 u



11) Umfang = 19,1 u



12) Umfang = 27,4 u



1. 6
2. 3
3. 3
4. 5
5. 9
6. 8
7. 3
8. 5
9. 4
10. 8
11. 4
12. 7