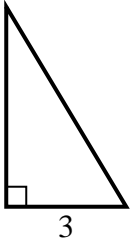


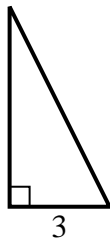


Finden Sie den Wert von X.

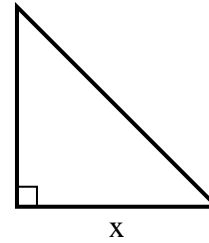
1) area = 7.5 u^2



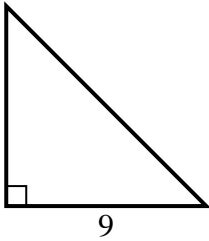
2) area = 9 u^2



3) area = 32 u^2



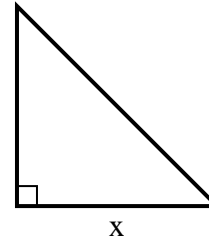
4) area = 40.5 u^2



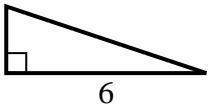
5) area = 9 u^2



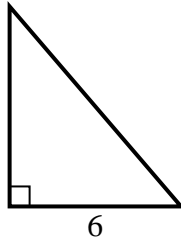
6) area = 24.5 u^2



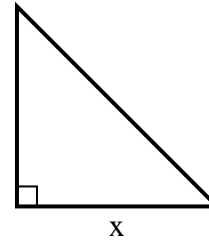
7) area = 6 u^2



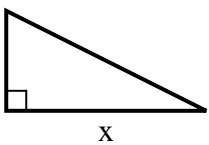
8) area = 21 u^2



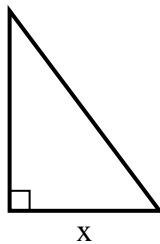
9) area = 18 u^2



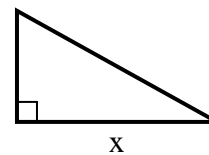
10) area = 16 u^2



11) area = 6 u^2



12) area = 22.5 u^2



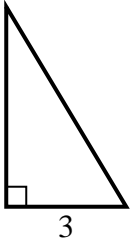
Antworten

1. _____
2. _____
3. _____
4. _____
5. _____
6. _____
7. _____
8. _____
9. _____
10. _____
11. _____
12. _____

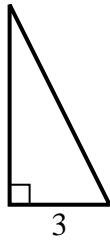


Finden Sie den Wert von X.

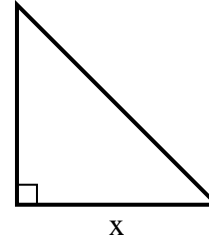
1) area = 7.5 u^2



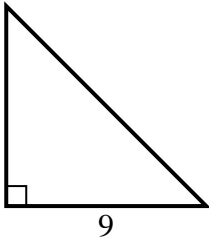
2) area = 9 u^2



3) area = 32 u^2



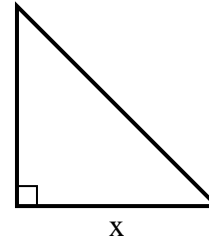
4) area = 40.5 u^2



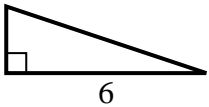
5) area = 9 u^2



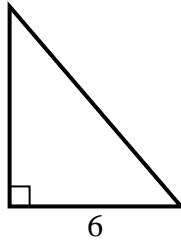
6) area = 24.5 u^2



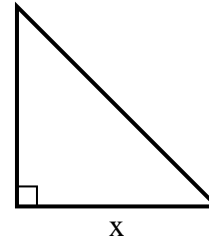
7) area = 6 u^2



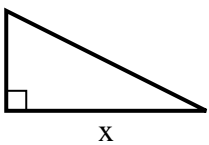
8) area = 21 u^2



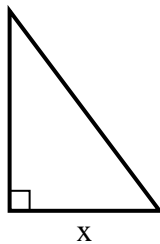
9) area = 18 u^2



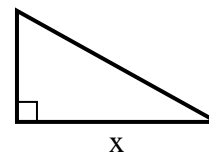
10) area = 16 u^2



11) area = 6 u^2



12) area = 22.5 u^2

**Antworten**1. 52. 63. 84. 95. 96. 77. 28. 79. 610. 811. 312. 9