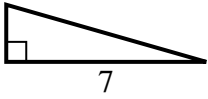


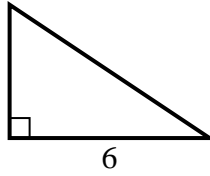


Finden Sie den Wert von X.

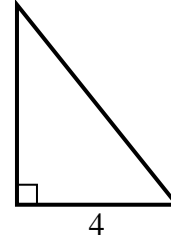
1) area = 7 u^2



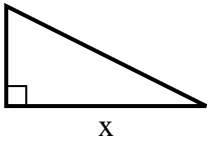
2) area = 12 u^2



3) area = 10 u^2



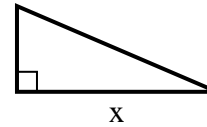
4) area = 16 u^2



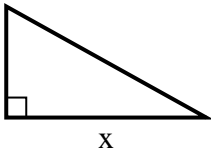
5) area = 18 u^2



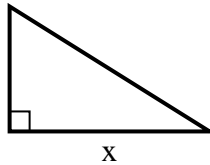
6) area = 10.5 u^2



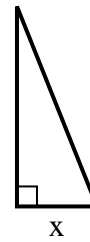
7) area = 22.5 u^2



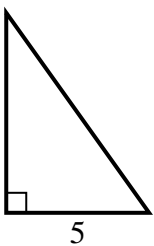
8) area = 20 u^2



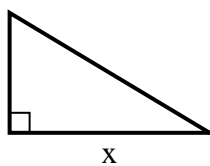
9) area = 5 u^2



10) area = 17.5 u^2



11) area = 7.5 u^2



12) area = 12 u^2

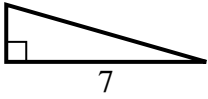


Antworten

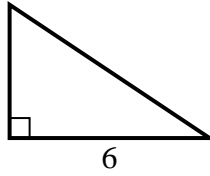
1. _____
2. _____
3. _____
4. _____
5. _____
6. _____
7. _____
8. _____
9. _____
10. _____
11. _____
12. _____

**Finden Sie den Wert von X.**

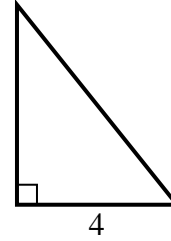
1) $\text{area} = 7 \text{ u}^2$



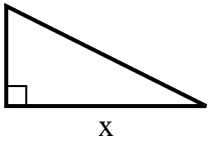
2) $\text{area} = 12 \text{ u}^2$



3) $\text{area} = 10 \text{ u}^2$



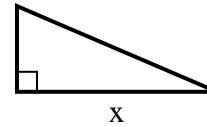
4) $\text{area} = 16 \text{ u}^2$



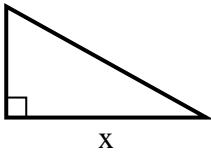
5) $\text{area} = 18 \text{ u}^2$



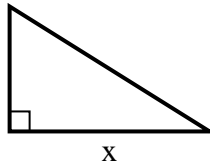
6) $\text{area} = 10.5 \text{ u}^2$



7) $\text{area} = 22.5 \text{ u}^2$



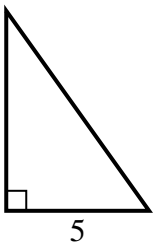
8) $\text{area} = 20 \text{ u}^2$



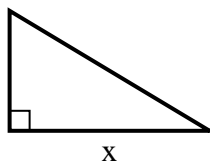
9) $\text{area} = 5 \text{ u}^2$



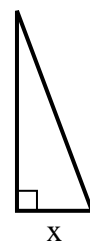
10) $\text{area} = 17.5 \text{ u}^2$



11) $\text{area} = 7.5 \text{ u}^2$



12) $\text{area} = 12 \text{ u}^2$

**Antworten**1. 22. 43. 54. 85. 46. 77. 98. 89. 210. 711. 512. 3