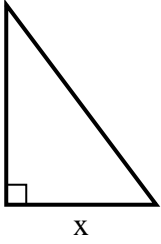


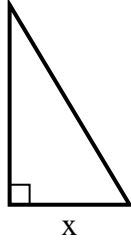


Finden Sie den Wert von X.

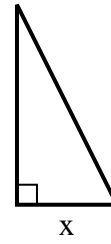
1) area = 24 u^2



2) area = 7.5 u^2



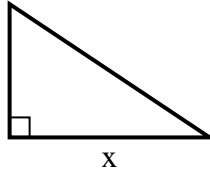
3) area = 9 u^2



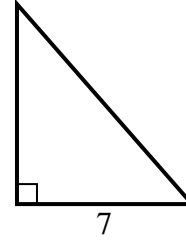
4) area = 5 u^2



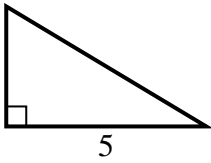
5) area = 27 u^2



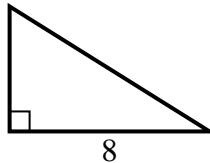
6) area = 28 u^2



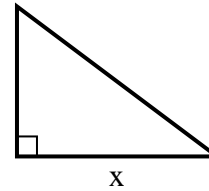
7) area = 7.5 u^2



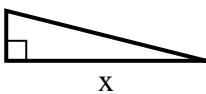
8) area = 20 u^2



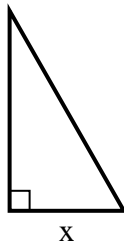
9) area = 6 u^2



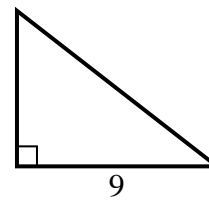
10) area = 8 u^2



11) area = 14 u^2



12) area = 31.5 u^2



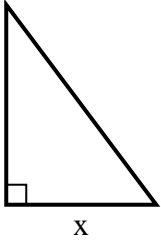
Antworten

1. _____
2. _____
3. _____
4. _____
5. _____
6. _____
7. _____
8. _____
9. _____
10. _____
11. _____
12. _____

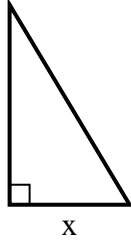


Finden Sie den Wert von X.

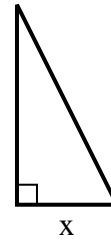
1) area = 24 u^2



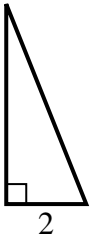
2) area = 7.5 u^2



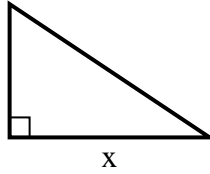
3) area = 9 u^2



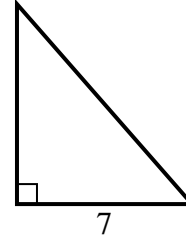
4) area = 5 u^2



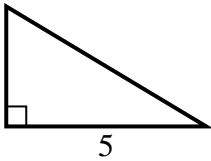
5) area = 27 u^2



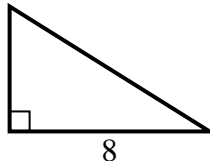
6) area = 28 u^2



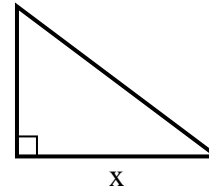
7) area = 7.5 u^2



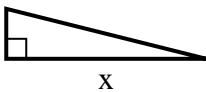
8) area = 20 u^2



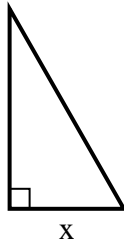
9) area = 6 u^2



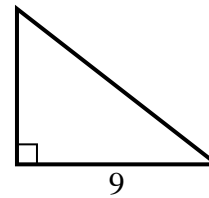
10) area = 8 u^2



11) area = 14 u^2



12) area = 31.5 u^2

**Antworten**1. 62. 33. 34. 55. 96. 87. 38. 59. 410. 811. 412. 7