

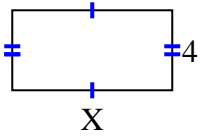


Finden Sie den Wert von X für jede Figur. Jede Zahl ist in Zentimetern (cm) angegeben.

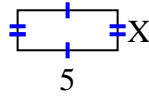
Nicht maßstabsgetreu.

**Antworten**

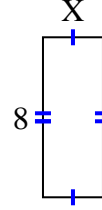
1) area =  $32 \text{ cm}^2$



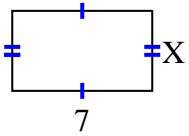
2) area =  $10 \text{ cm}^2$



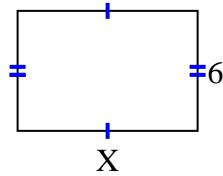
3) area =  $24 \text{ cm}^2$



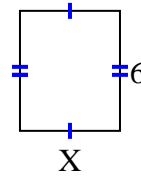
4) area =  $28 \text{ cm}^2$



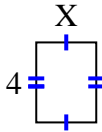
5) area =  $54 \text{ cm}^2$



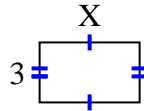
6) area =  $30 \text{ cm}^2$



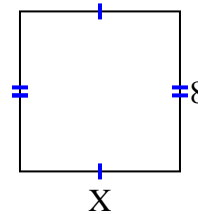
7) area =  $12 \text{ cm}^2$



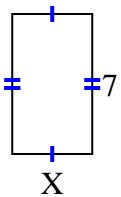
8) area =  $15 \text{ cm}^2$



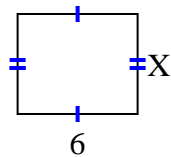
9) area =  $64 \text{ cm}^2$



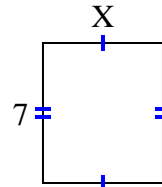
10) area =  $28 \text{ cm}^2$



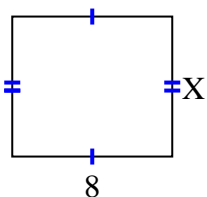
11) area =  $30 \text{ cm}^2$



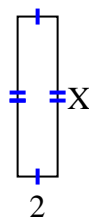
12) area =  $42 \text{ cm}^2$



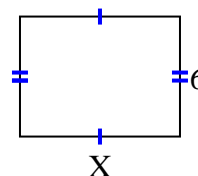
13) area =  $56 \text{ cm}^2$



14) area =  $16 \text{ cm}^2$



15) area =  $48 \text{ cm}^2$



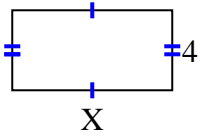
1. \_\_\_\_\_
2. \_\_\_\_\_
3. \_\_\_\_\_
4. \_\_\_\_\_
5. \_\_\_\_\_
6. \_\_\_\_\_
7. \_\_\_\_\_
8. \_\_\_\_\_
9. \_\_\_\_\_
10. \_\_\_\_\_
11. \_\_\_\_\_
12. \_\_\_\_\_
13. \_\_\_\_\_
14. \_\_\_\_\_
15. \_\_\_\_\_



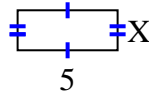
Finden Sie den Wert von X für jede Figur. Jede Zahl ist in Zentimetern (cm) angegeben.

Nicht maßstabsgetreu.

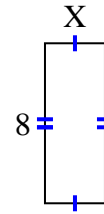
1) area =  $32 \text{ cm}^2$



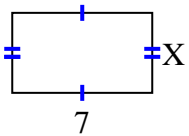
2) area =  $10 \text{ cm}^2$



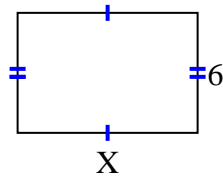
3) area =  $24 \text{ cm}^2$



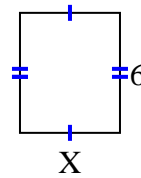
4) area =  $28 \text{ cm}^2$



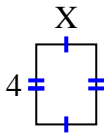
5) area =  $54 \text{ cm}^2$



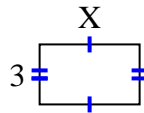
6) area =  $30 \text{ cm}^2$



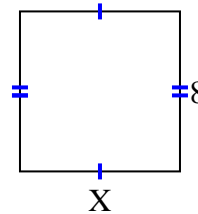
7) area =  $12 \text{ cm}^2$



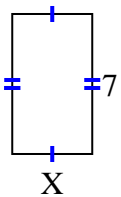
8) area =  $15 \text{ cm}^2$



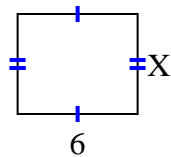
9) area =  $64 \text{ cm}^2$



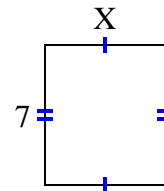
10) area =  $28 \text{ cm}^2$



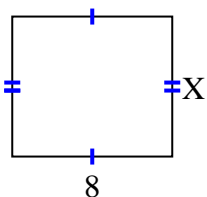
11) area =  $30 \text{ cm}^2$



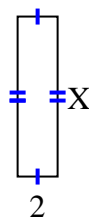
12) area =  $42 \text{ cm}^2$



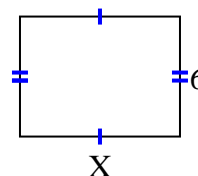
13) area =  $56 \text{ cm}^2$



14) area =  $16 \text{ cm}^2$



15) area =  $48 \text{ cm}^2$

**Antworten**1. 82. 23. 34. 45. 96. 57. 38. 59. 810. 411. 512. 613. 714. 815. 8