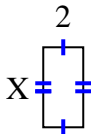




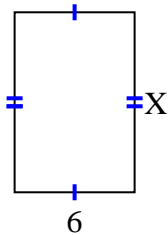
Finden Sie den Wert von X für jede Figur. Jede Zahl ist in Zentimetern (cm) angegeben.

Nicht maßstabsgetreu.

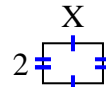
1) area = 8 cm^2



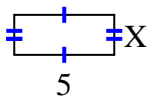
2) area = 54 cm^2



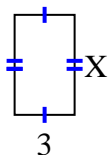
3) area = 6 cm^2



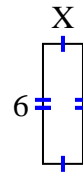
4) area = 10 cm^2



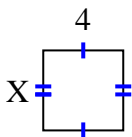
5) area = 15 cm^2



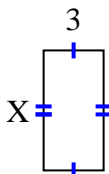
6) area = 12 cm^2



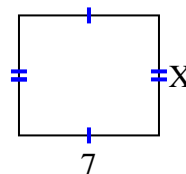
7) area = 16 cm^2



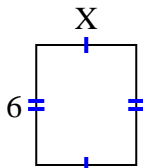
8) area = 18 cm^2



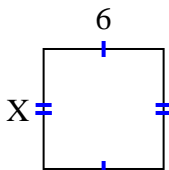
9) area = 42 cm^2



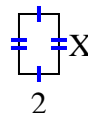
10) area = 30 cm^2



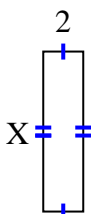
11) area = 36 cm^2



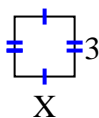
12) area = 6 cm^2



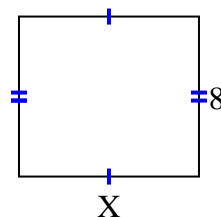
13) area = 16 cm^2



14) area = 9 cm^2



15) area = 72 cm^2

**Antworten**

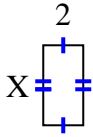
1. _____
2. _____
3. _____
4. _____
5. _____
6. _____
7. _____
8. _____
9. _____
10. _____
11. _____
12. _____
13. _____
14. _____
15. _____



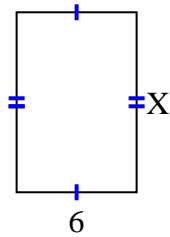
Finden Sie den Wert von X für jede Figur. Jede Zahl ist in Zentimetern (cm) angegeben.

Nicht maßstabsgetreu.

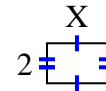
1) area = 8 cm^2



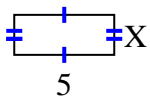
2) area = 54 cm^2



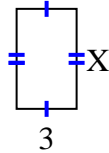
3) area = 6 cm^2



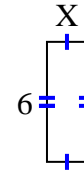
4) area = 10 cm^2



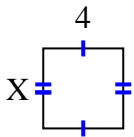
5) area = 15 cm^2



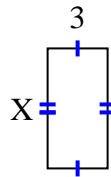
6) area = 12 cm^2



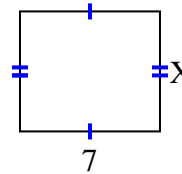
7) area = 16 cm^2



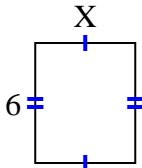
8) area = 18 cm^2



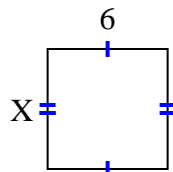
9) area = 42 cm^2



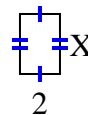
10) area = 30 cm^2



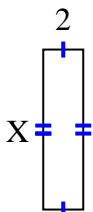
11) area = 36 cm^2



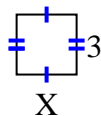
12) area = 6 cm^2



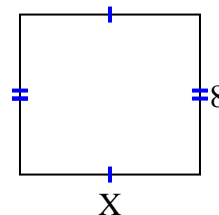
13) area = 16 cm^2



14) area = 9 cm^2



15) area = 72 cm^2

**Antworten**1. 42. 93. 34. 25. 56. 27. 48. 69. 610. 511. 612. 313. 814. 315. 9