

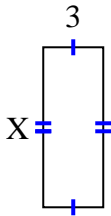


Finden Sie den Wert von X für jede Figur. Jede Zahl ist in Zentimetern (cm) angegeben.

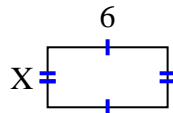
Nicht maßstabsgetreu.

Antworten

1) area = 24 cm^2



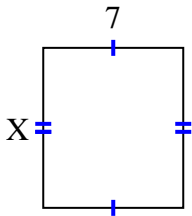
2) area = 18 cm^2



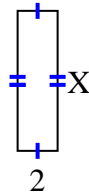
3) area = 4 cm^2



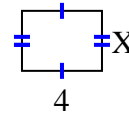
4) area = 56 cm^2



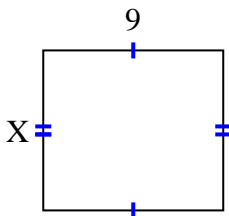
5) area = 14 cm^2



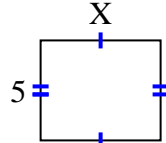
6) area = 12 cm^2



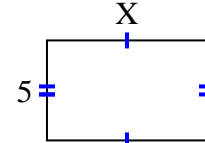
7) area = 72 cm^2



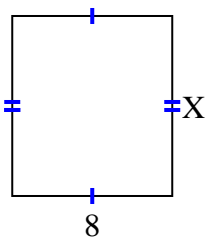
8) area = 30 cm^2



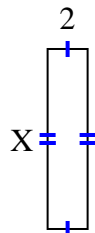
9) area = 40 cm^2



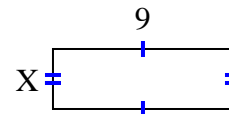
10) area = 72 cm^2



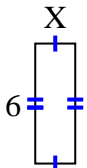
11) area = 18 cm^2



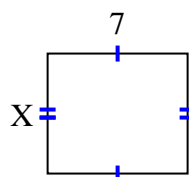
12) area = 27 cm^2



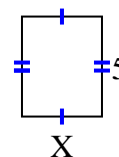
13) area = 12 cm^2



14) area = 42 cm^2



15) area = 20 cm^2

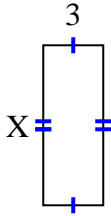


1. _____
2. _____
3. _____
4. _____
5. _____
6. _____
7. _____
8. _____
9. _____
10. _____
11. _____
12. _____
13. _____
14. _____
15. _____

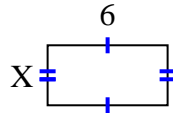


Finden Sie den Wert von X für jede Figur. Jede Zahl ist in Zentimetern (cm) angegeben.
Nicht maßstabsgetreu.

1) area = 24 cm^2



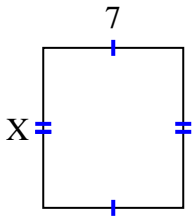
2) area = 18 cm^2



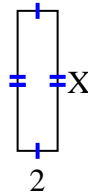
3) area = 4 cm^2



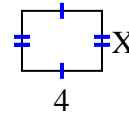
4) area = 56 cm^2



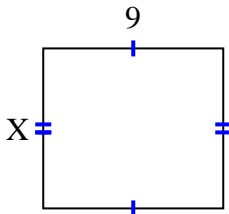
5) area = 14 cm^2



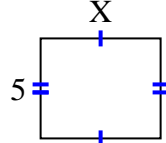
6) area = 12 cm^2



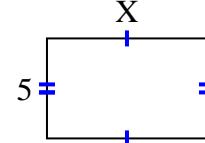
7) area = 72 cm^2



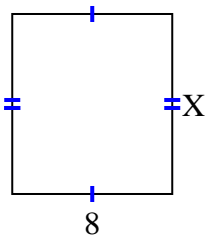
8) area = 30 cm^2



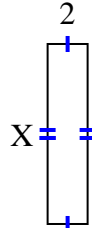
9) area = 40 cm^2



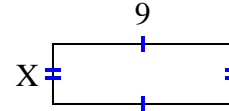
10) area = 72 cm^2



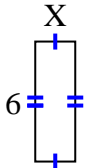
11) area = 18 cm^2



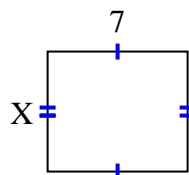
12) area = 27 cm^2



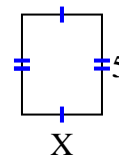
13) area = 12 cm^2



14) area = 42 cm^2



15) area = 20 cm^2

**Antworten**1. 82. 33. 24. 85. 76. 37. 88. 69. 810. 911. 912. 313. 214. 615. 4