

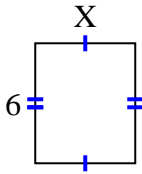


Finden Sie den Wert von X für jede Figur. Jede Zahl ist in Zentimetern (cm) angegeben.

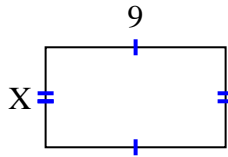
Nicht maßstabsgetreu.

**Antworten**

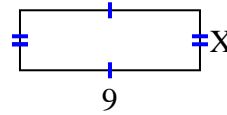
1) area =  $30 \text{ cm}^2$



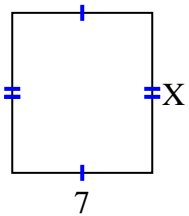
2) area =  $45 \text{ cm}^2$



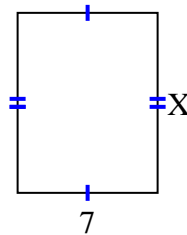
3) area =  $27 \text{ cm}^2$



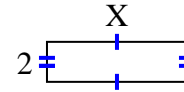
4) area =  $56 \text{ cm}^2$



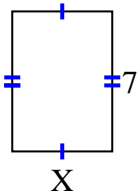
5) area =  $63 \text{ cm}^2$



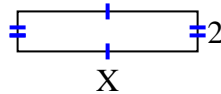
6) area =  $14 \text{ cm}^2$



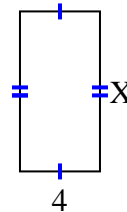
7) area =  $35 \text{ cm}^2$



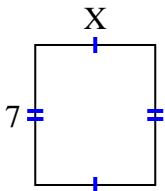
8) area =  $18 \text{ cm}^2$



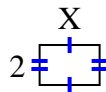
9) area =  $32 \text{ cm}^2$



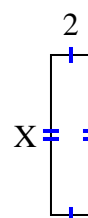
10) area =  $42 \text{ cm}^2$



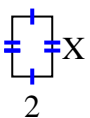
11) area =  $6 \text{ cm}^2$



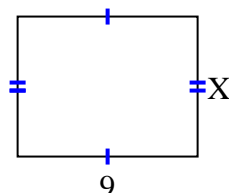
12) area =  $16 \text{ cm}^2$



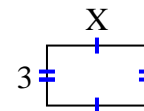
13) area =  $6 \text{ cm}^2$



14) area =  $63 \text{ cm}^2$



15) area =  $15 \text{ cm}^2$

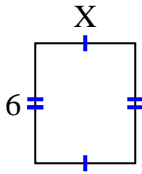


1. \_\_\_\_\_
2. \_\_\_\_\_
3. \_\_\_\_\_
4. \_\_\_\_\_
5. \_\_\_\_\_
6. \_\_\_\_\_
7. \_\_\_\_\_
8. \_\_\_\_\_
9. \_\_\_\_\_
10. \_\_\_\_\_
11. \_\_\_\_\_
12. \_\_\_\_\_
13. \_\_\_\_\_
14. \_\_\_\_\_
15. \_\_\_\_\_

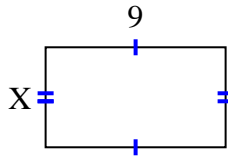


Finden Sie den Wert von X für jede Figur. Jede Zahl ist in Zentimetern (cm) angegeben.  
Nicht maßstabsgetreu.

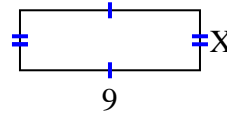
1) area =  $30 \text{ cm}^2$



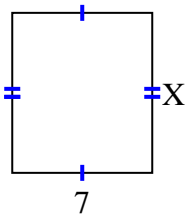
2) area =  $45 \text{ cm}^2$



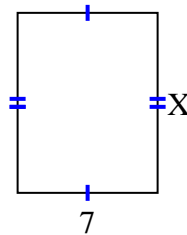
3) area =  $27 \text{ cm}^2$



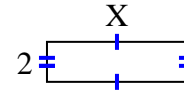
4) area =  $56 \text{ cm}^2$



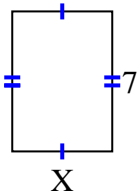
5) area =  $63 \text{ cm}^2$



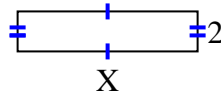
6) area =  $14 \text{ cm}^2$



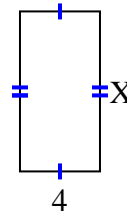
7) area =  $35 \text{ cm}^2$



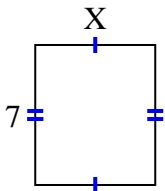
8) area =  $18 \text{ cm}^2$



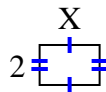
9) area =  $32 \text{ cm}^2$



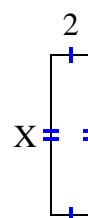
10) area =  $42 \text{ cm}^2$



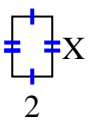
11) area =  $6 \text{ cm}^2$



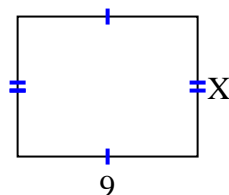
12) area =  $16 \text{ cm}^2$



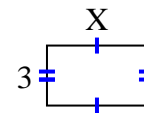
13) area =  $6 \text{ cm}^2$



14) area =  $63 \text{ cm}^2$



15) area =  $15 \text{ cm}^2$

**Antworten**1. 52. 53. 34. 85. 96. 77. 58. 99. 810. 611. 312. 813. 314. 715. 5