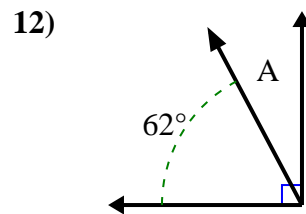
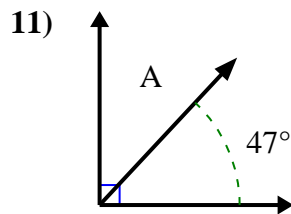
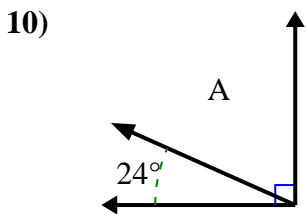
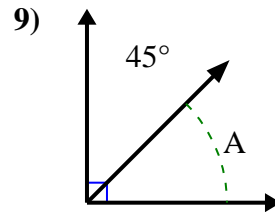
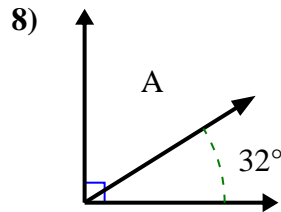
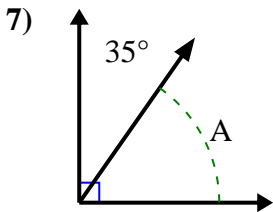
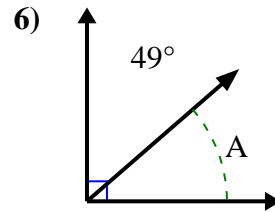
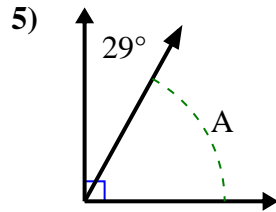
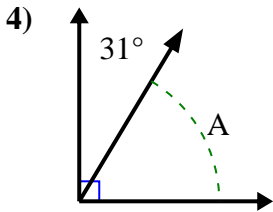
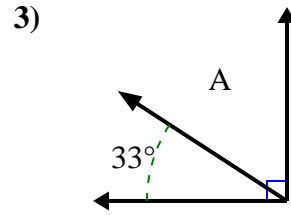
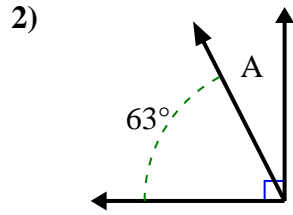
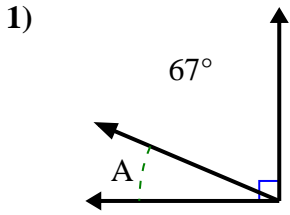




Finden Sie den Wert von 'A' in der Menge der komplementären Winkel.

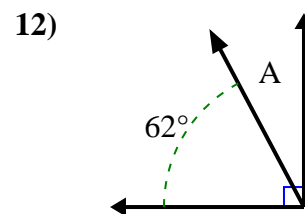
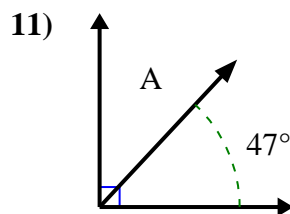
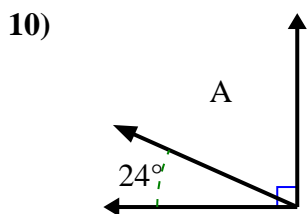
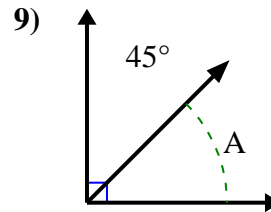
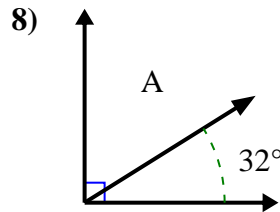
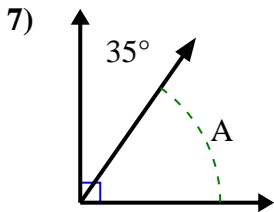
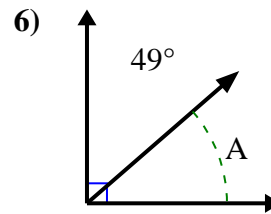
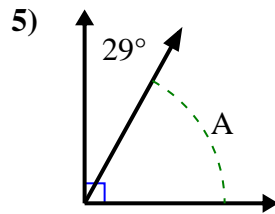
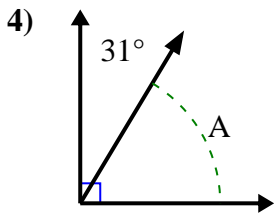
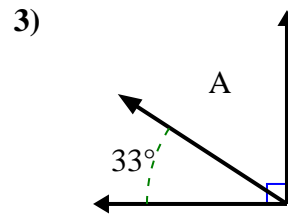
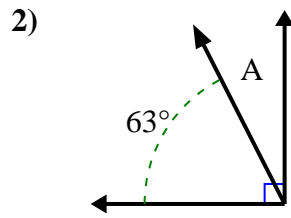
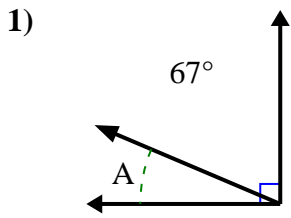
**Antworten**



1. \_\_\_\_\_
2. \_\_\_\_\_
3. \_\_\_\_\_
4. \_\_\_\_\_
5. \_\_\_\_\_
6. \_\_\_\_\_
7. \_\_\_\_\_
8. \_\_\_\_\_
9. \_\_\_\_\_
10. \_\_\_\_\_
11. \_\_\_\_\_
12. \_\_\_\_\_



Finden Sie den Wert von 'A' in der Menge der komplementären Winkel.

**Antworten**1. 23°2. 27°3. 57°4. 59°5. 61°6. 41°7. 55°8. 58°9. 45°10. 66°11. 43°12. 28°