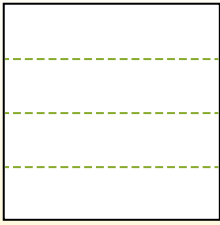


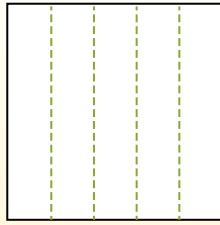


Teile die Form wie beschrieben auf und zähle dann die Anzahl der Felder.

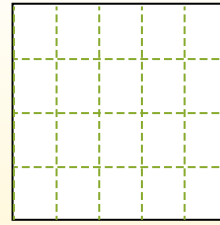
Las filas van de izquierda a derecha.




Las columnas van de arriba a abajo.




Aqui tem 4 linhas e 5 colunas .
Existem 20 caixas no total.




1) 3 Reihen
5 Spalten




2) 3 Reihen
3 Spalten




3) 3 Reihen
2 Spalten




4) 2 Reihen
5 Spalten




5) 4 Reihen
3 Spalten




6) 4 Reihen
4 Spalten




7) 5 Reihen
3 Spalten



8) 3 Reihen
4 Spalten



9) 5 Reihen
5 Spalten



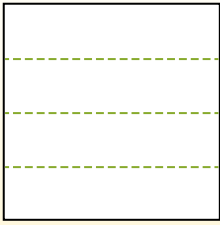
Antworten

- 1. _____
- 2. _____
- 3. _____
- 4. _____
- 5. _____
- 6. _____
- 7. _____
- 8. _____
- 9. _____

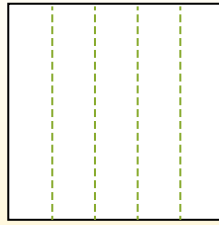


Teile die Form wie beschrieben auf und zähle dann die Anzahl der Felder.

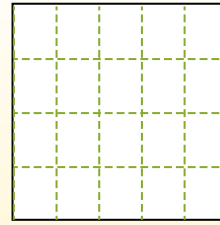
Las filas van de izquierda a derecha.



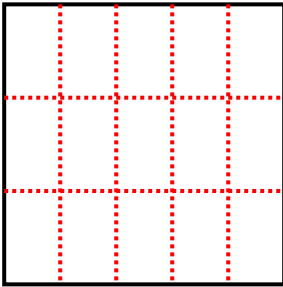
Las columnas van de arriba a abajo.



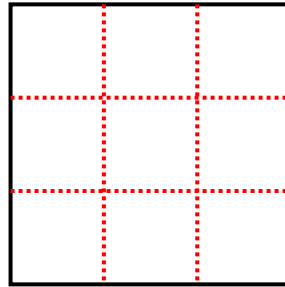
Aqui tem 4 linhas e 5 colunas . Existem 20 caixas no total.



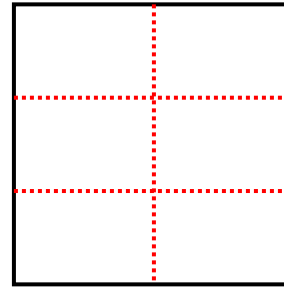
1) 3 Reihen
5 Spalten



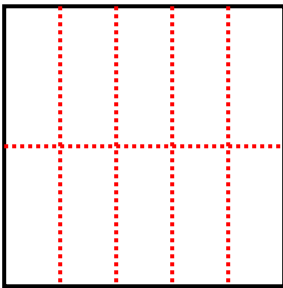
2) 3 Reihen
3 Spalten



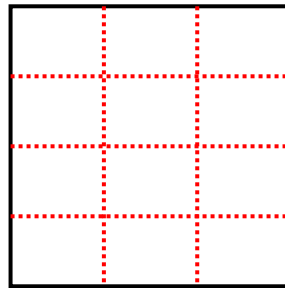
3) 3 Reihen
2 Spalten



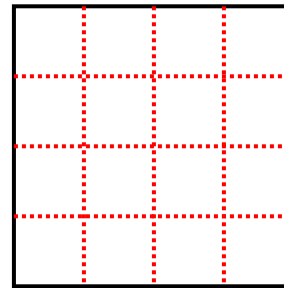
4) 2 Reihen
5 Spalten



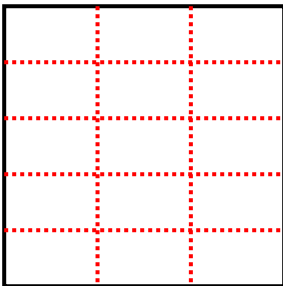
5) 4 Reihen
3 Spalten



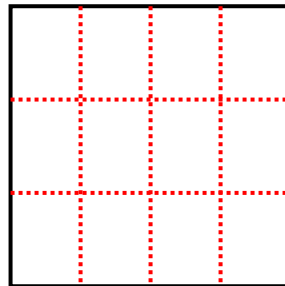
6) 4 Reihen
4 Spalten



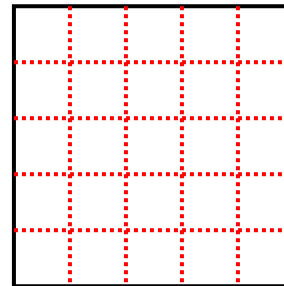
7) 5 Reihen
3 Spalten



8) 3 Reihen
4 Spalten



9) 5 Reihen
5 Spalten



Antworten

- 1. **15**
- 2. **9**
- 3. **6**
- 4. **10**
- 5. **12**
- 6. **16**
- 7. **15**
- 8. **12**
- 9. **25**