





Benutze die vorgegebenen Anordnungen um jede Aufgabe zu lösen.

Antworten

1) $11 \cdot 10 =$



2) $17 \cdot 10 =$



1. _____

2. _____


3. _____

4. _____


5. _____

6. _____


3) $10 \cdot 13 =$




4) $10 \cdot 17 =$



5) $10 \cdot 19 =$



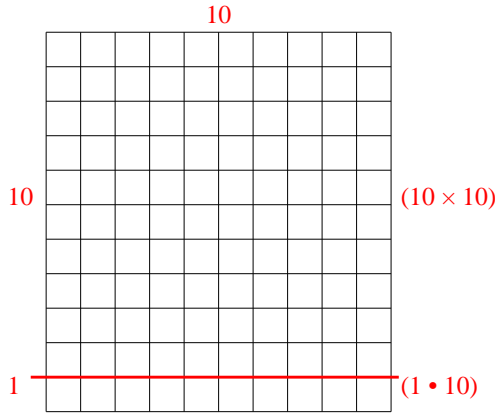
6) $10 \cdot 15 =$



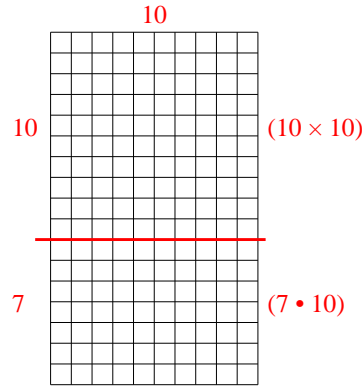


Benutze die vorgegebenen Anordnungen um jede Aufgabe zu lösen.

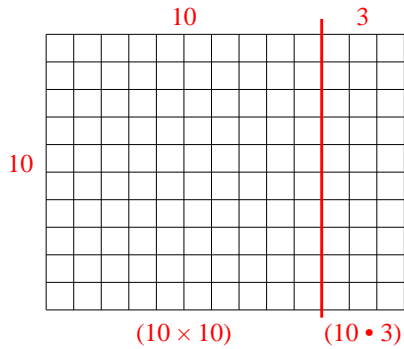
1) $11 \cdot 10 =$



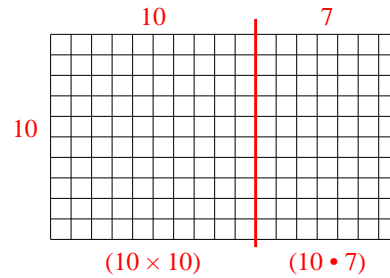
2) $17 \cdot 10 =$



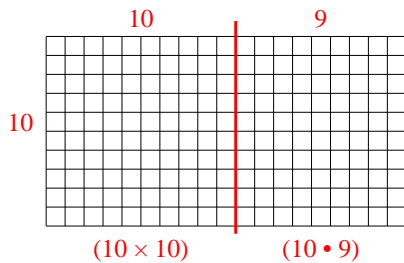
3) $10 \cdot 13 =$



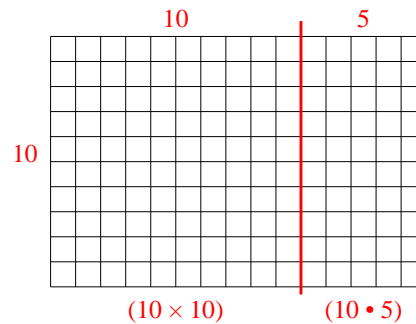
4) $10 \cdot 17 =$



5) $10 \cdot 19 =$



6) $10 \cdot 15 =$



Antworten

1. **110**

2. **170**

3. **130**

4. **170**

5. **190**

6. **150**